





Name: \_\_\_\_\_


Get a fidget spinner! Spin it.

I needed to spin \_\_\_\_\_ time(s) to finish.

Find the GCF using the Birthday Cake method.

<div style="display: flex; justify-content: space-between;"> <div style="width: 80%;"> <table style="width: 100%; border-collapse: collapse;"> <tr><td style="width: 20px; text-align: right;">5</td><td style="border: 1px solid black; padding: 5px;">270</td><td style="border: 1px solid black; padding: 5px;">150</td></tr> <tr><td style="width: 20px; text-align: right;">2</td><td style="border: 1px solid black; padding: 5px;">54</td><td style="border: 1px solid black; padding: 5px;">30</td></tr> <tr><td style="width: 20px; text-align: right;">3</td><td style="border: 1px solid black; padding: 5px;">27</td><td style="border: 1px solid black; padding: 5px;">15</td></tr> <tr><td></td><td style="padding: 5px;">9</td><td style="padding: 5px;">5</td></tr> </table> </div> <div style="width: 15%; text-align: center;"> <p>GCF: _____</p> </div> </div>	5	270	150	2	54	30	3	27	15		9	5	<table style="width: 100%; border-collapse: collapse;"> <tr><td style="width: 20px; text-align: right;">3</td><td style="border: 1px solid black; padding: 5px;">33</td><td style="border: 1px solid black; padding: 5px;">24</td></tr> <tr><td colspan="3" style="padding: 20px 0 0 0;">GCF: _____</td></tr> </table>	3	33	24	GCF: _____		
5	270	150																	
2	54	30																	
3	27	15																	
	9	5																	
3	33	24																	
GCF: _____																			

GCF:  $2 \times 3 \times 5 = 30$



<table style="width: 100%; border-collapse: collapse;"> <tr><td style="width: 20px; text-align: right;">5</td><td style="border: 1px solid black; padding: 5px;">55</td><td style="border: 1px solid black; padding: 5px;">35</td></tr> <tr><td colspan="3" style="padding: 20px 0 0 0;">GCF: _____</td></tr> </table>	5	55	35	GCF: _____			<table style="width: 100%; border-collapse: collapse;"> <tr><td style="width: 20px; text-align: right;">2</td><td style="border: 1px solid black; padding: 5px;">28</td><td style="border: 1px solid black; padding: 5px;">40</td></tr> <tr><td colspan="3" style="padding: 20px 0 0 0;">GCF: _____</td></tr> </table>	2	28	40	GCF: _____			<table style="width: 100%; border-collapse: collapse;"> <tr><td style="width: 20px; text-align: right;">3</td><td style="border: 1px solid black; padding: 5px;">36</td><td style="border: 1px solid black; padding: 5px;">18</td></tr> <tr><td colspan="3" style="padding: 20px 0 0 0;">GCF: _____</td></tr> </table>	3	36	18	GCF: _____		
5	55	35																		
GCF: _____																				
2	28	40																		
GCF: _____																				
3	36	18																		
GCF: _____																				

<table style="width: 100%; border-collapse: collapse;"> <tr><td style="width: 20px; text-align: right;">2</td><td style="border: 1px solid black; padding: 5px;">54</td><td style="border: 1px solid black; padding: 5px;">30</td></tr> <tr><td colspan="3" style="padding: 20px 0 0 0;">GCF: _____</td></tr> </table>	2	54	30	GCF: _____			<table style="width: 100%; border-collapse: collapse;"> <tr><td style="width: 20px; text-align: right;">2</td><td style="border: 1px solid black; padding: 5px;">40</td><td style="border: 1px solid black; padding: 5px;">32</td></tr> <tr><td colspan="3" style="padding: 20px 0 0 0;">GCF: _____</td></tr> </table>	2	40	32	GCF: _____			<table style="width: 100%; border-collapse: collapse;"> <tr><td style="width: 20px; text-align: right;">2</td><td style="border: 1px solid black; padding: 5px;">30</td><td style="border: 1px solid black; padding: 5px;">80</td></tr> <tr><td colspan="3" style="padding: 20px 0 0 0;">GCF: _____</td></tr> </table>	2	30	80	GCF: _____		
2	54	30																		
GCF: _____																				
2	40	32																		
GCF: _____																				
2	30	80																		
GCF: _____																				



Name: \_\_\_\_\_

Spin again.

I needed to spin \_\_\_\_\_ time(s) to finish.

Find the GCF using the Birthday Cake method.

3	75	120	150	5	35	30	25
5	25	40	50				
	5	8	10				
GCF: $5 \times 3 = 15$				GCF: _____			

4	48	40	44	5	220	140	100
GCF: _____				GCF: _____			

66	114	108	18	20	30
GCF: _____			GCF: _____		

Name: \_\_\_\_\_

Gavin's father is a police officer. He works from 8:30 a.m. until 3:00 p.m. for four days each week. How long does Gavin's father work in a week?

The parade began at 2:30 p.m. It lasted for 63 minutes. What time was it over?

Mr. Jackson bought  $2\frac{1}{4}$  pounds of ham to make sandwiches for Police Week lunch in the park. The ham cost \$3.70. What was the cost of the ham per pound? (Round your answer off to the nearest cent.)

For 729,451,505,687, write the digit that is in the hundred thousands place.

\_\_\_\_\_

How many feet are in 3 yards?

\_\_\_\_\_ feet

How far do you think it is from your desk to your teacher's desk? Write an estimate of the distance you think it could be.

$$\begin{array}{r} 43 \\ + 25 \\ \hline \end{array}$$

Write a letter that has a line of symmetry.

\_\_\_\_\_

29 km = \_\_\_\_\_ m

$4 \times 6 =$

$1 \text{ lb} = 16 \text{ oz}$

$25 \text{ lb} = \text{_____ oz}$

Name: \_\_\_\_\_

The vowels are missing in the word search.  
Fill in the missing vowels and circle the words.

[ ] [ ] Z C [ ] Y [ ] [ ] L D  
 [ ] C C [ ] S [ ] [ ] N N B  
 [ ] C [ ] B N [ ] Y [ ] C R  
 F [ ] C [ ] S K [ ] P T [ ]  
 F N [ ] R [ ] V H T T D  
 [ ] C T R N [ ] [ ] D [ ] G  
 R [ ] T [ ] S R M C C [ ]  
 T P [ ] W [ ] Y B S K T  
 [ ] T N N T S L [ ] [ ] [ ]  
 F I N A L C [ ] [ ] T T

- TICKET • KEPT • HUMBLE • CONCEPT  
 VARY • COTTON • FINAL • YIELD  
 SUE • OCCASION • BURROW  
 BRIDGE • EFFORT • SUNSET

Jessica wants to call Holly.  
 Holly is on vacation in Asia. It  
 is a time difference of  
 fourteen hours. Holly's time is  
 always later than Jessica's  
 time. If it is 10:12 P.M. where  
 Jessica lives, then what time is  
 it where Holly is?

Holly has two pairs of pink  
 socks, six pairs of white  
 socks, three pairs of blue  
 socks, and three pairs of  
 plaid socks. How many  
 socks does she have in all?

$$\begin{array}{r} 97 \\ - 45 \\ \hline \end{array}$$

$9 \times 11 =$

Rose is getting messy. She has made a 4'  
 x 5' x 1' cube made out of clay blocks.  
 She wants her art project to have at  
 least a surface area of 38 square feet.  
 Does she need to add more clay?

$$\begin{array}{r} 369 \\ + 404 \\ \hline \end{array}$$

$$\begin{array}{r} 575 \\ - 254 \\ \hline \end{array}$$

$66 \div 6 =$

Write whether this fragment is missing a subject or a verb.

Elsa, Anna, and Olaf

Name: \_\_\_\_\_

### Sudoku Sums of 7

Each row, column, and box must have the numbers 1 through 6.  
 Hint: Look for sudoku sums. The sum of the two boxes inside of  
 the dashed lines is 7.

Here is an example of a sudoku sum of 7:



			4		
6		1			2
		5	3		
2	3				4
5			6		

10 x 8 =

David invented a robotic bug. The bug can crawl six centimeters in twenty-three seconds. How long would it take the bug to crawl forty-two centimeters?

List four of the smallest whole numbers that are greater than 16, are multiples of 5, and are not multiples of 6.

$(8 + 5) + 4 =$

Circle the relative adverb.  
 Do you know why Desi had to stay after school?



Name: \_\_\_\_\_

$$\begin{array}{r} 131 \\ - 35 \\ \hline \end{array}$$

$$\begin{array}{r} 89 \\ - 79 \\ \hline \end{array}$$

$$\begin{array}{r} 99 \\ - 86 \\ \hline \end{array}$$

$$\begin{array}{r} 55 \\ - 24 \\ \hline \end{array}$$

$$\begin{array}{r} 63 \\ - 41 \\ \hline \end{array}$$

$$\begin{array}{r} 113 \\ - 58 \\ \hline \end{array}$$

$$\begin{array}{r} 99 \\ - 11 \\ \hline \end{array}$$

$$\begin{array}{r} 61 \\ - 20 \\ \hline \end{array}$$

$$\begin{array}{r} 168 \\ - 79 \\ \hline \end{array}$$

$$\begin{array}{r} 177 \\ - 78 \\ \hline \end{array}$$

$$\begin{array}{r} 90 \\ - 57 \\ \hline \end{array}$$

$$\begin{array}{r} 89 \\ - 32 \\ \hline \end{array}$$

$$\begin{array}{r} 54 \\ - 35 \\ \hline \end{array}$$

$$\begin{array}{r} 114 \\ - 38 \\ \hline \end{array}$$

$$\begin{array}{r} 127 \\ - 78 \\ \hline \end{array}$$

$$\begin{array}{r} 100 \\ - 58 \\ \hline \end{array}$$

$$\begin{array}{r} 159 \\ - 87 \\ \hline \end{array}$$

$$\begin{array}{r} 153 \\ - 66 \\ \hline \end{array}$$

$$\begin{array}{r} 155 \\ - 71 \\ \hline \end{array}$$

$$\begin{array}{r} 74 \\ - 31 \\ \hline \end{array}$$

$$\begin{array}{r} 87 \\ - 55 \\ \hline \end{array}$$

$$\begin{array}{r} 77 \\ - 65 \\ \hline \end{array}$$

$$\begin{array}{r} 128 \\ - 44 \\ \hline \end{array}$$

$$\begin{array}{r} 70 \\ - 39 \\ \hline \end{array}$$

$$\begin{array}{r} 163 \\ - 71 \\ \hline \end{array}$$

$$\begin{array}{r} 80 \\ - 52 \\ \hline \end{array}$$

$$\begin{array}{r} 122 \\ - 43 \\ \hline \end{array}$$

$$\begin{array}{r} 72 \\ - 51 \\ \hline \end{array}$$

$$\begin{array}{r} 81 \\ - 38 \\ \hline \end{array}$$

$$\begin{array}{r} 148 \\ - 91 \\ \hline \end{array}$$

$$\begin{array}{r} 135 \\ - 42 \\ \hline \end{array}$$

$$\begin{array}{r} 81 \\ - 63 \\ \hline \end{array}$$

$$\begin{array}{r} 151 \\ - 52 \\ \hline \end{array}$$

$$\begin{array}{r} 65 \\ - 23 \\ \hline \end{array}$$

$$\begin{array}{r} 156 \\ - 80 \\ \hline \end{array}$$

$$\begin{array}{r} 116 \\ - 37 \\ \hline \end{array}$$

$$\begin{array}{r} 83 \\ - 69 \\ \hline \end{array}$$

$$\begin{array}{r} 102 \\ - 54 \\ \hline \end{array}$$

$$\begin{array}{r} 102 \\ - 86 \\ \hline \end{array}$$

$$\begin{array}{r} 160 \\ - 62 \\ \hline \end{array}$$

$$\begin{array}{r} 83 \\ - 71 \\ \hline \end{array}$$

$$\begin{array}{r} 66 \\ - 51 \\ \hline \end{array}$$

$\begin{array}{r} 6 \\ + 4 \\ \hline \square \end{array}$
$\begin{array}{r} + 5 \\ \hline \square \end{array}$
$\begin{array}{r} + 6 \\ \hline \square \end{array}$
$\begin{array}{r} 21 \\ + \square \\ \hline \square \end{array}$
$\begin{array}{r} 28 \\ + \square \\ \hline \square \end{array}$
$\begin{array}{r} 32 \\ - 4 \\ \hline \square \end{array}$
$\begin{array}{r} - 5 \\ \hline \square \end{array}$
$\begin{array}{r} - 9 \\ \hline \square \end{array}$
$\begin{array}{r} + 7 \\ \hline \square \end{array}$
$\begin{array}{r} 21 \\ + \square \\ \hline \square \end{array}$
$\begin{array}{r} 29 \\ + \square \\ \hline \square \end{array}$
$37$



Name: \_\_\_\_\_

$10 + -8 = \underline{\quad}$

$10 - 8 = \underline{\quad}$

$16 - 1 = \underline{\quad}$

$16 + -1 = \underline{\quad}$

$12 - 1 = \underline{\quad}$

$12 + -1 = \underline{\quad}$

$18 - 15 = \underline{\quad}$

$18 + -15 = \underline{\quad}$

$9 - 1 = \underline{\quad}$

$9 + -1 = \underline{\quad}$

$-8 + 10 = \underline{\quad}$

$8 + -3 = \underline{\quad}$

$8 - 3 = \underline{\quad}$

$15 + -8 = \underline{\quad}$

$15 - 8 = \underline{\quad}$

$13 + -9 = \underline{\quad}$

$13 - 9 = \underline{\quad}$

$-4 + 15 = \underline{\quad}$

$11 + -6 = \underline{\quad}$

$-13 + 17 = \underline{\quad}$

$11 - 6 = \underline{\quad}$

$9 - 7 = \underline{\quad}$

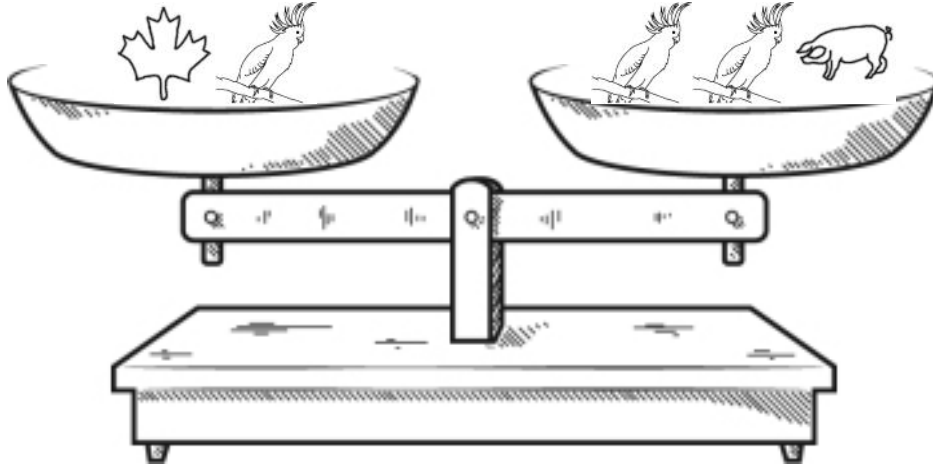
$9 + -7 = \underline{\quad}$


$15 - 10 = \underline{\quad}$


$15 + -10 = \underline{\quad}$


$-6 + 12 = \underline{\quad}$


Name: \_\_\_\_\_






  
 True                       False



  
 True                       False


  
 True                       False


  
 True                       False


  
 True                       False


  
 True                       False


  
 True                       False

**Did you find that two are true? If not, look again!**

**Hint: If you see the same pieces on both sides, you might need to remove both pieces.  
You should only mark TRUE if you are absolutely sure it is correct!**

80 ÷ 10 x 10

How many centimeters in 490.4 meters?

39, \_\_\_\_\_, 65, 78, 91, 104,  
117, 130, 143

Name: \_\_\_\_\_

## Can you guess the word?

No duplicate letters can be used.

**S** T O N E

The letter **S** is in the word  
and is in the correct spot.

I **N** E P T

The letter **N** is in the word,  
but **N** is not in that spot.

A B C D E F G H I J K L

A list of letters will be given that  
have not been used. Good luck!

Hint: There are no duplicate letters in the answer.

**S** T U D Y

W **I** D T H

A B C E F G J K L M N O P Q R V  
X Z

□ □ □ □ □

Let's check if you guessed correctly. Look across or  
down to find the correct answer.

HAWHHGJHMHHIHYTETFT  
YWCHTEIDMRICFTTSDHH  
SYIHHHDWQWDNDWC IUI  
DDICIDCYCVIHJYTTTTT  
FHSTUDYHTYD TTGDTC TC  
IDPTZCTEDOTDCTS FHYH  
WCRIS I I H T M H T M W K D V I X  
CGHDBHF I H P Y S X I P M D W H

Hint: There are no duplicate letters in the answer.

M I **G** H T

Y O U **N** G

A L **O** **N** G

B C D E F J K P Q R S V W X Z

□ □ □ □ □

Let's check if you guessed correctly. Look diagonally  
to find the correct answer. (DIAGONAL!)

OW FLOWANYHOOH XG  
OYRFAURUGOGYBWG  
NOUOXLTORDURGGO  
WOYNNNOARYNNNGR  
WGNOZGINGYNNGDU  
LWOVUUOOGWYCGRR

Hint: There are no duplicate letters in the answer.

**A** **N** **G** **E** **L**

**E** **Q** **U** **A** **L**

**S** **T** **E** **A** **L**

B C D F H I J K M O P R V W X Y  
Z

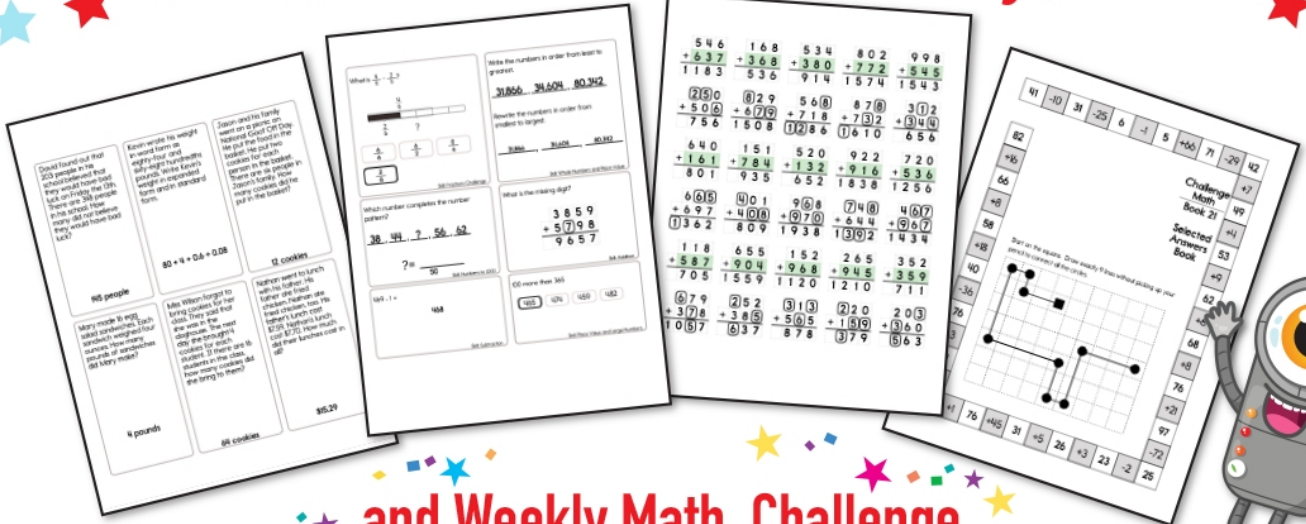
□ □ □ □ □

Let's check if you guessed correctly. Look diagonally  
to find the correct answer. (DIAGONAL!)


XKMEMMTEUDE TATEYULL  
TSEESTQLASC TETAQERC  
ATLDTTNRQTAATQTLZOT  
MAQQEAEEALDAALUALGU  
L I L O G L L A E S U T L E L A L W A  
ZUAUAPL T L L V E A P T L L L M




# Subscribe to Get Answer Keys





and Weekly Math, Challenge  
Workbooks, Posters, Daily Reading,  
and so much more!



**SUBSCRIBE TO RECEIVE EVEN MORE**  
Answer Keys • Effective Activities • Access  
to as many printables as you need!



edHelper.com




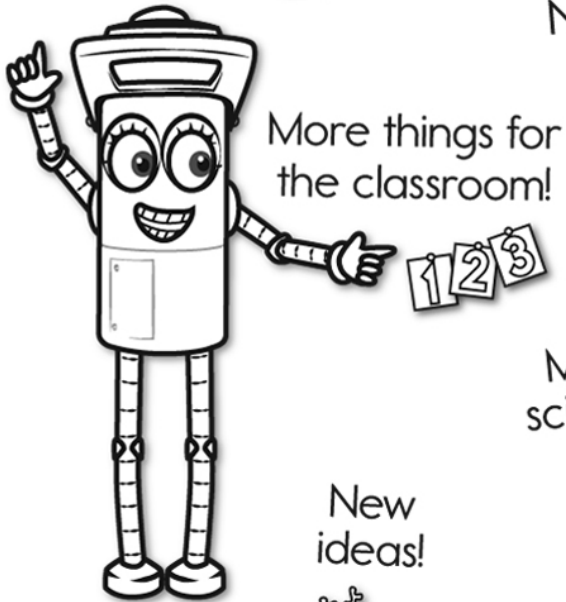

It's NO PREP at edHelper.

More history!

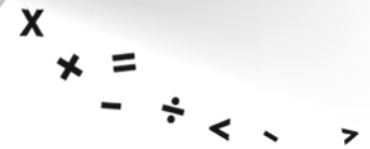


# edHelper.com!


New online math games!



New ideas!



More puzzles!



# Take The Boring Out Of Homework!

Easy to  
print!

edHelper

## Weekly K-6 "Take It Home" Books

Kids want choices  
for homework.  
"Take It Home" books  
have fun graphics and  
challenging puzzles and  
problems for older kids.

"Dr. Programmer"  
challenges kids..

Homework  
will never be  
the same!

edHelper.com

