








Name: _____

Guess the number in your head. Keep guessing until your numbers are correct.
Then write the correct answer!

 +  +  = 57

 -  = 0

 +  = _____

 = _____  = _____

8 after 16 _____	6 before 12 _____	4 after 14 _____
3 after 17 _____	2 before 19 _____	5 after 12 _____
7 after 15 _____	1 before 11 _____	1 after 19 _____
9 after 13 _____	9 before 13 _____	6 after 18 _____
2 after 11 _____	5 before 14 _____	3 after 19 _____
5 after 77 _____	3 before 48 _____	9 after 27 _____
4 after 53 _____	4 before 99 _____	2 after 69 _____
7 after 88 _____	7 before 76 _____	6 after 75 _____
8 after 63 _____	8 before 44 _____	1 after 51 _____

Name: _____

Make a path by adding up the numbers. Do not visit a circle more than once. The first one is done.

START 1	5	3	8
6	5	4	9
7	5	5	FINISH SUM: 24

$1 + \underline{6} + \underline{7} + \underline{5} + \underline{5} = 24$

START 7	2	8	2
1	1	9	6
2	7	5	FINISH SUM: 25

$7 + \underline{2} + \underline{\quad} + \underline{\quad} + \underline{\quad} = 25$

START 6	7	8	7
9	9	6	7
7	8	8	FINISH SUM: 38

$6 + \underline{7} + \underline{\quad} + \underline{\quad} + \underline{\quad} = 38$

START 7	1	4	3
6	8	3	1
5	3	2	FINISH SUM: 25

Did you find a path? Write the equation.

Name: _____

Peter has 3 bags of Canadian flags. Each bag has 6 flags. Jessica takes 5 flags from Peter. How many flags does Peter have left?

Four students talked about eye safety today. They told the other students how to protect their eyes. The talks took 40 minutes. About how long did each student talk?

Holly is 1 year older than David. Sara is 5 years younger than David. Sara is 9 years younger than Alex. Sara is 15 years old.

How old is everyone else?

What one-digit number is missing in this equation?

$$13 \times \underline{\quad} + 19 = 110$$



Name: _____

Get a fidget spinner! Spin it.

I needed to spin _____ time(s) to finish.

Not Exact

Estimate - With a Good Guess

$$29 \div 6 \approx \underline{5}$$
$$> \underline{4} \quad < \underline{5}$$

$$64 \div 9 \approx \underline{7}$$
$$> \underline{7} \quad < \underline{8}$$

$$55 \div 9 \approx \underline{\quad}$$
$$> \underline{\quad} \quad < \underline{\quad}$$

$$66 \div 7 \approx \underline{\quad}$$
$$> \underline{\quad} \quad < \underline{\quad}$$

$$21 \div 4 \approx \underline{\quad}$$
$$> \underline{\quad} \quad < \underline{\quad}$$

$$60 \div 7 \approx \underline{\quad}$$
$$> \underline{\quad} \quad < \underline{\quad}$$

$$18 \div 5 \approx \underline{\quad}$$
$$> \underline{\quad} \quad < \underline{\quad}$$

$$73 \div 8 \approx \underline{\quad}$$
$$> \underline{\quad} \quad < \underline{\quad}$$

$$69 \div 10 \approx \underline{\quad}$$
$$> \underline{\quad} \quad < \underline{\quad}$$

$$31 \div 6 \approx \underline{\quad}$$
$$> \underline{\quad} \quad < \underline{\quad}$$

$$23 \div 3 \approx \underline{\quad}$$
$$> \underline{\quad} \quad < \underline{\quad}$$

$$43 \div 10 \approx \underline{\quad}$$
$$> \underline{\quad} \quad < \underline{\quad}$$

$$14 \div 4 \approx \underline{\quad}$$
$$> \underline{\quad} \quad < \underline{\quad}$$

$$90 \div 11 \approx \underline{\quad}$$
$$> \underline{\quad} \quad < \underline{\quad}$$

$$17 \div 5 \approx \underline{\quad}$$
$$> \underline{\quad} \quad < \underline{\quad}$$

$$19 \div 3 \approx \underline{\quad}$$
$$> \underline{\quad} \quad < \underline{\quad}$$

$$43 \div 8 \approx \underline{\quad}$$
$$> \underline{\quad} \quad < \underline{\quad}$$

$$103 \div 11 \approx \underline{\quad}$$
$$> \underline{\quad} \quad < \underline{\quad}$$

$$85 \div 12 \approx \underline{\quad}$$
$$> \underline{\quad} \quad < \underline{\quad}$$

$$51 \div 11 \approx \underline{\quad}$$
$$> \underline{\quad} \quad < \underline{\quad}$$

$$53 \div 6 \approx \underline{\quad}$$
$$> \underline{\quad} \quad < \underline{\quad}$$

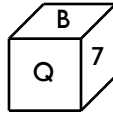
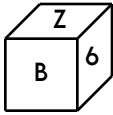
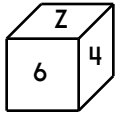
$$52 \div 9 \approx \underline{\quad}$$
$$> \underline{\quad} \quad < \underline{\quad}$$

$$20 \div 3 \approx \underline{\quad}$$
$$> \underline{\quad} \quad < \underline{\quad}$$

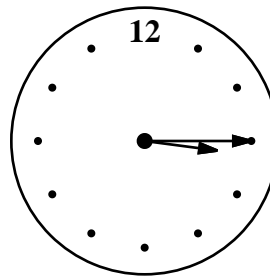
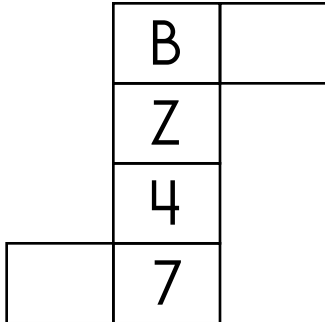
$$14 \div 3 \approx \underline{\quad}$$
$$> \underline{\quad} \quad < \underline{\quad}$$

Name: _____

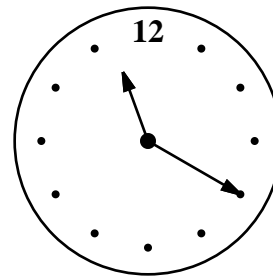
This is the look at one cube that is turned around a few times.



This pattern can be folded into the cube. Fill in the missing boxes.



current time (pm)



time party starts (pm)

How long until the party? _____

Add the correct end punctuation for this sentence.

I found Billy the Kid's secret hideout

How do you know if a number is divisible by 3? Use this trick.

$$96,441,888 \quad \underline{9} + \underline{6} + \underline{4} + \underline{4} + \underline{1} + \underline{8} + \underline{8} + \underline{8} = \boxed{\quad} \boxed{\quad}$$

$\boxed{\quad} + \boxed{\quad} = \underline{\quad}$ Is that a multiple of 3? Circle if it is: 3 6 9 12 15

Circle one: 96,441,888 is divisible by three 96,441,888 is not divisible by three

$$8,349,810 \quad \underline{\quad} + \underline{\quad} + \underline{\quad} + \underline{\quad} + \underline{\quad} + \underline{\quad} + \underline{\quad} = \boxed{\quad} \boxed{\quad}$$

$\boxed{\quad} + \boxed{\quad} = \underline{\quad}$ Is that a multiple of 3? Circle if it is: 3 6 9 12 15

Circle one: 8,349,810 is divisible by three 8,349,810 is not divisible by three



Write 678 in expanded notation.

Write the number with 2 thousands and 6 hundreds.

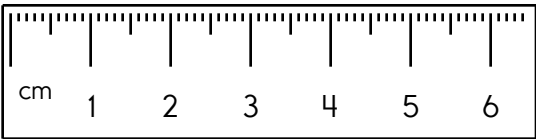
$$\begin{array}{r} 73 \\ 10 \\ + 12 \\ \hline \end{array}$$

Circle the correctly spelled words.
faim, fear, kept

Name: _____

<p>Write a fraction to represent what is shaded.</p>  <p>_____</p>	<p>Color $\frac{1}{10}$.</p> 	$8 \overline{)72}$
---	--	--------------------

<p>Circle the complete subject in the following sentence.</p> <p>The tiller jerked this way and that way.</p>	
---	--

<p>What is the mode of these numbers?</p> <p>22, 16, 22, 18, 29, 17, 16, 16, 29</p> <p>_____</p>	<p>Write the length in centimeters.</p> <p>_____</p> 	$\begin{array}{r} 73 \\ - 55 \\ \hline \end{array}$
--	---	---

<p>Write a word problem for $5 \times 4 = 20$.</p>	<p>Round the number to the place value of the BIG number.</p> <p>798,684,686</p> <p>_____</p>
---	--

<p>Name the polygon that has ten vertices.</p> <p>_____</p>	<p>What number is ten thousand more than 3,665?</p> <p>_____</p>	$\begin{array}{r} 14 \\ + 85 \\ \hline \end{array}$
---	--	---

<p>Fill in the missing fraction.</p> <p>$\frac{1}{5}$, $\frac{2}{5}$, _____ , $\frac{4}{5}$</p>	<p>Write an odd number with a five in the hundreds place.</p> <p>_____</p>
--	--

Name: _____

Fill in the boxes so each line equals 16.

16

$$\boxed{80} \div \boxed{}$$

$$\boxed{8} \times \boxed{}$$

$$\boxed{} - \boxed{3}$$

$$(\boxed{} + \boxed{}) + \boxed{10}$$

Which is longer: two feet or twenty-eight inches?

What is the value of the BIG digit?

99,595

Fill in the blanks with these numbers:

2, 2, 7

$$\boxed{} \quad 8$$

$$4 \quad \boxed{}$$

$$+ \boxed{} \quad 4$$

9 9

Fill in the blanks with these numbers:

3, 6, 3

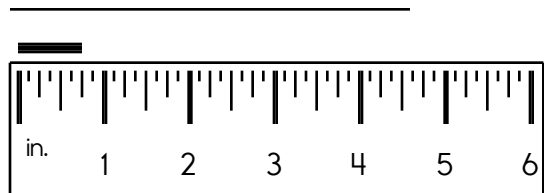
$$1 \quad 6$$

$$\boxed{} \quad 1$$

$$+ \quad 1 \quad \boxed{}$$

6 $\boxed{}$

Write the length in inches.



Write two odd numbers that when added together equal the even number 16.


Is 47 larger than 74?

Circle the largest number.


998 940 777
789 895 978

$$\begin{array}{r} 29 \\ + 19 \\ \hline \end{array}$$

List the first five multiples of 11.



current time



20 minutes later

Name: _____

$$\begin{array}{r} 81,520 \\ + 29,953 \\ \hline \end{array}$$

$$\begin{array}{r} 74,711 \\ - 35,276 \\ \hline \end{array}$$

$$\begin{array}{r} 109,414 \\ - 35,213 \\ \hline \end{array}$$

$$\begin{array}{r} 96,358 \\ + 14,855 \\ \hline \end{array}$$

$$\begin{array}{r} 89,097 \\ - 43,631 \\ \hline \end{array}$$

$$\begin{array}{r} 73,135 \\ + 16,995 \\ \hline \end{array}$$

$$\begin{array}{r} 146,152 \\ - 57,699 \\ \hline \end{array}$$

$$\begin{array}{r} 76,203 \\ + 74,399 \\ \hline \end{array}$$

$$\begin{array}{r} 56,233 \\ + 13,672 \\ \hline \end{array}$$

$$\begin{array}{r} 42,491 \\ - 27,811 \\ \hline \end{array}$$

$$\begin{array}{r} 69,913 \\ + 20,302 \\ \hline \end{array}$$

$$\begin{array}{r} 145,034 \\ - 87,928 \\ \hline \end{array}$$

$$\begin{array}{r} 61,621 \\ - 31,871 \\ \hline \end{array}$$

$$\begin{array}{r} 82,023 \\ + 99,835 \\ \hline \end{array}$$

$$\begin{array}{r} 75,593 \\ - 47,477 \\ \hline \end{array}$$

$$\begin{array}{r} 23,925 \\ + 78,755 \\ \hline \end{array}$$

$$\begin{array}{r} 44,021 \\ + 47,661 \\ \hline \end{array}$$

$$\begin{array}{r} 98,521 \\ - 22,134 \\ \hline \end{array}$$

$$\begin{array}{r} 88,405 \\ - 43,766 \\ \hline \end{array}$$

$$\begin{array}{r} 43,137 \\ + 21,445 \\ \hline \end{array}$$

$$\begin{array}{r} 60,314 \\ + 31,338 \\ \hline \end{array}$$

$$\begin{array}{r} 3 \\ + 5 \\ \hline \square \end{array}$$

$$\begin{array}{r} + 9 \\ \hline \square \\ + 3 \\ \hline \square \end{array}$$

$$\begin{array}{r} + 9 \\ \hline \square \\ + 9 \\ \hline \square \end{array}$$

$$\begin{array}{r} 29 \\ + \square \\ \hline \square \end{array}$$

$$\begin{array}{r} 34 \\ - 6 \\ \hline \square \end{array}$$

$$\begin{array}{r} - 2 \\ \hline \square \\ + 4 \\ \hline \square \end{array}$$

$$\begin{array}{r} + 6 \\ \hline \square \\ 36 \\ - \square \\ \hline \square \end{array}$$


$$\begin{array}{r} 30 \\ + \square \\ \hline \square \end{array}$$

$$32$$

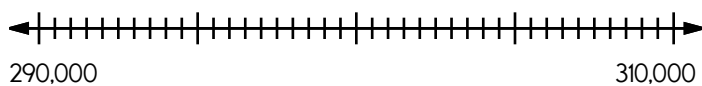
Name: _____

5 • 2 • + • 1 • 4 • + • 1 • + • 6 • + • 2 • 4 • = • 6 • 8 • 1 • 0
1 • 3 • +

Use the pieces above to help you fill in the runaway math puzzle.



Locate where to put the number 301,000 and label the point D.



What polygon has four sides?

Write the fraction for 0.95.

$21 + 5 = \underline{\hspace{2cm}}$

$71 - 1 = \underline{\hspace{2cm}}$

Make a pattern.
Start with 81.
Add 8.

_____, _____, _____, _____, _____, _____

Circle the correctly spelled words.
function, stilness, information

Name: _____

$72 - 64 = \underline{\quad}$

$35 - 29 = \underline{\quad}$

$462 + 315 = \underline{\quad}$

7,313	7,252
- 2,814	- 1,929

$8 \times 8 = \underline{\quad}$

$9 \div 3 = \underline{\quad}$

95	73
- 73	+
	95

Count by ones. Fill in the missing numbers.

_____	11	_____
_____	288	_____
_____	107	<u>108</u>

$5,920 - 1,166 = \underline{\quad}$

$407 + 617 = \underline{\quad}$

Fill in the missing numbers to complete the subtraction square. The numbers in blue are the starting number for each equation. Subtract from the blue number the numbers in the box. It may be for a row, a column, or a diagonal. The difference is in green.

For example in the first row you'd start with 16 and then subtract from that: $16 - 3 - 4 - 5 = 4$

Hint - Use these numbers: 1, 3, 4, 5, 6, 7, 8, and 9

24	41	25	44	15
16				4
23	2			6
27				11
27	35	7	23	8

Hint - Use these numbers: 1, 2, 3, 4, 6, 7, and 8

16	30	29	21	37
27	5			15
66			9	47
16				2
43	16	16	3	3

Name: _____

$41 - 16 = \underline{\quad}$

Circle each equal to 12.

$7 + 5$

$8 + 4$

3×4

2×9

$6 + 6$

$4 + 8$

$$\begin{array}{r} 2,708 \\ + 5,241 \\ \hline \end{array}$$

$$\begin{array}{r} 3,051 \\ + 9,856 \\ \hline \end{array}$$

$542 - 438 = \underline{\quad}$

$87 + 9 = \underline{\quad}$

$1,794 + 9,266 = \underline{\quad}$

Count by tens.

30 _____

$27 - 8 = \underline{\quad}$


$8 + \underline{\quad} = 27$

$$\begin{array}{r} 47,854 \\ + 31,029 \\ \hline \end{array}$$

$$\begin{array}{r} 38,685 \\ + 62,385 \\ \hline \end{array}$$

Thing One and Thing Two poured cereal all over the floor. Little Cat A picked up 27 pieces of cereal, Little Cat B picked up 29 pieces, and Little Cat C picked up 26 pieces. How many pieces of cereal did Little Cats A, B, and C pick up in all?

10:30



Round to the nearest thousand.

92,813 is rounded to _____

5,358 is rounded to _____

6,368 is rounded to _____

$4 + \square = 14$

$10 + \square = 17$

$12 + \square = 15$

$12 + \square = 19$

$5 + \square = 11$

$5 + \square = 9$

$7 + \square = 16$

$12 + \square = 19$

Name: _____

$$7 \overline{) 77} \quad \xrightarrow{\text{Check.}} \quad \begin{array}{r} 7 \\ x \quad 11 \\ \hline 77 \end{array}$$

$$11 \overline{) 66} \quad \xrightarrow{\text{Check.}} \quad x \underline{\hspace{2cm}}$$

$$6 \overline{) 60} \quad \xrightarrow{\text{Check.}} \quad x \underline{\hspace{2cm}}$$

$$3 \overline{) 15} \quad \xrightarrow{\text{Check.}} \quad x \underline{\hspace{2cm}}$$

$$4 \overline{) 16} \quad \xrightarrow{\text{Check.}} \quad x \underline{\hspace{2cm}}$$

$$9 \overline{) 54} \quad \xrightarrow{\text{Check.}} \quad x \underline{\hspace{2cm}}$$

$$2 \overline{) 12} \quad \xrightarrow{\text{Check.}} \quad x \underline{\hspace{2cm}}$$

$$5 \overline{) 15} \quad \xrightarrow{\text{Check.}} \quad x \underline{\hspace{2cm}}$$

$$8 \overline{) 40} \quad \xrightarrow{\text{Check.}} \quad x \underline{\hspace{2cm}}$$

$$12 \overline{) 36} \quad \xrightarrow{\text{Check.}} \quad x \underline{\hspace{2cm}}$$

$$10 \overline{) 90} \quad \xrightarrow{\text{Check.}} \quad x \underline{\hspace{2cm}}$$

$$11 \overline{) 77} \quad \xrightarrow{\text{Check.}} \quad x \underline{\hspace{2cm}}$$

$$5 \overline{) 55} \quad \xrightarrow{\text{Check.}} \quad x \underline{\hspace{2cm}}$$

$$12 \overline{) 24} \quad \xrightarrow{\text{Check.}} \quad x \underline{\hspace{2cm}}$$


$$9 \overline{) 36} \quad \xrightarrow{\text{Check.}} \quad x \underline{\hspace{2cm}}$$

$$3 \overline{) 12} \quad \xrightarrow{\text{Check.}} \quad x \underline{\hspace{2cm}}$$


$$7 \overline{) 63} \quad \xrightarrow{\text{Check.}} \quad x \underline{\hspace{2cm}}$$

$$8 \overline{) 48} \quad \xrightarrow{\text{Check.}} \quad x \underline{\hspace{2cm}}$$


Name: _____



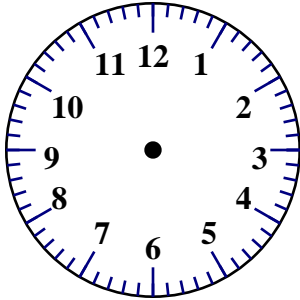
7:50



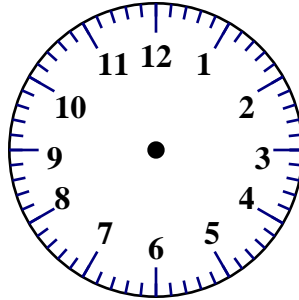
:



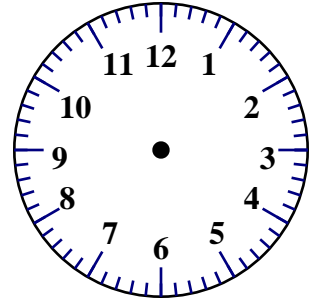
:



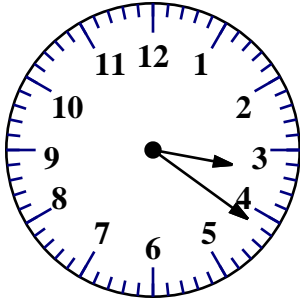
Draw 6:50.




Draw 2:30.



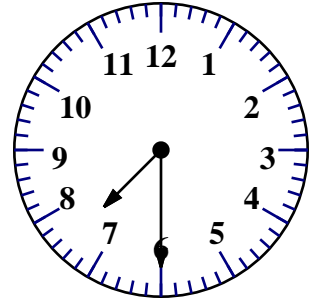
Draw 1:40.



:



:



:

Name: _____

$10 + 11 = 21$

$2 + 11 =$

$2 + 9 =$

$9 + 12 =$

$6 + 7 =$

$8 + 6 =$

$8 + 2 =$


$8 + 9 =$

$12 + 8 =$

$2 + 10 =$

$12 + 2 =$

6	15	15	6	12	15	4	12	2	10	9	9	6	2	19	2
11	2	12	22	8	8	9	19	8	12	10	2	23	8	14	13
17	10	2	9	20	11	11	2	14	4	16	10	20	11	2	10
12	12	14	14	9	1	2	1	14	2	11	11	20	21	11	10
20	6	11	6	2	2	13	13	8	11	9	8	6	10	11	6
2	7	7	13	20	14	29	21	20	2	9	20	20	6	8	26
12	13	16	20	16	7	6	25	10	16	12	12	8	22	16	11
8	10	11	16	21	4	15	12	11	21	21	9	12	21	13	13
10	10 + 11 = 21	14	14	12	2	11	13	15	14	12	18	17	13		
8	17	1	13	9	9	9	16	2	9	1	12	48	29	12	13
10	14	2	7	18	10	29	11	4	11	5	16	15	22	23	9
20	6	48	10	19	18	8	8	8	9	1	27	9	1	15	2
13	8	23	11	10	7	6	21	9	8	19	6	15	7	8	11
2	11	12	9	28	16	11	14	17	10	2	9	1	7	20	11



Write operation.
Write = sign.
Circle.

$11 + 6 = 17$

$12 + 9 =$

$8 + 10 =$

$8 + 7 =$

$2 + 2 =$

$3 + 6 =$

$6 + 4 =$

$10 + 9 =$

$12 + 12 =$

$11 + 7 =$

$7 + 3 =$

4	4	5	15	6	28	1	10	16	11	10	7	11	6	17	22
4	2	9	16	19	14	12	3	80	20	20	10	10	10	23	19
15	15	12	19	7	10	9	17	3	21	1	3	4	11	7	77
3	2	16	18	14	19	24	9	3	7	5	7	6	18	12	6
2	21	7	9	9	5	9	7	14	14	21	3	11	2	12	4
6	2	4	10	14	4	17	14	9	15	15	1	9	5	24	16
6	16	11	80	12	3	15	12	7	1	15	7	12	17	12	4
1	7	77	8	14	16	18	29	9	7	18	8	9	10	8	19
23	17	12	18	6	11	10	18	8	21	7	77	15	8	14	2
22	11 + 6 = 17	7	3	13	9	6	6	11	6	12	10	13	5		
3	6	18	19	13	66	10	6	6	24	10	3	12	18	28	3
10	5	2	8	24	10	4	3	19	13	12	17	16	2	2	4
16	10	18	6	21	17	1	66	6	8	24	7	11	2	18	4

Name: _____

I am the largest whole number that will round to 57,000 when you round to the nearest thousand.

Use any of these digits. Cross off a digit after you use it. You do not need to use all of the numbers.

7

6

7

Make a subtraction equation. The difference between your numbers should be 1.

$$\underline{\quad} - \underline{\quad} = 1$$

double 700

$$4 \times \underline{\quad} = 32$$

9 thousands, 3 hundreds, 7
tens, 4 ones

Name: _____

"How many buildings are yours?" asked April as they were playing the Build as Fast as You Can game, which is the best new game on their HBox.

"Not telling!" replied Jenna.

April would have to use the clue on the screen. If she can guess correctly, she will get 50 more points. The clue said, "If you double the number of buildings that April has, April will have 5 less than the number of buildings that Jenna has. Start building fast!"

April has 9 buildings. How many buildings does Jenna have?

How many tens are in the number 8,000?

What is the sum of 10 and 613?

Is 11 a composite or a prime number?

This number is one ten more than 7,898.

Round 168 to the nearest ten.

Is 789 closer to 700 or 800?

Choose the word that best completes the sentence.
(They're/There) will be three new students in our math class today.

Cross out all of the prepositional phrases in the sentence.
I love playing on your jungle gym!

Name: _____

Emma is playing Half Court Quick Hoops at the local arcade. She may be playing way too much! She averages 12 baskets in just 10 seconds. If she can keep up at that rate, how many baskets will she get in during the first round, which is 90 seconds?

$9 + (11 + 6)$

Megan bought six candy bars. It cost \$3.54. How much did each candy bar cost?

Which number is a 3-digit odd number?

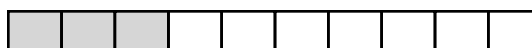
Find the product of 9 and 3.

How much greater is 186 than 40?

62, 67, _____, 77, 82,
87, 92, 97, 102

Add the correct end punctuation for this sentence.
I wonder if we will have pizza for lunch today


Write the unshaded part as a decimal.




Name: _____

+		7		8		8
6	8 $6 + \underline{\quad}$	$6 + 7$	$6 + \underline{\quad}$	14 $6 + 8$	$6 + \underline{\quad}$	$6 + 8$
6	$6 + \underline{\quad}$	13 $6 + 7$	$6 + \underline{\quad}$	$6 + 8$	9 $6 + \underline{\quad}$	14 $6 + 8$
5	7 $5 + \underline{\quad}$	$5 + 7$	$5 + \underline{\quad}$	$5 + 8$	$5 + \underline{\quad}$	13 $5 + 8$
	$\underline{\quad} + \underline{\quad}$	$\underline{\quad} + 7$	$\underline{\quad} + \underline{\quad}$	$\underline{\quad} + 8$	$\underline{\quad} + \underline{\quad}$	$\underline{\quad} + 8$
	$\underline{\quad} + \underline{\quad}$	11 $\underline{\quad} + 7$	6 $\underline{\quad} + \underline{\quad}$	$\underline{\quad} + 8$	$\underline{\quad} + \underline{\quad}$	$\underline{\quad} + 8$

What fraction of the box is shaded?



$\frac{\square}{2}$



current time 10 minutes later

color

kuhlurr

colr

color

Write a word to describe September.

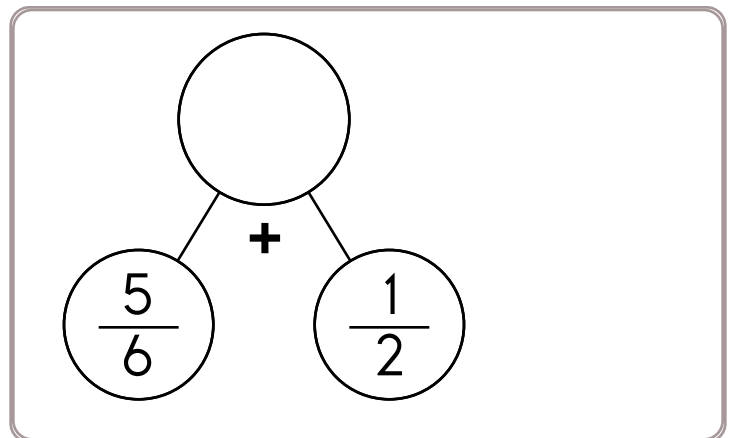
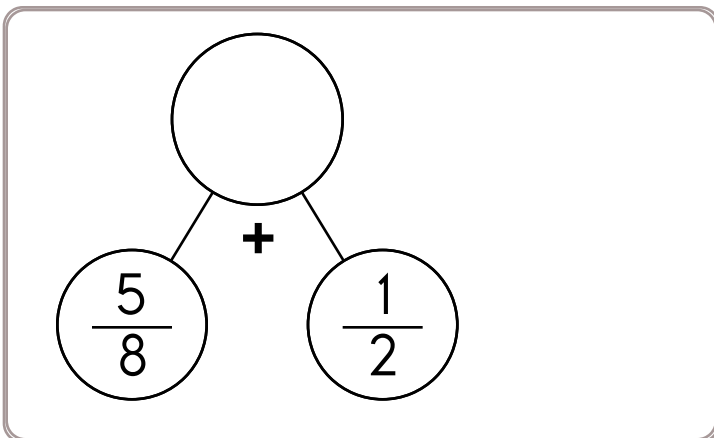
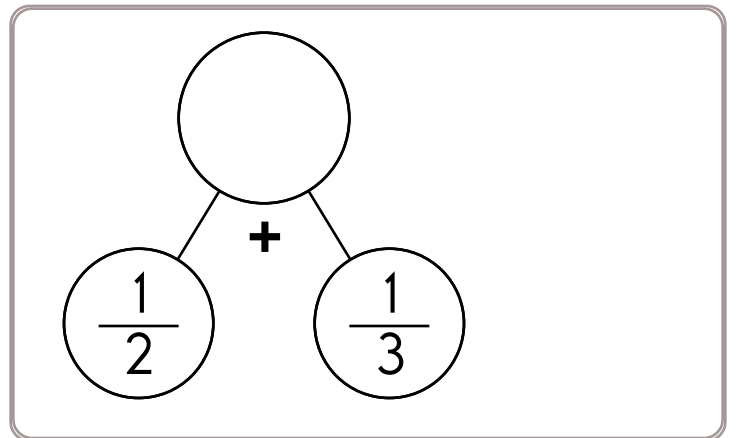
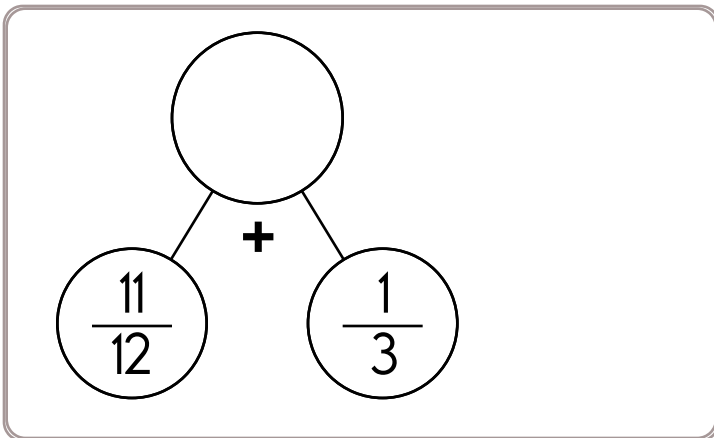
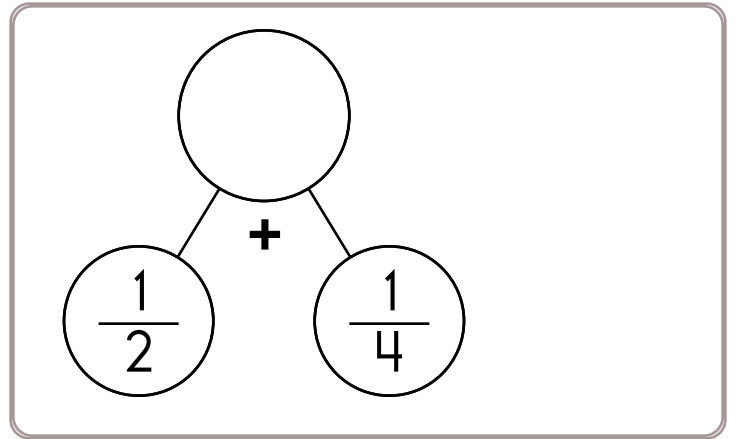
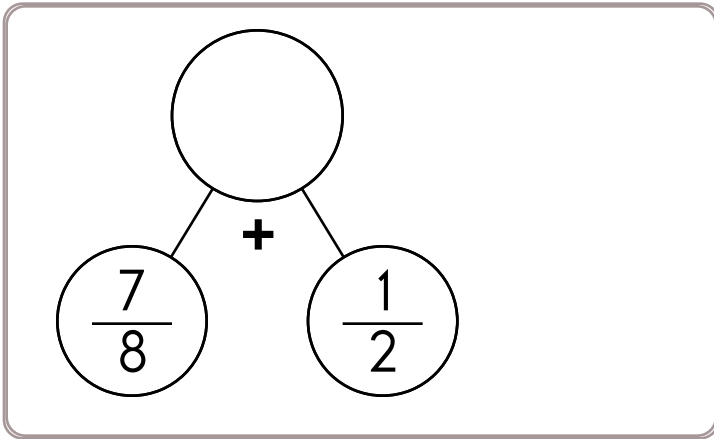
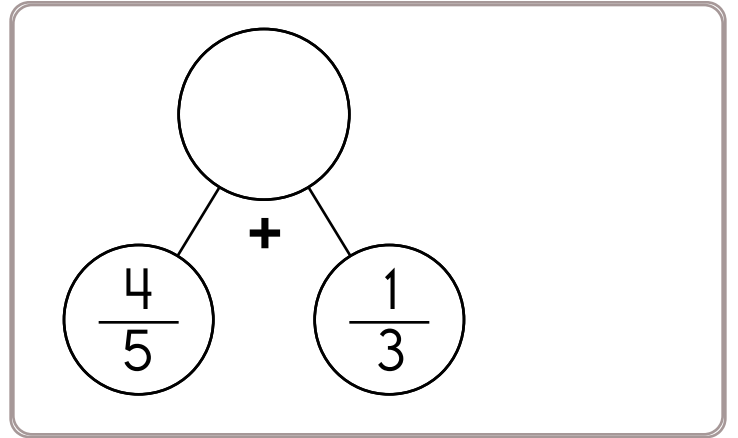
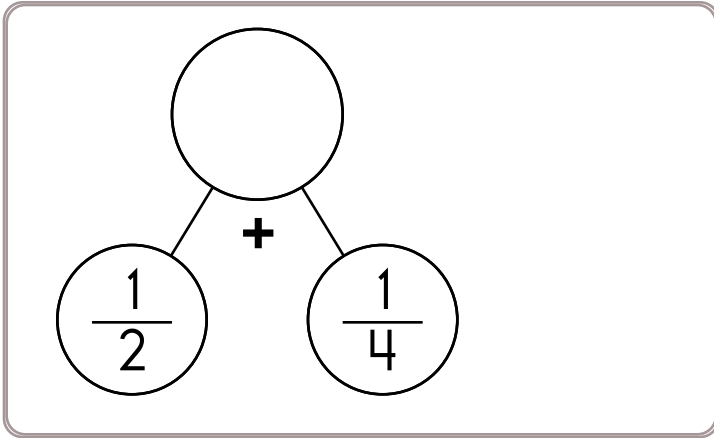
$$\begin{array}{r} 14 \\ + 64 \\ \hline \end{array}$$

$$\begin{array}{r} 33 \\ + 52 \\ \hline \end{array}$$

$$\begin{array}{r} 36 \\ + 11 \\ \hline \end{array}$$

7 - 3 = 	6 - 4 = 	2 + 4 = 	9 + 1 =
--	--	--	--

Name: _____



Name: _____

$$94 - 57 = \underline{\quad}$$

Continue the pattern.

$$23 \quad 28 \quad 33 \quad 38 \quad \underline{\quad} \quad \underline{\quad}$$

19	□
+ 6	□
□	-
	6
	19

$$18 - 8 = \underline{\quad}$$

8	12	13
- 4	- 8	- 9

8 $\overline{)24}$	4 $\overline{)20}$	6 $\overline{)48}$
--------------------	--------------------	--------------------

78,053	89,555
- 62,737	- 12,932
□	□

Can you win at bingo? Color in a circle red if it is on the bingo board. Then color in the square on the bingo board red. Cross off a circle if you do not see it on the bingo board. Keep going until you win! Win by getting four across, down, or diagonal.

51 + 975	83 + 195	<p>BINGO BOARD</p> <table border="1" style="border-collapse: collapse; text-align: center;"> <tr> <td style="background-color: red;">970</td> <td>987</td> <td>935</td> <td>492</td> </tr> <tr> <td>1026</td> <td>642</td> <td>651</td> <td>1019</td> </tr> <tr> <td>1051</td> <td>869</td> <td>417</td> <td>961</td> </tr> <tr> <td>574</td> <td>807</td> <td>828</td> <td>501</td> </tr> </table>	970	987	935	492	1026	642	651	1019	1051	869	417	961	574	807	828	501
970	987		935	492														
1026	642		651	1019														
1051	869		417	961														
574	807	828	501															
94 + 307	44 + 975																	
85 + 750	31 + 543																	
41 + 929	79 + 936																	
58 + 993	15 + 972	56 + 353																
29 + 831	55 + 120	96 + 361																
		50 + 819																
		89 + 284																
		62 + 580																

$$12 + \square = 14$$

$$5 + \square = 8$$

$$9 + \square = 24$$

$$5 + \square = 7$$

Name: _____

$$57 - 48 = \underline{\quad}$$

$\begin{array}{r} 438 \\ - 353 \\ \hline \square \end{array}$	$\begin{array}{r} 882 \\ - 316 \\ \hline \square \end{array}$	$\begin{array}{r} 815 \\ - 514 \\ \hline \square \end{array}$
---	---	---

$$6 + 12 = \underline{\quad}$$

$$\underline{\quad} - 12 = 6$$

$$2 + 9 + 2 = \underline{\quad}$$

$$673 - 323 = \underline{\quad}$$

$\begin{array}{r} 5 \\ + 7 \\ \hline \end{array}$	$\begin{array}{r} 16 \\ + 4 \\ \hline \end{array}$	$\begin{array}{r} 3 \\ + 6 \\ \hline \end{array}$
---	--	---

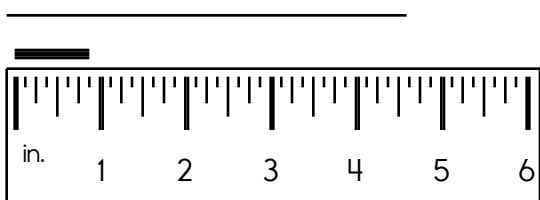
$\begin{array}{r} 837 \\ + 620 \\ \hline \square \end{array}$	$\begin{array}{r} 354 \\ + 925 \\ \hline \square \end{array}$	$\begin{array}{r} 124 \\ + 396 \\ \hline \square \end{array}$
---	---	---

$\begin{array}{r} 96 \\ - 16 \\ \hline \square \end{array}$	$\begin{array}{r} 16 \\ + \square \\ \hline 96 \end{array}$
---	---

$$481 + 147 = \underline{\quad}$$

If $\square = 12$, then $\square + 2 = \underline{\quad}$

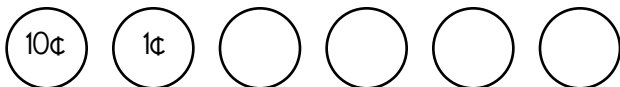
Write the length in inches.



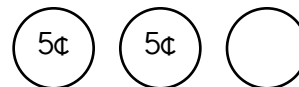
Which is larger, $\frac{4}{5}$ or $\frac{1}{5}$?

Holly's sister is always grouchy in the morning. She said that no one should talk to her until she has been out of bed for at least $2\frac{3}{4}$ hours. She got up at 6:41 a.m. this morning. What is the earliest time anyone should talk to her?

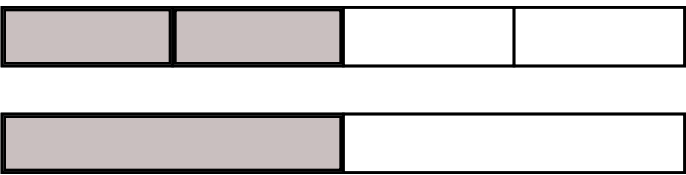
Draw coins needed to make a total of 46¢.

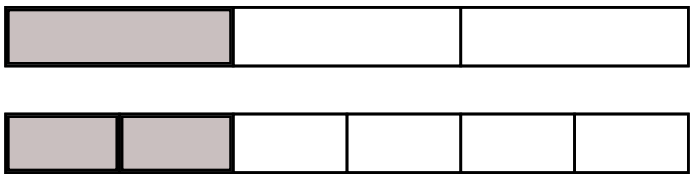



Draw coins needed to make a total of 15¢.




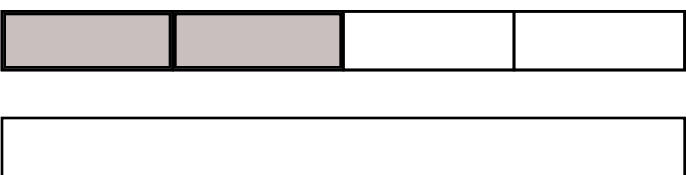
Name: _____



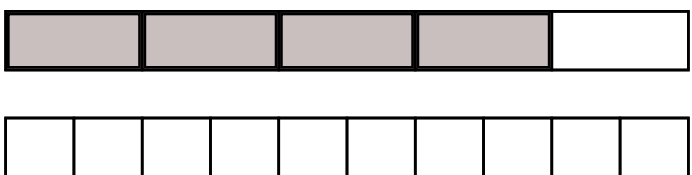
$$\frac{2}{4} = \frac{\boxed{}}{2}$$


$$\frac{1}{3} = \frac{2}{\boxed{}}$$



$$\frac{6}{10} = \frac{\boxed{}}{\boxed{}}$$



$$\frac{\boxed{}}{\boxed{}} = \frac{\boxed{}}{\boxed{}}$$


Color and draw lines to complete the fraction bars.

$$\frac{2}{\boxed{}} = \frac{1}{2}$$


Color to complete the fraction bars.

$$\frac{4}{\boxed{}} = \frac{8}{10}$$


$$\frac{1}{4} = \frac{2}{\boxed{}}$$


Color and draw lines to complete the fraction bars.

$$\frac{8}{12} = \frac{2}{3}$$

Name: _____

Ready to make equations? There is a missing equation in each box.
Circle the numbers once you find it!

A

92	23	79
45	5	72
94	70	50

Find an addition fact.

B

65	93	13
67	88	34
91	35	28

Find an addition fact.

C

82	54	12
55	7	16
62	76	17

Find a subtraction fact.

Equations:

Write the equation facts you found.


A	5	+	45	=	50
B		+		=	
C		-		=	

The mailman spent 5.3 hours delivering mail today. Write that number in expanded form.

Write the number for four thousand, eighty-nine.

Name: _____

Draw 3 pictures in the correct order. Use each of the clues so you will know what to draw.



! Draw 1 of these 3 pictures.
! The picture is NOT in the correct spot.



! Draw 1 of these 3 pictures.
! The picture is NOT in the correct spot.


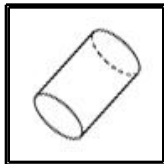



! Draw 1 of these 3 pictures.
! The picture IS in the correct spot.



! Draw 1 of these 3 pictures.
! The picture IS in the correct spot.

Draw the 3 pictures in the correct order:



Use $>$, $<$, or $=$ to complete.

$$6.16 \underline{\hspace{1cm}} 6.99$$

$$8.9 \underline{\hspace{1cm}} 9.1$$

$$6.4 \underline{\hspace{1cm}} 5.8$$

$$8.7 \underline{\hspace{1cm}} 8.6$$

$$3.2 \underline{\hspace{1cm}} 3.5$$

$$0.8 \underline{\hspace{1cm}} 0.79$$

$$1.44 \underline{\hspace{1cm}} 1.03$$

Write the decimal in words.

0.2

Use $>$, $<$, or $=$ to complete.

$$9.5 \underline{\hspace{1cm}} 8.8$$

$$4.2 \underline{\hspace{1cm}} 4.3$$

$$0.9 \underline{\hspace{1cm}} 0.83$$

$$7.5 \underline{\hspace{1cm}} 6.9$$

$$5.1 \underline{\hspace{1cm}} 5.6$$

$$2.46 \underline{\hspace{1cm}} 2.01$$

$$5.8 \underline{\hspace{1cm}} 5.5$$

A book has 6 pages. Each page has 11 dimes. How many dimes in the book?

$$469 + 6 =$$

$$5 + 5 \times 12$$

Name: _____

Complete each pattern. Write what the rule is.

3	17	31	45	59	73
2		16	23	30	37
4	19	34		64	79
1		19		37	46

Find the missing numbers. These both have the same rule. What is the rule?

If

$$1, 1 = 1$$

$$2, 2 = 4$$

$$3, 3 = 9$$

$$4, 4 = 16$$

Then

$$5, 5 = ?$$

If

$$6, 6 = 36$$

$$7, 7 = 49$$

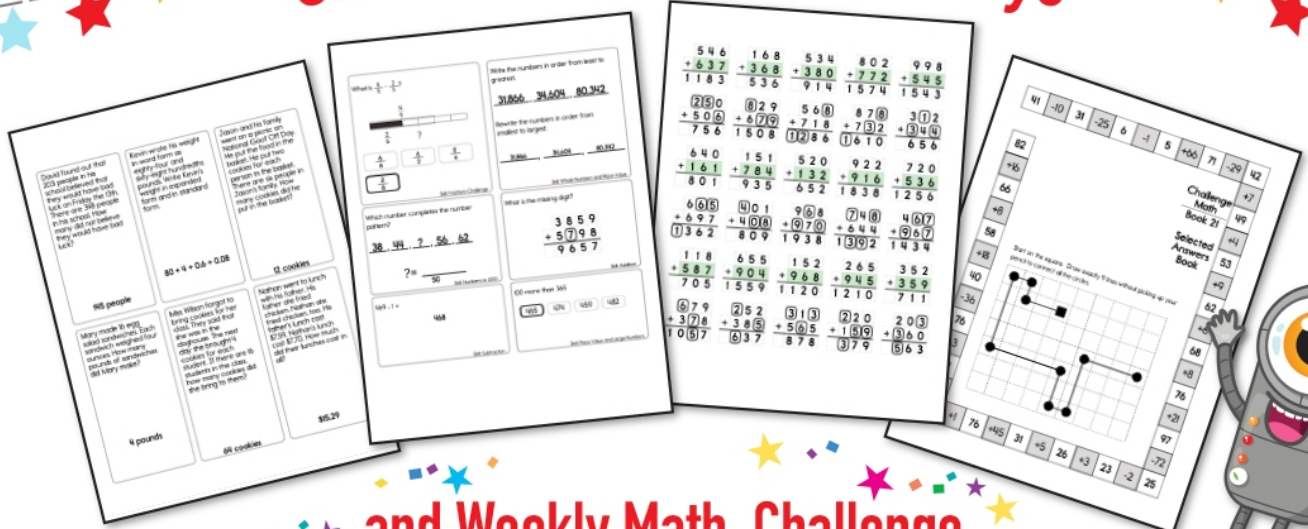
$$8, 8 = 64$$

$$9, 9 = 81$$


Then

$$10, 10 = ?$$


Subscribe to Get Answer Keys





and Weekly Math, Challenge
Workbooks, Posters, Daily Reading,
and so much more!



SUBSCRIBE TO RECEIVE EVEN MORE
Answer Keys • Effective Activities • Access
to as many printables as you need!



edHelper.com



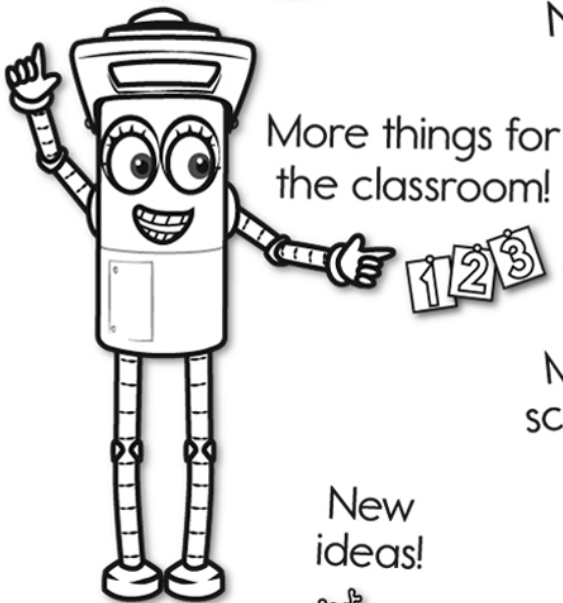
It's NO PREP at edHelper.

More history!

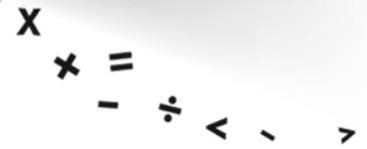


edHelper.com!


New online math games!



More science!



More puzzles!



Take The Boring Out Of Homework!

Easy to
print!

edHelper

Weekly K-6 "Take It Home" Books

Kids want choices
for homework.
"Take It Home" books
have fun graphics and
challenging puzzles and
problems for older kids.

"Dr. Programmer"
challenges kids..

Homework
will never be
the same!

edHelper.com

