


Name: \_\_\_\_\_

<p>Gavin hit the ball 12 times. Robert hit the ball 11 times. How many times did they hit the ball in all?</p>	<p>Amy has twelve cousins. Five of them live in a big city. How many of her cousins do not live in a big city?</p>	<p>Kathleen had 13 pennies. She gave Molly 3 pennies. How many pennies did Kathleen have left?</p>
--	--	--

<p>Write <b>sn</b> or <b>sw</b> to complete each word.</p> <p>_____im      _____ow</p> <p>_____ing      _____ap</p>		<p>Nathan blew some soap bubbles. Robert blew 48 soap bubbles. They blew 71 soap bubbles in all. How many bubbles did Nathan blow?</p>
<p><math>60 + 12 = \underline{\hspace{2cm}}</math></p>		
$\begin{array}{r} 72 \\ 38 \\ + 81 \\ \hline \end{array}$	 <p><math>6 : 50</math></p>	

$\begin{array}{r} 69 \\ - 53 \\ \hline \end{array}$	<p>Write the missing sign.</p> <p><math>12 \quad \underline{\hspace{1cm}} \quad 11 = 23</math></p>	<p>How many days are there in two full weeks?</p> <p>_____</p>
---	--	--

Name: \_\_\_\_\_

Draw a line from START to END.

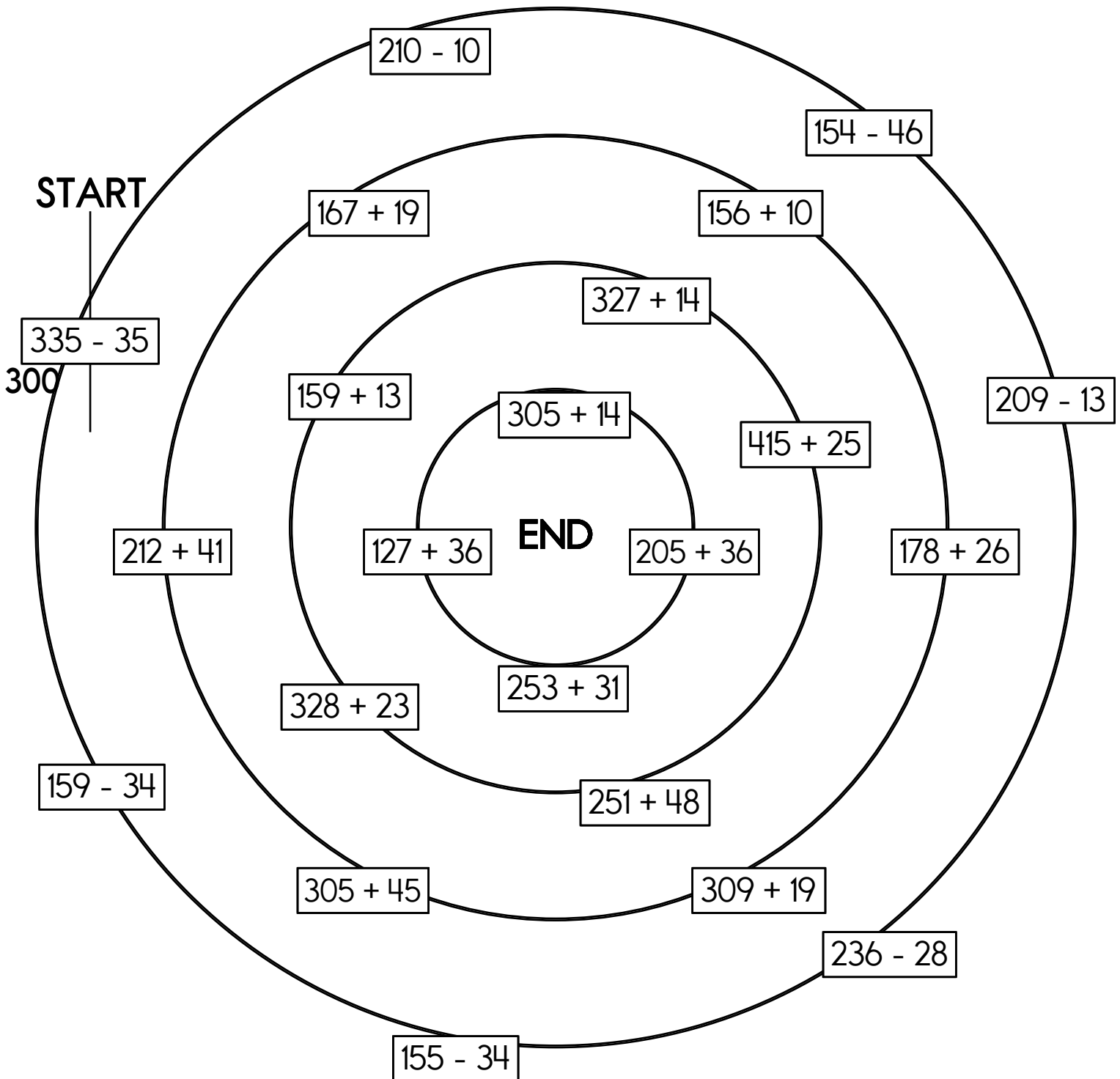
284

~~300~~

253

172

Cross out the number you use above and then write it below.



Name: \_\_\_\_\_

At 3:29 p.m. April went swimming. Later she bought 2 scoops of ice cream for each of her 7 friends. She bought 3 scoops of ice cream for herself. The ice cream cost 50¢ per scoop. How many scoops of ice cream did she buy in all?

Jenna made some cookies. She made a wild guess about the time to bake them. She left them in the oven for 45 minutes. They all burned. The recipe said they should bake for 19 minutes. How many minutes too long were they in the oven?

Sara collects squishies. Before she started getting serious about collecting, she only had 6 of them. But now she has 40 squishies. She ordered 8 really big squishies online. They should be delivered next week on her birthday. And guess what? Next week on her birthday, she invited 4 friends over for a slumber party. In the invitation she said, "No gifts. Just give me 3 squishies."

On the day after her birthday, how many squishies will Sara have?

Wendy is 59 inches tall. Maria is exactly 5 feet tall. Who is taller? By how much?



Name: \_\_\_\_\_

Get a fidget spinner! Spin it.

I needed to spin \_\_\_\_\_ time(s) to finish.

double 200

Make your own  
equation.

$$\underline{\quad} + 3 = \underline{\quad}$$

3 less than 543

Wendy is three years younger than her older sister, Megan. Megan is twelve years old. What is the sum of their ages?

Circle the three numbers whose sum equals 31.

10    9    10

10    12    9

l, w, y, \_\_\_\_\_, w, y, l, w,

y, l, w, y, l

Write an even number.

117, \_\_\_\_\_, 143, 156, 169,

182, 195, 208

Round 74 to the nearest 10.

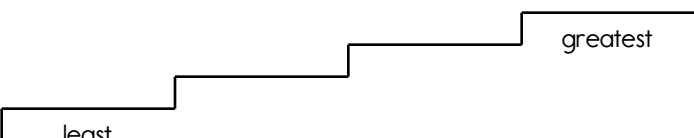
A teacher arranges desks. She puts 5 desks in each row. There are 4 rows. How many desks are there?

$$\begin{array}{r} 77 \\ - 7 \\ \hline \end{array}$$

$7 - 5 + 4$

Name: \_\_\_\_\_

<p>Last year it rained 71 inches in the forest. This year it rained 58 inches. How many inches did it rain in the last two years?</p>	<p>Jessica's sister is a toddler. Jessica baby-sits for 1 hour and 20 minutes each day. If she starts at 2:10 p.m., what time is she finished?</p>	<p>Emily took 1 quarter, 3 dimes, 2 nickels, and 6 pennies to the store to buy erasers. How much money did she take to the store?</p>
---	--	---

<p>779      767      773      792</p> <p>Write the numbers in order from least to greatest.</p> 	<table style="width: 100%; text-align: center;"> <tr> <td><math>\begin{array}{r} 4 \\ 7 \\ + 83 \\ \hline \end{array}</math></td> <td><math>\begin{array}{r} 3 \\ 9 \\ + 54 \\ \hline \end{array}</math></td> </tr> </table>	$\begin{array}{r} 4 \\ 7 \\ + 83 \\ \hline \end{array}$	$\begin{array}{r} 3 \\ 9 \\ + 54 \\ \hline \end{array}$
$\begin{array}{r} 4 \\ 7 \\ + 83 \\ \hline \end{array}$	$\begin{array}{r} 3 \\ 9 \\ + 54 \\ \hline \end{array}$		




$\begin{array}{r} 84 \\ - 71 \\ \hline \end{array}$	<p>Can you think of a five-letter word that has the vowel A in it?</p> <p>_____</p>	$\begin{array}{r} 94 \\ - 77 \\ \hline \end{array}$	<p><input type="radio"/> shiuld</p> <p><input type="radio"/> shuold</p> <p><input type="radio"/> shudd</p> <p><input type="radio"/> should</p>
$4 + \square = 6$			

<p>Circle the best estimate for the answer to:</p> <p style="text-align: center;">108 - 87</p> <p>100      50      20      70</p>	$11 + 4 = \underline{\hspace{2cm}}$
---	-------------------------------------


$4 + 6 = \square$	$16 - 9 = \square$	$6 + 5 = \square$	$5 + 9 = \square$
-------------------	--------------------	-------------------	-------------------

Name: \_\_\_\_\_

<p>What fraction of the box is shaded?</p> <div style="border: 1px solid black; width: 40px; height: 40px; margin: 5px 0;"> <div style="background-color: #cccccc; width: 20px; height: 20px; display: inline-block;"></div> <div style="background-color: #cccccc; width: 20px; height: 20px; display: inline-block;"></div> </div> <div style="border: 1px solid black; width: 40px; height: 40px; margin: 5px 0;"> <div style="width: 20px; height: 20px; display: inline-block;"></div> <div style="width: 20px; height: 20px; display: inline-block;"></div> </div> <div style="text-align: center; margin-top: 10px;"> <div style="border: 1px solid black; width: 20px; height: 20px; display: inline-block;"></div>  <math>\frac{\quad}{2}</math> </div>	<p>Circle the best estimate for the answer to:</p> <p style="text-align: center;"><math>108 + 166</math></p> <p style="text-align: center;">340      240      190      280</p>	<div style="text-align: center;"> <math display="block">\begin{array}{r} 38 \\ + 50 \\ \hline \end{array}</math> </div>
--	--	---

<div style="display: flex; justify-content: space-around;"> <div style="text-align: center;">  <p><b>current time</b></p> </div> <div style="text-align: center;">  <p><b>10 minutes later</b></p> </div> </div>	<div style="text-align: center;">  <p>990</p> </div> <p>Write this number using words.</p>
--	---

<input type="radio"/> stray  <input type="radio"/> strray  <input type="radio"/> spray  <input type="radio"/> sttray	$89 + 8 = \underline{\quad}$	<p>Write a word to describe September.</p> <p style="text-align: center;">_____</p>
$9 + \square = 18$	$6 + \square = 10$	

<div style="border: 1px solid gray; border-radius: 15px; padding: 5px; display: inline-block; margin-right: 20px;">04:54</div> 	<p>Fill in the blanks with these numbers: <b>8, 2, 1</b></p> <table style="width: 100%; text-align: center;"> <tr><td>1</td><td>5</td></tr> <tr><td>2</td><td><input style="width: 40px; height: 20px;" type="text"/></td></tr> <tr><td>+</td><td>3 <input style="width: 40px; height: 20px;" type="text"/></td></tr> <tr><td colspan="2"><hr style="width: 80%; margin: 0 auto;"/></td></tr> <tr><td>6</td><td><input style="width: 40px; height: 20px;" type="text"/></td></tr> </table>	1	5	2	<input style="width: 40px; height: 20px;" type="text"/>	+	3 <input style="width: 40px; height: 20px;" type="text"/>	<hr style="width: 80%; margin: 0 auto;"/>		6	<input style="width: 40px; height: 20px;" type="text"/>	<p>Fill in the blanks with these numbers: <b>8, 1, 5</b></p> <table style="width: 100%; text-align: center;"> <tr><td></td><td>3</td><td>5</td></tr> <tr><td></td><td><input style="width: 40px; height: 20px;" type="text"/></td><td>3</td></tr> <tr><td>+</td><td>1</td><td>0</td></tr> <tr><td colspan="3"><hr style="width: 80%; margin: 0 auto;"/></td></tr> <tr><td></td><td><input style="width: 40px; height: 20px;" type="text"/></td><td><input style="width: 40px; height: 20px;" type="text"/></td></tr> </table>		3	5		<input style="width: 40px; height: 20px;" type="text"/>	3	+	1	0	<hr style="width: 80%; margin: 0 auto;"/>				<input style="width: 40px; height: 20px;" type="text"/>	<input style="width: 40px; height: 20px;" type="text"/>
1	5																										
2	<input style="width: 40px; height: 20px;" type="text"/>																										
+	3 <input style="width: 40px; height: 20px;" type="text"/>																										
<hr style="width: 80%; margin: 0 auto;"/>																											
6	<input style="width: 40px; height: 20px;" type="text"/>																										
	3	5																									
	<input style="width: 40px; height: 20px;" type="text"/>	3																									
+	1	0																									
<hr style="width: 80%; margin: 0 auto;"/>																											
	<input style="width: 40px; height: 20px;" type="text"/>	<input style="width: 40px; height: 20px;" type="text"/>																									
<p>Write an even number with a six in the tens place.</p> <p>_____</p>																											

$10 + \square = 19$	$8 + \square = 15$	$4 + \square = 9$	$8 + \square = 13$
---------------------	--------------------	-------------------	--------------------

Name: \_\_\_\_\_

Count by 1s.

Draw ONE continuous line that touches every box ONCE.  
Count by 1s. Find the box with the number 1. Move up, down, right, or left.  
Keep counting until you reach 18. Do not move into a spot with a ghost.

1	2	3	4	Ghost
5	6	7	8	Ghost
9	10	11	18	17
12	13	14	15	16

Draw 3 pictures in the correct order. Use each of the clues so you will know what to draw.



! Draw 1 of these 3 pictures.  
! The picture IS in the correct spot.



! Draw 1 of these 3 pictures.  
! The picture is NOT in the correct spot.

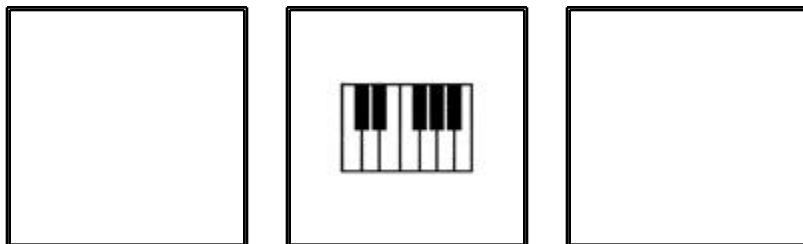


! Draw 1 of these 3 pictures.  
! The picture IS in the correct spot.



! Draw 2 of these 3 pictures.  
! 1 of those pictures is in the correct spot.

Draw the 3 pictures in the correct order:



$3 + 9 = \square$

$6 - 1 = \square$

$7 - 3 = \square$

$13 - 6 = \square$

Name: \_\_\_\_\_

$$\begin{array}{r} 77 \\ + 87 \\ \hline \end{array}$$

$$\begin{array}{r} 115 \\ - 81 \\ \hline \end{array}$$

$$\begin{array}{r} 155 \\ - 85 \\ \hline \end{array}$$

$$\begin{array}{r} 47 \\ + 67 \\ \hline \end{array}$$

$$\begin{array}{r} 56 \\ + 93 \\ \hline \end{array}$$

$$\begin{array}{r} 85 \\ - 75 \\ \hline \end{array}$$

$$\begin{array}{r} 151 \\ - 57 \\ \hline \end{array}$$

$$\begin{array}{r} 23 \\ + 69 \\ \hline \end{array}$$

$$\begin{array}{r} 138 \\ - 58 \\ \hline \end{array}$$

$$\begin{array}{r} 166 \\ - 67 \\ \hline \end{array}$$

$$\begin{array}{r} 72 \\ + 46 \\ \hline \end{array}$$

$$\begin{array}{r} 71 \\ + 33 \\ \hline \end{array}$$

$$\begin{array}{r} 58 \\ - 36 \\ \hline \end{array}$$

$$\begin{array}{r} 13 \\ + 91 \\ \hline \end{array}$$

$$\begin{array}{r} 60 \\ + 53 \\ \hline \end{array}$$

$$\begin{array}{r} 30 \\ + 40 \\ \hline \end{array}$$

$$\begin{array}{r} 95 \\ - 76 \\ \hline \end{array}$$

$$\begin{array}{r} 119 \\ - 54 \\ \hline \end{array}$$

$$\begin{array}{r} 152 \\ - 60 \\ \hline \end{array}$$

$$\begin{array}{r} 190 \\ - 99 \\ \hline \end{array}$$

$$\begin{array}{r} 63 \\ + 55 \\ \hline \end{array}$$

$$\begin{array}{r} 115 \\ - 66 \\ \hline \end{array}$$

$$\begin{array}{r} 44 \\ + 68 \\ \hline \end{array}$$

$$\begin{array}{r} 29 \\ + 13 \\ \hline \end{array}$$

$$\begin{array}{r} 106 \\ - 36 \\ \hline \end{array}$$

$$\begin{array}{r} 23 \\ + 32 \\ \hline \end{array}$$

$$\begin{array}{r} 104 \\ - 63 \\ \hline \end{array}$$

$$\begin{array}{r} 41 \\ + 26 \\ \hline \end{array}$$

$$\begin{array}{r} 55 \\ + 47 \\ \hline \end{array}$$

$$\begin{array}{r} 82 \\ - 53 \\ \hline \end{array}$$

$$\begin{array}{r} 66 \\ - 45 \\ \hline \end{array}$$

$$\begin{array}{r} 10 \\ + 49 \\ \hline \end{array}$$

$$\begin{array}{r} 116 \\ - 74 \\ \hline \end{array}$$

$$\begin{array}{r} 76 \\ + 53 \\ \hline \end{array}$$

$$\begin{array}{r} 71 \\ - 28 \\ \hline \end{array}$$

$$\begin{array}{r} 11 \\ + 68 \\ \hline \end{array}$$

$$\begin{array}{r} 128 \\ - 97 \\ \hline \end{array}$$

$$\begin{array}{r} 12 \\ + 58 \\ \hline \end{array}$$

$$\begin{array}{r} 81 \\ + 21 \\ \hline \end{array}$$

$$\begin{array}{r} 132 \\ - 82 \\ \hline \end{array}$$

$$\begin{array}{r} 141 \\ - 87 \\ \hline \end{array}$$

$$\begin{array}{r} 66 \\ + 48 \\ \hline \end{array}$$

$$\begin{array}{r} 5 \\ + 4 \\ \hline \square \\ + 5 \\ \hline \square \\ + 3 \\ \hline 17 \\ + \square \\ \hline 21 \\ - 4 \\ \hline \square \\ + 7 \\ \hline \square \\ - 5 \\ \hline \square \\ + 6 \\ \hline \square \\ + 7 \\ \hline 32 \\ + \square \\ \hline 38 \\ + 9 \\ \hline \square \end{array}$$



Name: \_\_\_\_\_

$\frac{1}{2}$						$\frac{1}{2}$					
$\frac{1}{3}$				$\frac{1}{3}$				$\frac{1}{3}$			
$\frac{1}{4}$			$\frac{1}{4}$			$\frac{1}{4}$			$\frac{1}{4}$		
$\frac{1}{5}$		$\frac{1}{5}$		$\frac{1}{5}$		$\frac{1}{5}$		$\frac{1}{5}$		$\frac{1}{5}$	
$\frac{1}{9}$	$\frac{1}{9}$	$\frac{1}{9}$	$\frac{1}{9}$	$\frac{1}{9}$	$\frac{1}{9}$	$\frac{1}{9}$	$\frac{1}{9}$	$\frac{1}{9}$	$\frac{1}{9}$	$\frac{1}{9}$	
$\frac{1}{11}$	$\frac{1}{11}$	$\frac{1}{11}$	$\frac{1}{11}$	$\frac{1}{11}$	$\frac{1}{11}$	$\frac{1}{11}$	$\frac{1}{11}$	$\frac{1}{11}$	$\frac{1}{11}$	$\frac{1}{11}$	
$\frac{1}{12}$	$\frac{1}{12}$	$\frac{1}{12}$	$\frac{1}{12}$	$\frac{1}{12}$	$\frac{1}{12}$	$\frac{1}{12}$	$\frac{1}{12}$	$\frac{1}{12}$	$\frac{1}{12}$	$\frac{1}{12}$	

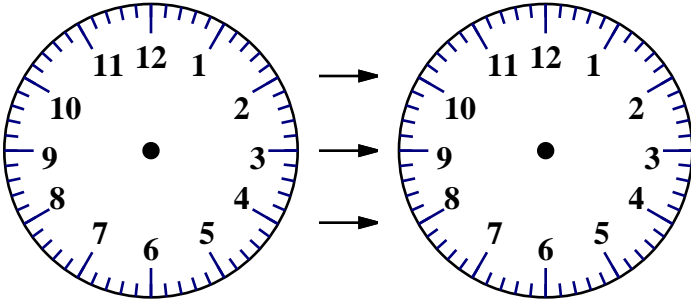
Compare.

$\frac{5}{11} > \frac{4}{9}$	$\frac{1}{2} < \frac{2}{3}$	$\frac{9}{12} \circ \frac{6}{11}$	$\frac{1}{2} = \frac{2}{4}$
$\frac{6}{9} \circ \frac{2}{3}$	$\frac{1}{4} \circ \frac{4}{5}$	$\frac{5}{9} \circ \frac{9}{12}$	$\frac{1}{5} \circ \frac{1}{3}$
$\frac{8}{12} \circ \frac{3}{9}$	$\frac{3}{4} \circ \frac{9}{12}$	$\frac{6}{9} \circ \frac{8}{12}$	$\frac{3}{11} \circ \frac{5}{9}$
$\frac{5}{11} \circ \frac{1}{2}$	$\frac{3}{4} \circ \frac{1}{3}$	$\frac{2}{12} \circ \frac{1}{4}$	$\frac{2}{5} \circ \frac{1}{9}$
$\frac{1}{5} \circ \frac{7}{12}$	$\frac{1}{2} \circ \frac{8}{12}$	$\frac{3}{9} \circ \frac{4}{12}$	$\frac{1}{11} \circ \frac{1}{3}$
$\frac{1}{3} \circ \frac{1}{2}$	$\frac{2}{4} \circ \frac{1}{9}$	$\frac{6}{9} \circ \frac{1}{5}$	$\frac{2}{4} \circ \frac{2}{5}$

Name: \_\_\_\_\_

Jessica gets out of school at forty-five minutes after three. She then has 3 hours before soccer practice starts.

On the first clock show when she gets out of school. On the second clock show when she should be at soccer practice.

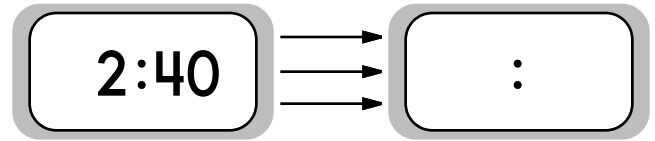


Jessica gets out of school at \_\_\_\_\_

and needs to be at soccer practice at

\_\_\_\_\_.

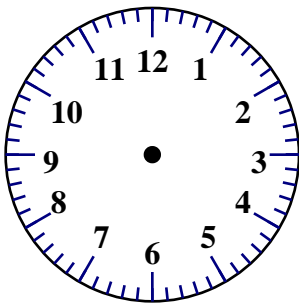
Max is on vacation. His flight just landed and the time zone has changed. He needs to change the time to be 1 hour later. What should the new time be?



It will take him about 30 minutes to leave the airport and arrive at his hotel.

What time will he arrive?

It's twenty-five minutes after four a.m. Show the time on the clock.




What might you be doing at twenty-five minutes after four a.m.?

EdHelper's clocks look so boring. Can you draw your own clock that looks nicer? Then tell us a short story about why your clock looks nicer.

Name: \_\_\_\_\_

?



This bar model shows which fraction?

- $\frac{7}{9}$     
   $\frac{3}{7}$     
   $\frac{7}{7}$   
  $\frac{2}{7}$

Skill: Fractions Challenge

Write the numbers in order from least to greatest.

568,292 , 331,866 , 57,332

Rewrite the numbers in order from smallest to largest.

\_\_\_\_\_ , \_\_\_\_\_ , \_\_\_\_\_

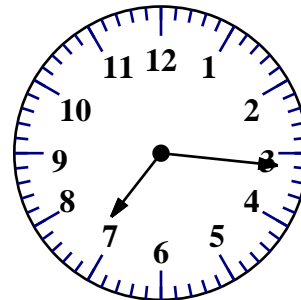
Skill: Whole Numbers and Place Value

The number 630 in word form is six hundred thirty. What is the number 6,300 in word form?

- six thousand, three hundred  
 sixty-three thousand  
 six hundred three

Skill: Place Value and Large Numbers

What time is it?



- 7:05    
  12:03    
  7:16    
  7:09

Skill: Time and Clocks

Use mental math. Do it in your head and only write the answer!

$257 + 16 =$

- 241    
  283    
  270    
  273

Skill: Addition

$8 \times 9 =$





- 7    
  8    
  5    
  72

Skill: Multiply 8,9




Name: \_\_\_\_\_









 <b>5¢</b>	 <b>\$10</b>	 _____ <b>¢</b>	 _____ <b>\$</b>	 _____ <b>¢</b>
---	--	---	---	---







	
_____ <b>\$</b>	









			
_____ <b>¢</b>			









	
<b>\$20.05</b>	

		
_____ <b>\$</b>		

		
		
		
_____ <b>\$</b>		

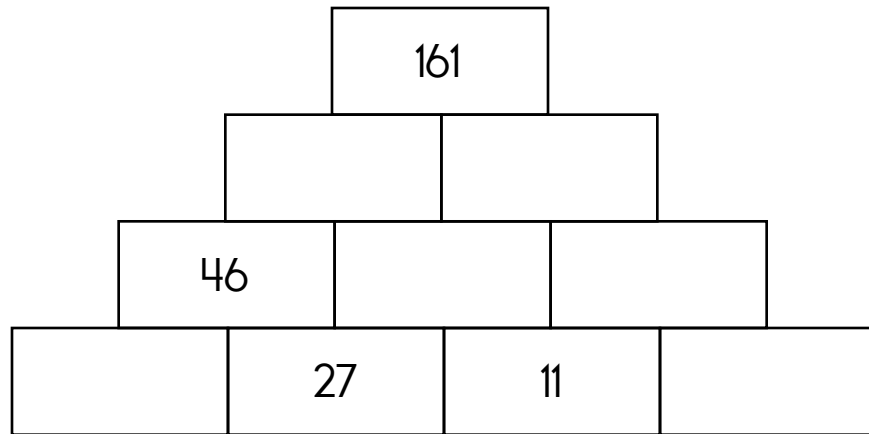
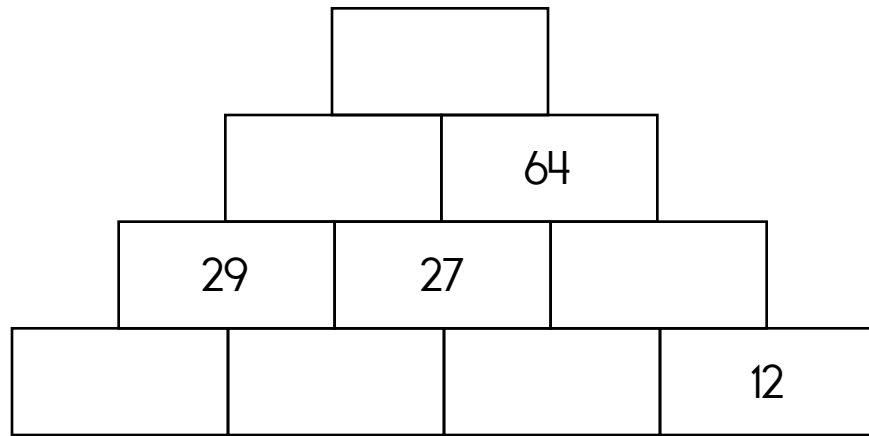
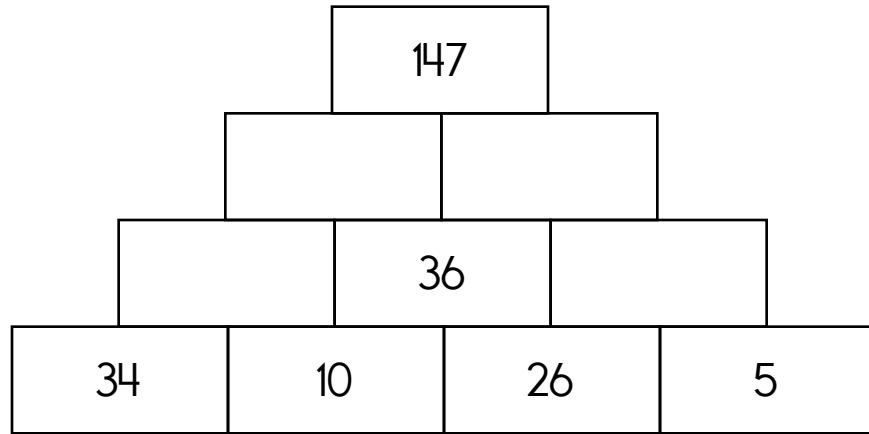
		
		
		
_____ <b>\$</b>		

				
				
				
_____ <b>\$</b>				

		
		
		
		
_____ <b>\$</b>		

Name: \_\_\_\_\_

The block above is the sum of the two blocks below. Fill in the missing blocks.





$23 - 5 = \underline{\quad}$	$\begin{array}{r} 41 \\ - 38 \\ \hline \end{array}$	Color in $\frac{1}{3}$ . <table border="1" style="margin: 5px auto; text-align: center;"><tr><td> </td><td> </td><td> </td></tr><tr><td> </td><td> </td><td> </td></tr></table>							$\begin{array}{r} 93 \\ + 61 \\ \hline \end{array}$
$5 + \square = 9$			$\begin{array}{r} 52 \\ - 22 \\ \hline \end{array}$						



word root **per** can mean **through** **percolate, permeate**

Name: \_\_\_\_\_

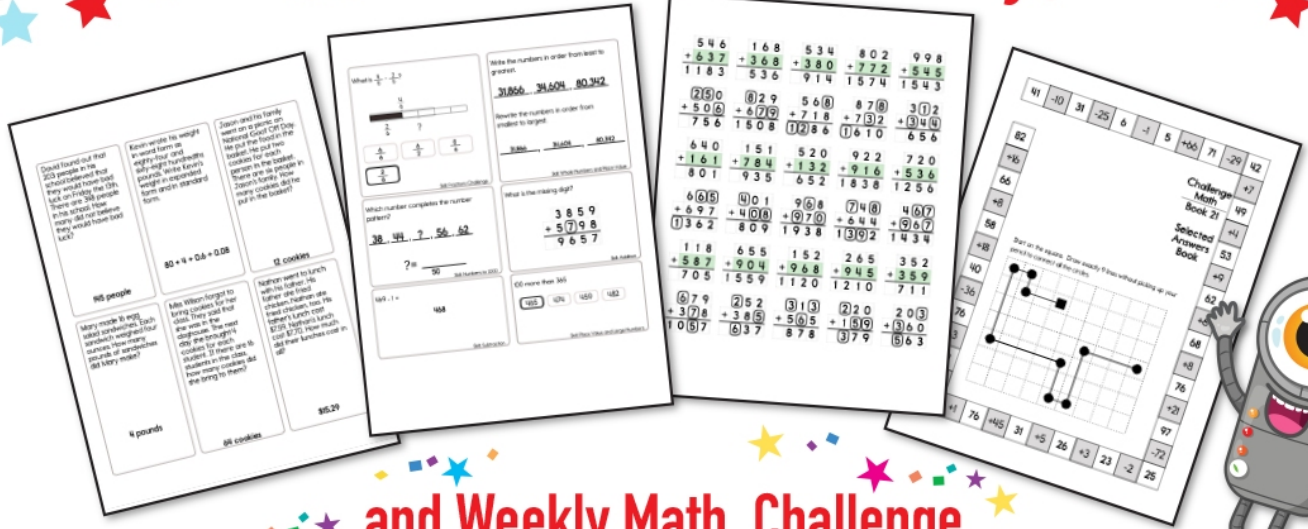
Draw the missing emojis. Explain the rule.




Draw the missing emojis. Explain the rule.




# Subscribe to Get Answer Keys



and Weekly Math, Challenge  
 Workbooks, Posters, Daily Reading,  
 and so much more!





**SUBSCRIBE TO RECEIVE EVEN MORE**  
 Answer Keys • Effective Activities • Access  
 to as many printables as you need!



**edHelper.com**



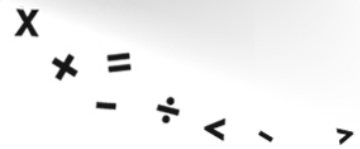

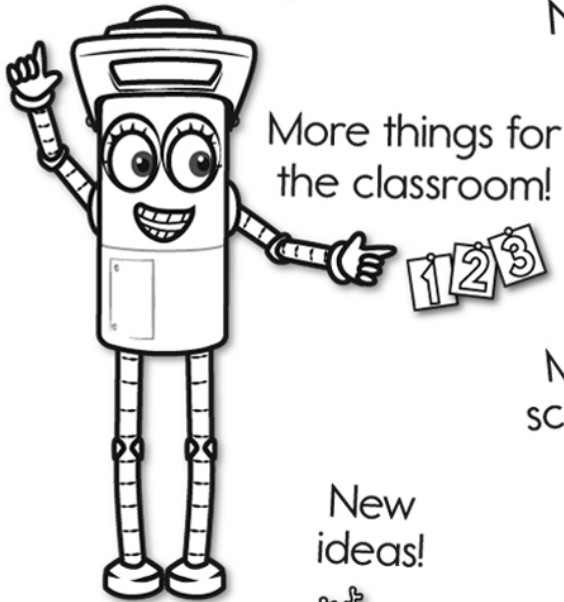


It's NO PREP at edHelper.




# edHelper.com!

New online math games!



More puzzles!





# Take The Boring Out Of Homework!

Easy to  
print!

edHelper

## Weekly K-6 "Take It Home" Books

Kids want choices  
for homework.  
"Take It Home" books  
have fun graphics and  
challenging puzzles and  
problems for older kids.

"Dr. Programmer"  
challenges kids..

Homework  
will never be  
the same!

edHelper.com

