

Name: _____

Guess the number in your head. Keep guessing until your numbers are correct.
Then write the correct answer!

$$\text{😊} + \text{😊} + \text{😊} = 33$$

$$\text{😊} + \text{😞} = 32$$

$$\text{😊} + \text{😞} + 2 = 34$$

$$\text{😞} - \text{😊} = \underline{\quad}$$

$$\text{😊} = \underline{\quad} \quad \text{😞} = \underline{\quad}$$

6 before 14 _____

6 after 14 _____

8 before 13 _____

9 before 19 _____

2 after 19 _____

7 before 12 _____

5 before 11 _____

5 after 11 _____

4 before 18 _____

3 before 15 _____

7 after 17 _____

1 before 16 _____

2 before 17 _____

9 after 18 _____

4 before 17 _____

3 before 89 _____

8 after 26 _____

2 before 73 _____

Name: _____

Fill in the missing numbers. How? The sum of the four surrounding numbers is in the center of each square. Exactly one of the four numbers has to be one of these numbers: -9, -7, or -2. The other three numbers have to all be DIFFERENT and must be from these: 14, 9, 8, 7, 4, 12, or 11.

| | | | | | | |
|---|-----------|----|-----------|---|-----------|----|
| | 4 | | -9 | | 7 | |
| 7 | 14 | 12 | 18 | 8 | 20 | -9 |
| | -9 | | 7 | | | |
| | 18 | | 19 | | 21 | 12 |
| | | | | | 4 | |
| | 17 | | 19 | | 10 | |
| | | | | | | |
| | 25 | | 31 | | 18 | |
| | | | | | | |
| | 11 | | 27 | | | |
| | | | | | | |

greater than 7

either 11 or 14

odd

less than 14

odd

even

odd

odd

even

less than 14

odd

greater than -9

less than 14

either 7 or 11

greater than 8

greater than 9

greater than 7

either -9 or -2

odd

less than 8

even

either 4 or 7

either 7 or 8

Name: _____

Mrs. Moore made twelve servings of oatmeal. Adam ate three servings. His sister ate one serving. Mr. Moore ate four servings. What fraction tells how much of the oatmeal is left?

Gru was just after the big elephant in line. The big elephant was ninth. In which position was Gru?

Hunter and Ava have the same amount of money. Hunter has 11 nickels and 7 dimes. If Ava has 5 dimes, then how many nickels does she have?

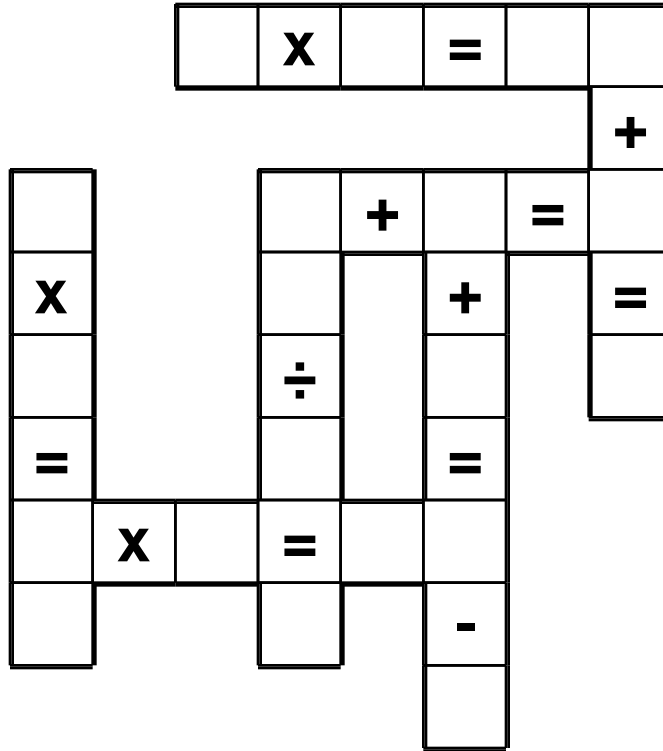
Rose collects squishies. Before she started getting serious about collecting, she only had 9 of them. But now she has 28 squishies. She ordered 6 really big squishies online. They should be delivered next week on her birthday. And guess what? Next week on her birthday, she invited 6 friends over for a slumber party. In the invitation she said, "No gifts. Just give me 3 squishies."

On the day after her birthday, how many squishies will Rose have?

Name: _____

5 • 4 • 2 • 0 • 4 • 1 • 5 • 6 • 0 • 9 • 2 • 6 • 5 • 3 • 6 • 1
8 • 6 • 2 • 1

Use the pieces above to help you fill in the runaway math puzzle.



| | | |
|--|---|---|
| | 7 | 6 |
| - | | 4 |
| <hr style="border: 1px solid black;"/> | | |
| | | |

$6 - 4 + 5 + 3$

What number multiplied by two is eighteen?

6, 8, 10, 12, _____, 16

Circle the number that is largest.

80,400 80,040

80,004 84,000

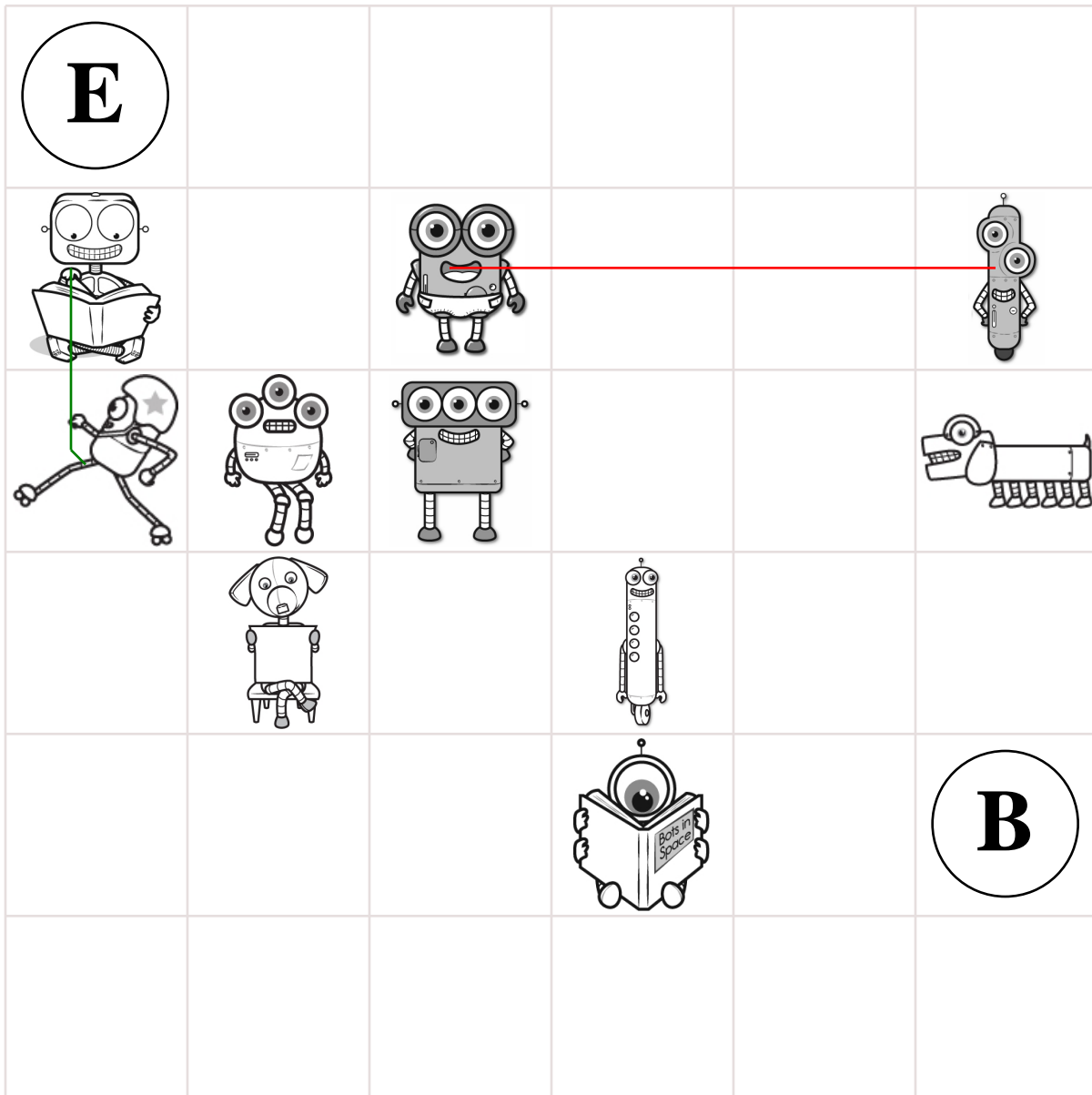
It is 8:46 when Hannah leaves her house. She arrives at school at 9:07. How much time has passed?

$18 - 9 = \square$
 $5 - 1 = \square$
 $7 + 7 = \square$
 $13 - 6 = \square$

Name: _____

Pick up all of the robots from the game board. Start on the **B** circle. Do not pick up your pencil. Draw a line going left, right, up, or down. **Every line must end on a robot or the E circle. No stopping on an empty box.** Try to collect all the robots and finish your last line on the **E** circle. You can go through a robot more than once.

Part of the line has already been drawn for you.



Didn't get them all? That's ok. This was hard.

I missed _____ circle(s).

Name: _____

| | | |
|---|--|--|
| <p>Robert picked 6 baskets of apples. There were 30 apples in each basket. How many apples did he pick?</p> | <p>Justin went to the beach. He found 2 quarters, 1 nickel, 5 dimes, and 7 pennies. How much money did he find in all?</p> | <p>Nathan's goal was to run 3 miles each day. How many miles would he run in 6 days?</p> |
|---|--|--|

| | | |
|---|--|--|
| <p>There were 3 elephants at the zoo. Then 5 more elephants came to the zoo. How many elephants were at the zoo in all?</p> | <p>Fill in the blanks with these numbers: 2, 1, 3</p> $\begin{array}{r} 7 \quad 3 \\ - \quad \square \quad \square \\ \hline 4 \quad \square \end{array}$ | <p>Fill in the blanks with these numbers: 3, 6, 3</p> $\begin{array}{r} \square \quad 9 \\ - \quad 3 \quad \square \\ \hline \square \end{array}$ |
|---|--|--|

| | |
|---|---|
| $\begin{array}{r} 20 \\ 50 \\ + 11 \\ \hline \end{array}$ | $\begin{array}{r} 26 \\ 20 \\ + 43 \\ \hline \end{array}$ |
|---|---|

Can you think of a five-letter word that has the vowel U in it?

| |
|---|
| $\begin{array}{r} 43 \\ + 13 \\ \hline \end{array}$ |
|---|

| |
|---------------------|
| $13 + \square = 15$ |
| $12 + \square = 19$ |

Name: _____

| | | |
|--|---|--|
| Circle the best estimate for the answer to: $1,739 - 508$ 1,400 2,400 1,200 2,300 | $\begin{array}{r} 64 \\ - 52 \\ \hline \end{array}$ | $11 + 9 = \underline{\hspace{2cm}}$ $7 + \square = 9$ |
|--|---|--|

| | | |
|--|-------------------------------------|-------------------------------------|
| <input type="radio"/> wide <input type="radio"/> wied <input type="radio"/> wie <input type="radio"/> widde | $26 - 6 = \underline{\hspace{2cm}}$ | $91 - 5 = \underline{\hspace{2cm}}$ |
| | $8 + \square = 12$ | |

| | | | | |
|---|---|---|---|---|
| $\begin{array}{r} 95 \\ - 24 \\ \hline \end{array}$ | $\begin{array}{r} 24 \\ + 83 \\ \hline \end{array}$ | $\begin{array}{r} 93 \\ + 44 \\ \hline \end{array}$ | Fill in the blanks with these numbers: 0, 3, 3 $\begin{array}{r} 3 \quad \square \\ + 5 \quad \square \\ \hline 8 \quad \square \end{array}$ | Fill in the blanks with these numbers: 2, 3, 3 $\begin{array}{r} \square \quad \square \\ + 6 \quad 0 \\ \hline 8 \quad \square \end{array}$ |
|---|---|---|---|---|

| | | |
|--|--|---|
| Fill in the blanks with these numbers: 6, 3, 1 $\begin{array}{r} 2 \quad \square \\ 1 \quad 2 \\ + \square \quad \square \\ \hline 9 \quad 6 \end{array}$ | Fill in the blanks with these numbers: 3, 7, 1 $\begin{array}{r} \square \quad 1 \\ 5 \quad 4 \\ + \square \quad 2 \\ \hline 9 \quad \square \end{array}$ | $87 - 5 = \underline{\hspace{2cm}}$ $6 + \square = 8$ $11 + \square = 16$ $6 + \square = 13$ $6 + \square = 20$ |
|--|--|---|

| | | | |
|-------------------|--------------------|--------------------|--------------------|
| $5 + \square = 7$ | $4 + \square = 11$ | $5 + \square = 10$ | $8 + \square = 16$ |
|-------------------|--------------------|--------------------|--------------------|

Name: _____

The vowels are missing in the word search.
Fill in the missing vowels and circle the words.

| | | | | | | | | | |
|---|---|---|---|---|---|---|---|---|---|
| C | T | | | | C | K | C | | C |
| | | G | | D | | F | R | D | F |
| T | T | | L | S | R | | D | I | K |
| | V | T | | Y | | | | S | N |
| N | K | T | | C | | T | B | M | |
| D | | P | | G | L | H | T | A | C |
| T | T | T | L | | | | | Y | K |
| | T | | L | D | Y | R | | B | C |
| S | L | | L | | | P | N | B | N |
| B | | | | K | | | M | G | B |

DISMAY • OLD • TEND • PIG
CEREAL • OBTAIN • FEATHER • KETTLE
AIM • KNOCK

Round to the nearest ten.

5,832 is rounded to _____

49,283 is rounded to _____

4,688 is rounded to _____

Does the adjective in this sentence tell how many, which one, or what kind?

The poor puppy had a fly that would not stop bothering him.

Which number is eight hundred twenty-one?

2,081 821 8,021
812

Fill in the blanks with these numbers:

4, 0, 3

| | | | |
|-------|---|---|---|
| | | | |
| | | | |
| + | 1 | 0 | |
| <hr/> | | | |
| | | | 0 |

Fill in the blanks with these numbers:

4, 4, 2

| | | | |
|-------|---|---|--|
| | | | |
| | | 5 | |
| - | | | |
| <hr/> | | | |
| | 1 | 2 | |

Circle the abstract noun in the sentence.

Jasmine told me the truth.

53 + 7 = _____

4 + = 15

68 + 9 = _____

8 + 7 =

13 - 9 =

6 + 3 =

10 - 1 =

Name: _____

$$\begin{array}{r} 27 \\ + 95 \\ \hline \end{array}$$

$$\begin{array}{r} 69 \\ - 19 \\ \hline \end{array}$$

$$\begin{array}{r} 144 \\ - 66 \\ \hline \end{array}$$

$$\begin{array}{r} 10 \\ + 73 \\ \hline \end{array}$$

$$\begin{array}{r} 20 \\ + 75 \\ \hline \end{array}$$

$$\begin{array}{r} 79 \\ - 64 \\ \hline \end{array}$$

$$\begin{array}{r} 112 \\ - 81 \\ \hline \end{array}$$

$$\begin{array}{r} 20 \\ + 78 \\ \hline \end{array}$$

$$\begin{array}{r} 24 \\ + 22 \\ \hline \end{array}$$

$$\begin{array}{r} 165 \\ - 66 \\ \hline \end{array}$$

$$\begin{array}{r} 77 \\ + 61 \\ \hline \end{array}$$

$$\begin{array}{r} 162 \\ - 71 \\ \hline \end{array}$$

$$\begin{array}{r} 120 \\ - 43 \\ \hline \end{array}$$

$$\begin{array}{r} 98 \\ - 41 \\ \hline \end{array}$$

$$\begin{array}{r} 34 \\ + 10 \\ \hline \end{array}$$

$$\begin{array}{r} 75 \\ + 94 \\ \hline \end{array}$$

$$\begin{array}{r} 30 \\ + 55 \\ \hline \end{array}$$

$$\begin{array}{r} 164 \\ - 95 \\ \hline \end{array}$$

$$\begin{array}{r} 39 \\ + 57 \\ \hline \end{array}$$

$$\begin{array}{r} 97 \\ - 79 \\ \hline \end{array}$$

$$\begin{array}{r} 50 \\ - 11 \\ \hline \end{array}$$

$$\begin{array}{r} 63 \\ + 57 \\ \hline \end{array}$$

$$\begin{array}{r} 72 \\ + 29 \\ \hline \end{array}$$

$$\begin{array}{r} 111 \\ - 28 \\ \hline \end{array}$$

$$\begin{array}{r} 80 \\ - 47 \\ \hline \end{array}$$

$$\begin{array}{r} 97 \\ - 19 \\ \hline \end{array}$$

$$\begin{array}{r} 26 \\ + 19 \\ \hline \end{array}$$

$$\begin{array}{r} 33 \\ + 60 \\ \hline \end{array}$$

$$\begin{array}{r} 11 \\ + 21 \\ \hline \end{array}$$

$$\begin{array}{r} 128 \\ - 49 \\ \hline \end{array}$$

$$\begin{array}{r} 98 \\ + 50 \\ \hline \end{array}$$

$$\begin{array}{r} 60 \\ - 41 \\ \hline \end{array}$$

$$\begin{array}{r} 125 \\ - 71 \\ \hline \end{array}$$

$$\begin{array}{r} 14 \\ + 59 \\ \hline \end{array}$$

$$\begin{array}{r} 84 \\ + 47 \\ \hline \end{array}$$

$$\begin{array}{r} 98 \\ - 50 \\ \hline \end{array}$$

$$\begin{array}{r} 60 \\ + 37 \\ \hline \end{array}$$

$$\begin{array}{r} 85 \\ + 38 \\ \hline \end{array}$$

$$\begin{array}{r} 63 \\ - 53 \\ \hline \end{array}$$

$$\begin{array}{r} 38 \\ + 30 \\ \hline \end{array}$$

$$\begin{array}{r} 66 \\ - 25 \\ \hline \end{array}$$

$$\begin{array}{r} 110 \\ - 66 \\ \hline \end{array}$$

$$\begin{array}{r} 4 \\ + 8 \\ \hline \square \\ + 3 \\ \hline \square \\ + 8 \\ \hline 23 \\ - \square \\ \hline 20 \\ + \square \\ \hline 25 \\ + 4 \\ \hline \square \\ + 5 \\ \hline 34 \\ - \square \\ \hline 29 \\ - \square \\ \hline 22 \\ + \square \\ \hline 26 \\ - 6 \\ \hline \square \end{array}$$

Name: _____

$17 - 7 = \underline{\quad}$

$$\begin{array}{r} 17 \\ + 10 \\ \hline \square \end{array}$$

$$\begin{array}{r} \square \\ - 17 \\ \hline 10 \end{array}$$

$$\begin{array}{r} 2 \\ + 3 \\ \hline \end{array}$$

$$\begin{array}{r} 10 \\ + 16 \\ \hline \end{array}$$

$$\begin{array}{r} 11 \\ + 5 \\ \hline \end{array}$$

$6 + 2 + 2 = \underline{\quad}$

$$\begin{array}{r} 11 \\ - 5 \\ \hline \end{array}$$

$$\begin{array}{r} 22 \\ - 3 \\ \hline \end{array}$$

$$\begin{array}{r} 11 \\ - 7 \\ \hline \end{array}$$

$122 + 574 = \underline{\quad}$

Count by tens.

$60 \underline{\quad} \underline{\quad} \underline{\quad} \underline{\quad}$

$\underline{\quad} \underline{\quad} \underline{\quad} \underline{\quad}$

$77 + 6 = \underline{\quad}$

$5 + 5 + 9 = \underline{\quad}$

16 31 2 25 8 ~~22~~ ~~19~~ 13 17 14 12 17

$\boxed{19} + 3 = \boxed{22}$

$\boxed{\quad} + 17 = \boxed{\quad}$

$\boxed{\quad} + 19 = \boxed{\quad}$

$3 + \boxed{\quad} = \boxed{\quad}$

$\boxed{\quad} + \boxed{\quad} = 19$

$\boxed{\quad} + 3 = \boxed{\quad}$

9 2 18 18 12 26 ~~8~~ 7 12 ~~19~~ 6 27

$13 + \boxed{6} = \boxed{19}$

$\boxed{\quad} + 11 = \boxed{\quad}$

$14 + \boxed{\quad} = \boxed{\quad}$

$\boxed{\quad} + \boxed{\quad} = 15$

$10 + \boxed{\quad} = \boxed{\quad}$

$\boxed{\quad} + 9 = \boxed{\quad}$

$91 = \underline{\quad} \quad 90 + 1$

$358 = \underline{\quad}$

$446 = \underline{\quad}$

$719 = \underline{\quad}$

$835 = \underline{\quad}$

$127 = \underline{\quad}$

$11 + \boxed{\quad} = 15$

$11 + \boxed{\quad} = 19$

$11 + \boxed{\quad} = 14$

$10 + \boxed{\quad} = 16$

Name: _____

$19 - 9 = \underline{\quad}$

$$\begin{array}{r} 19 \\ + 4 \\ \hline \end{array}$$

$$\begin{array}{r} 11 \\ + 11 \\ \hline \end{array}$$

$$\begin{array}{r} 15 \\ + 11 \\ \hline \end{array}$$

Continue the pattern.

20 26 32 _____

$45 + 8 = \underline{\quad}$

$$\begin{array}{r} 96 \\ - 54 \\ \hline \square \end{array}$$

$$\begin{array}{r} 54 \\ + \square \\ \hline 96 \end{array}$$

$23 - 8 = \underline{\quad}$


$8 + \underline{\quad} = 23$

$14 + 8 = \underline{\quad}$

$\underline{\quad} - 8 = 14$


$88 + 4 = \underline{\quad}$

Count the value of the coins.



10c, 20c, _____, _____, _____

___ dimes



5c, _____, _____, _____, _____

___ nickels

18 20 ~~17~~ 17 ~~26~~ 26 5 9 19 2 7 20

$15 + \square = 17$
 $10 + \square = \square$

$13 + \square = \square$
 $\square + \square = 23$

$\square + 9 = \square$
 $18 + \square = \square$

15 14 10 18 28 7 10 21 ~~11~~ 11 9 ~~20~~

$\square + \square = 30$
 $\square + \square = 29$

$\square + \square = 24$
 $\square + 12 = \square$

$\square + \square = 22$
 $18 + \square = \square$

$7 + \square = 9$

$11 + \square = 20$

$7 + \square = 18$

$9 + \square = 15$

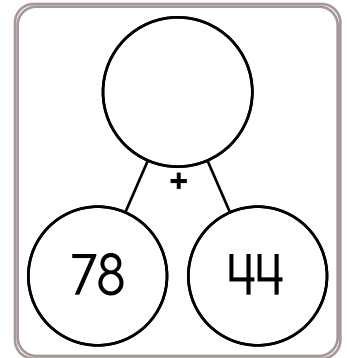
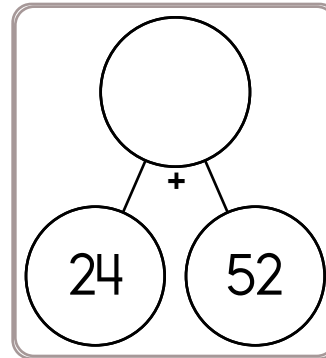
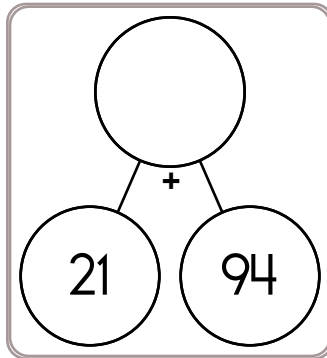
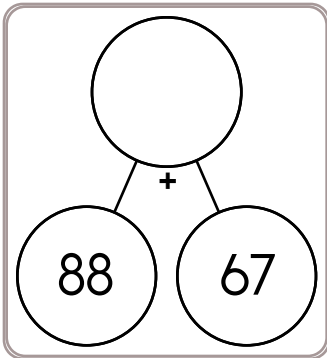
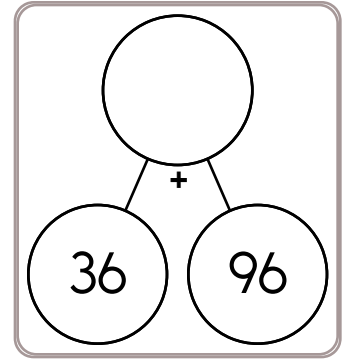
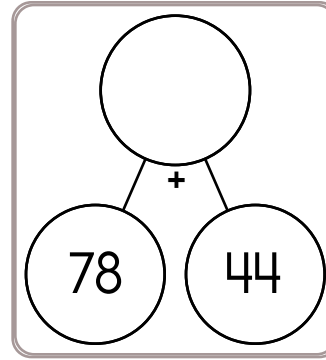
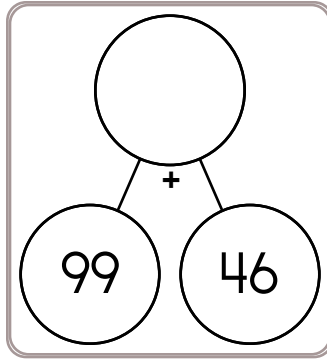
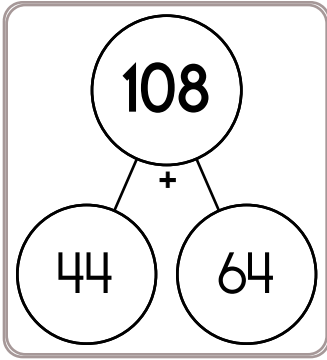
Name: _____

| | | | | | | | | | | | |
|----------------|----------------|----------------|----------------|----------------|----------------|----------------|----------------|----------------|----------------|----------------|----------------|
| $\frac{1}{2}$ | | | | | | $\frac{1}{2}$ | | | | | |
| $\frac{1}{3}$ | | | | $\frac{1}{3}$ | | | | $\frac{1}{3}$ | | | |
| $\frac{1}{5}$ | | $\frac{1}{5}$ | | $\frac{1}{5}$ | | $\frac{1}{5}$ | | $\frac{1}{5}$ | | $\frac{1}{5}$ | |
| $\frac{1}{6}$ | | $\frac{1}{6}$ | | $\frac{1}{6}$ | | $\frac{1}{6}$ | | $\frac{1}{6}$ | | $\frac{1}{6}$ | |
| $\frac{1}{8}$ | | $\frac{1}{8}$ | | $\frac{1}{8}$ | | $\frac{1}{8}$ | | $\frac{1}{8}$ | | $\frac{1}{8}$ | |
| $\frac{1}{9}$ | | $\frac{1}{9}$ | | $\frac{1}{9}$ | | $\frac{1}{9}$ | | $\frac{1}{9}$ | | $\frac{1}{9}$ | |
| $\frac{1}{12}$ | $\frac{1}{12}$ | $\frac{1}{12}$ | $\frac{1}{12}$ | $\frac{1}{12}$ | $\frac{1}{12}$ | $\frac{1}{12}$ | $\frac{1}{12}$ | $\frac{1}{12}$ | $\frac{1}{12}$ | $\frac{1}{12}$ | $\frac{1}{12}$ |

Compare.

| | | | |
|--------------------------------|---------------------------------|--------------------------------|--------------------------------|
| $\frac{1}{2}$ ○ $\frac{1}{5}$ | $\frac{3}{9}$ ○ $\frac{4}{12}$ | $\frac{8}{9}$ ○ $\frac{1}{3}$ | $\frac{9}{12}$ ○ $\frac{1}{9}$ |
| $\frac{5}{6}$ ○ $\frac{1}{8}$ | $\frac{4}{8}$ ○ $\frac{1}{2}$ | $\frac{1}{2}$ ○ $\frac{3}{5}$ | $\frac{6}{8}$ ○ $\frac{9}{12}$ |
| $\frac{4}{8}$ ○ $\frac{1}{6}$ | $\frac{2}{3}$ ○ $\frac{11}{12}$ | $\frac{1}{2}$ ○ $\frac{4}{5}$ | $\frac{6}{9}$ ○ $\frac{1}{6}$ |
| $\frac{1}{12}$ ○ $\frac{1}{3}$ | $\frac{6}{12}$ ○ $\frac{2}{8}$ | $\frac{3}{5}$ ○ $\frac{6}{9}$ | $\frac{2}{8}$ ○ $\frac{3}{12}$ |
| $\frac{3}{6}$ ○ $\frac{1}{2}$ | $\frac{2}{3}$ ○ $\frac{5}{8}$ | $\frac{1}{5}$ ○ $\frac{4}{12}$ | $\frac{1}{3}$ ○ $\frac{1}{5}$ |
| $\frac{7}{8}$ ○ $\frac{3}{12}$ | $\frac{2}{12}$ ○ $\frac{1}{6}$ | $\frac{1}{3}$ ○ $\frac{1}{8}$ | $\frac{3}{9}$ ○ $\frac{1}{2}$ |

Name: _____



$___ + 38 = 131$

$98 + ___ = 169$

$___ + 73 = 103$

$52 + ___ = 106$

$16 + ___ = 59$

$___ + 66 = 99$

$69 + ___ = 152$

$___ + 19 = 96$

$41 + ___ = 137$

$___ + 32 = 115$

$___ + 95 = 123$

$55 + ___ = 84$

$$\begin{array}{r} 45 \\ + 48 \\ \hline \end{array}$$

$$\begin{array}{r} 49 \\ + 34 \\ \hline \end{array}$$

$$\begin{array}{r} 12 \\ + 30 \\ \hline \end{array}$$

$$\begin{array}{r} 87 \\ + 88 \\ \hline \end{array}$$

$$\begin{array}{r} 50 \\ + 91 \\ \hline \end{array}$$

$$\begin{array}{r} 85 \\ + 56 \\ \hline \end{array}$$

$$\begin{array}{r} 46 \\ + 63 \\ \hline \end{array}$$

$$\begin{array}{r} 59 \\ + 74 \\ \hline \end{array}$$

$$\begin{array}{r} 43 \\ + 87 \\ \hline \end{array}$$

$$\begin{array}{r} 38 \\ + 21 \\ \hline \end{array}$$

$$\begin{array}{r} 94 \\ + 98 \\ \hline \end{array}$$

$$\begin{array}{r} 91 \\ + 25 \\ \hline \end{array}$$

Name: _____

$$\begin{array}{r} 71 \\ + 93 \\ \hline \end{array}$$

$$\begin{array}{r} 80 \\ + 47 \\ \hline \end{array}$$

$$\begin{array}{r} 69 \\ + 26 \\ \hline \end{array}$$

$$\begin{array}{r} 21 \\ + 75 \\ \hline \end{array}$$

$$\begin{array}{r} 55 \\ + 34 \\ \hline \end{array}$$

$$\begin{array}{r} 99 \\ + 59 \\ \hline \end{array}$$

$$\begin{array}{r} 50 \\ + \square\square \\ \hline 116 \end{array}$$

$$\begin{array}{r} \square\square \\ + 25 \\ \hline 112 \end{array}$$

$$\begin{array}{r} \square 0 \\ + 3\square \\ \hline 110 \end{array}$$

$$\begin{array}{r} 48 \\ + \square 4 \\ \hline \square 2 \end{array}$$

$$\begin{array}{r} 40 \\ + \square 5 \\ \hline 1\square 5 \end{array}$$

$$\begin{array}{r} 65 \\ + \square 2 \\ \hline 1\square 7 \end{array}$$

$$\begin{array}{r} 85 \\ + 82 \\ \hline \end{array}$$

$$\begin{array}{r} 70 \\ + 28 \\ \hline \end{array}$$

$$\begin{array}{r} 86 \\ + 93 \\ \hline \end{array}$$

$$\begin{array}{r} 31 \\ + 89 \\ \hline \end{array}$$

$$\begin{array}{r} 48 \\ + 85 \\ \hline \end{array}$$

$$\begin{array}{r} 62 \\ + 66 \\ \hline \end{array}$$

$$\begin{array}{r} \square 4 \\ + 6\square \\ \hline 83 \end{array}$$

$$\begin{array}{r} \square\square \\ + 62 \\ \hline 157 \end{array}$$

$$\begin{array}{r} \square 2 \\ + \square\square \\ \hline 106 \end{array}$$

$$\begin{array}{r} \square 0 \\ + 47 \\ \hline 1\square 7 \end{array}$$

$$\begin{array}{r} 6\square \\ + \square 8 \\ \hline \square 34 \end{array}$$

$$\begin{array}{r} 39 \\ + 7\square \\ \hline \square 11 \end{array}$$

$$\begin{array}{r} 39 \\ + 59 \\ \hline \end{array}$$

$$\begin{array}{r} 55 \\ + 17 \\ \hline \end{array}$$

$$\begin{array}{r} 46 \\ + 45 \\ \hline \end{array}$$

$$\begin{array}{r} 75 \\ + 46 \\ \hline \end{array}$$

$$\begin{array}{r} 39 \\ + 50 \\ \hline \end{array}$$

$$\begin{array}{r} 44 \\ + 54 \\ \hline \end{array}$$

$$\begin{array}{r} \square 0 \\ + 3\square \\ \hline 68 \end{array}$$

$$\begin{array}{r} 9\square \\ + \square 8 \\ \hline 182 \end{array}$$

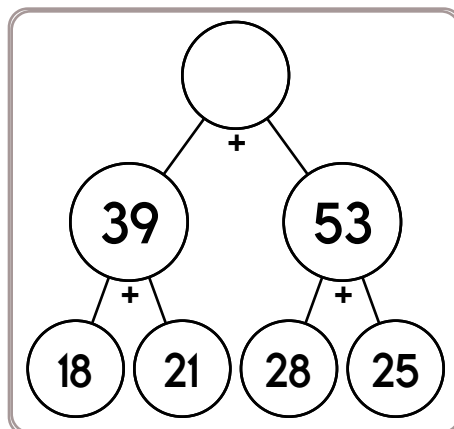
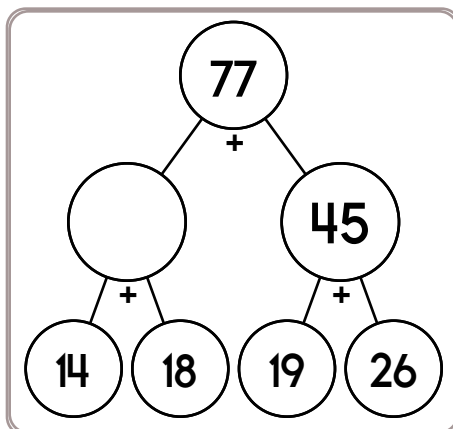
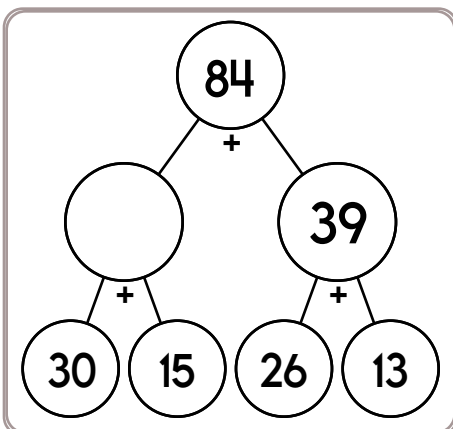
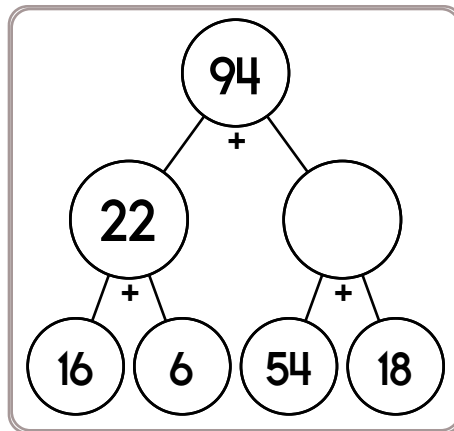
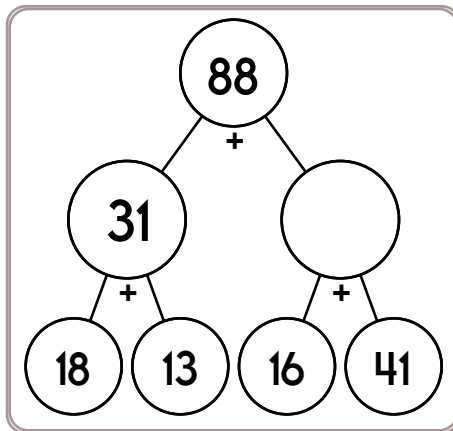
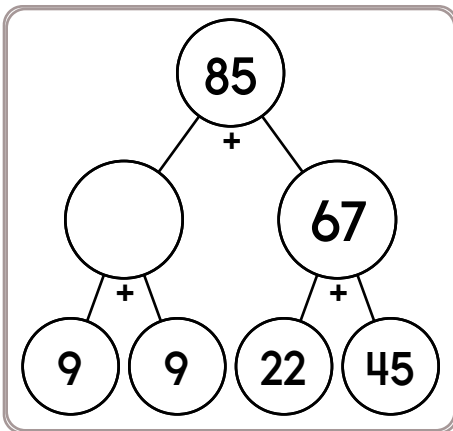
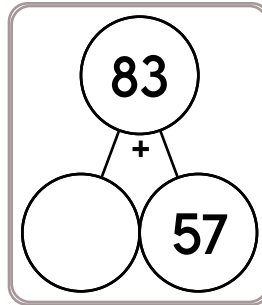
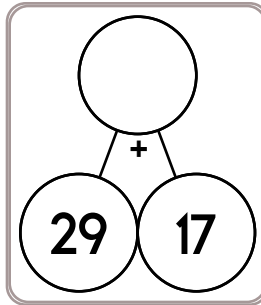
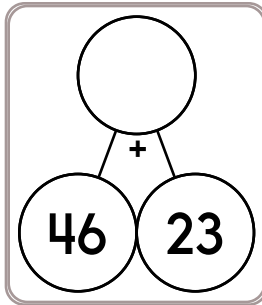
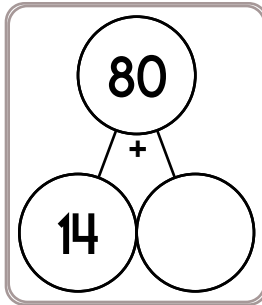
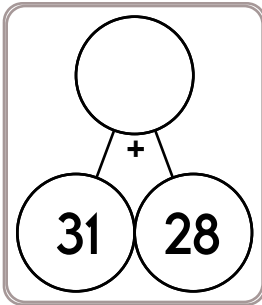
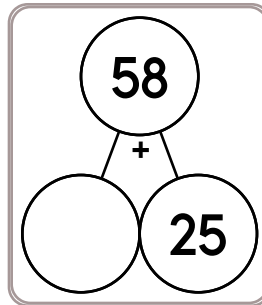
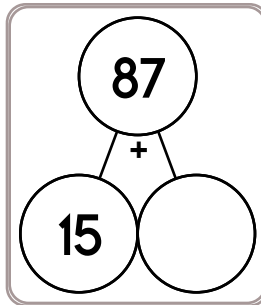
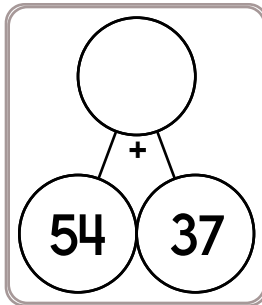
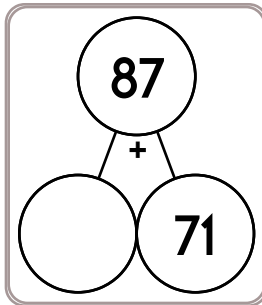
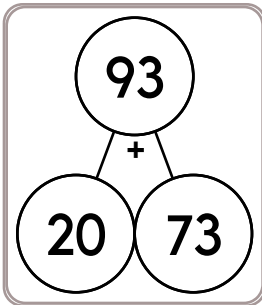
$$\begin{array}{r} 31 \\ + \square\square \\ \hline \square 8 \end{array}$$

$$\begin{array}{r} \square 9 \\ + 6\square \\ \hline 149 \end{array}$$

$$\begin{array}{r} \square\square \\ + 38 \\ \hline 133 \end{array}$$

$$\begin{array}{r} 45 \\ + \square\square \\ \hline 93 \end{array}$$

Name: _____



$6 + 5 - 3$

9 thousands, 2 hundreds

Round 78 to the nearest 10.

Name: _____

Draw a line from START to END.

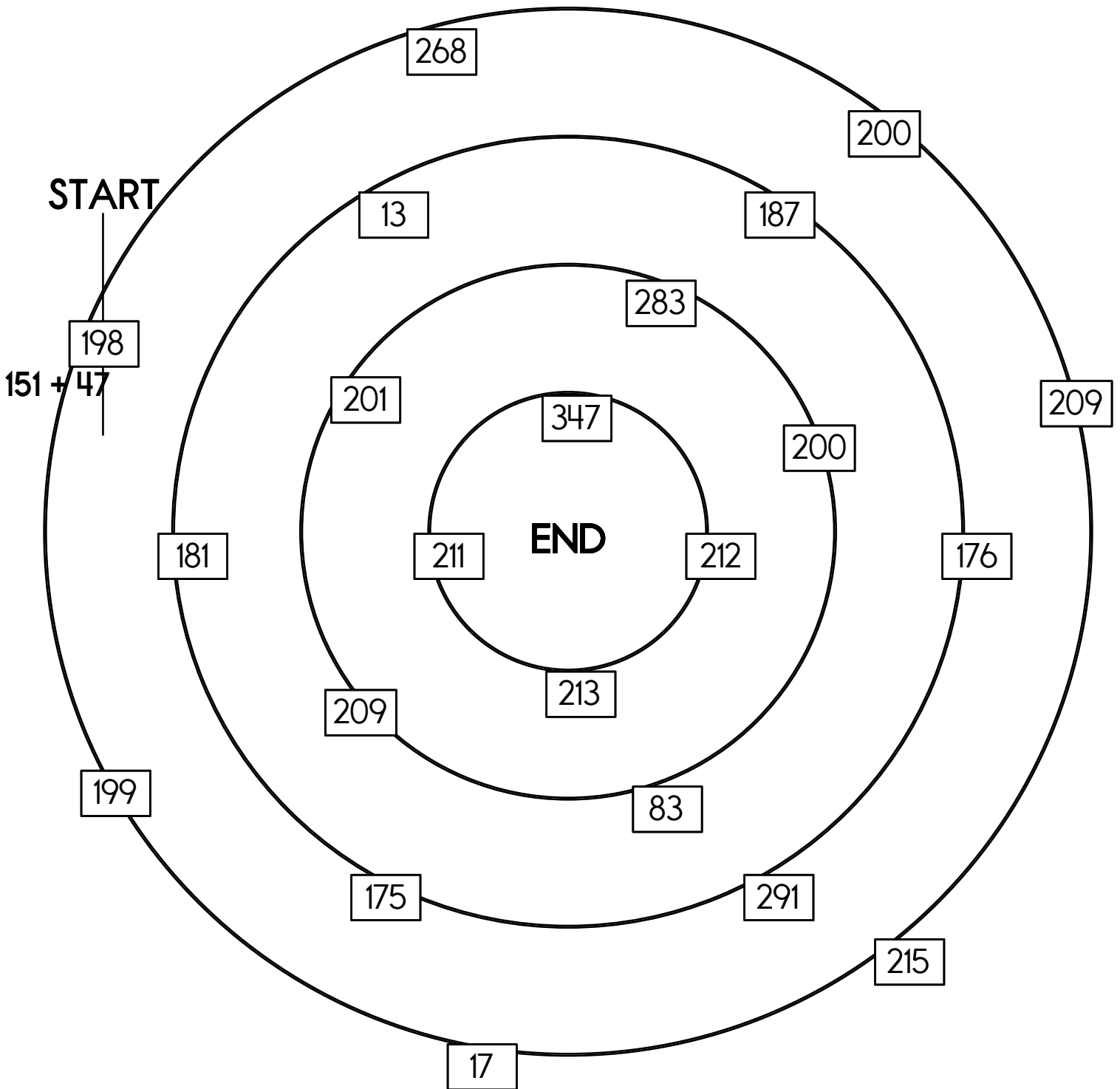
$132 + 43$

~~$151 + 47$~~

$226 - 15$

$243 - 43$

Cross out the equation you use above and then write it below.



Name: _____

Fill in the missing numbers.

Only rule - The same number CAN NOT be next to each other, in ANY direction.

Dark lines surround a block. Numbers to use in a block:

A block with 1 space has to be the number 1.

A block with 2 spaces must have the numbers 1 and 2.

A block with 3 spaces must have the numbers 1, 2, and 3.

A block with 4 spaces must have the numbers 1, 2, 3, and 4.

| | | | | |
|---|--|---|---|---|
| 3 | | 3 | 2 | 3 |
| 4 | | 4 | 1 | 4 |
| 2 | | 2 | 3 | 2 |
| 1 | | 1 | 4 | 1 |

An entire block with 4 spaces is blank. Since the block is 4 spaces it uses the numbers 1-4.

2 1 4 3

| | | | | |
|---|---|---|---|---|
| 1 | 3 | 1 | 3 | 1 |
| 2 | 4 | 2 | 4 | 2 |
| | | 1 | 3 | 1 |
| | | 2 | 4 | 2 |

An entire block with 4 spaces is blank. Since the block is 4 spaces it uses the numbers 1-4.

1 2 3 4

| | | | | |
|---|---|---|---|---|
| 2 | | | 1 | |
| | 4 | 3 | 4 | 3 |
| 1 | 2 | 1 | 2 | 1 |
| | 3 | 4 | | |
| 1 | 2 | 1 | 2 | 1 |

Hint - These numbers are missing:

3 4 2 3 4 1 2

| | | | | |
|---|---|---|---|---|
| 1 | | 1 | 2 | |
| | 3 | 4 | 3 | 4 |
| 1 | | 1 | | 1 |
| 3 | 4 | 3 | | 3 |
| 2 | 1 | 2 | 1 | |

Hint - These numbers are missing:

1 2 4 2 4 2 2

Name: _____

Fill in the missing numbers.

| | | | | |
|---|---|---|---|---|
| 1 | 3 | 1 | 4 | |
| | 4 | | 3 | 1 |
| 1 | 3 | 1 | | |
| 2 | | 2 | 3 | 1 |
| | 3 | 1 | 4 | |

Hint - These numbers are missing:

1 2 2 2 2 4 4 2

| | | | | |
|---|---|---|---|---|
| 2 | 4 | 1 | | 1 |
| 1 | | 2 | 4 | 2 |
| 2 | | 1 | 3 | |
| | 3 | | 4 | 2 |
| 2 | 4 | 1 | | |

Hint - These numbers are missing:

3 1 4 2 1 3 1 3

| | | | | |
|---|---|---|---|---|
| | 4 | 1 | | 2 |
| | | 2 | 4 | 1 |
| 1 | | 1 | | 2 |

Hint - These numbers are missing:

3 1 3 3 4 2

| | | | | |
|---|---|---|---|---|
| | 4 | | 3 | 1 |
| 2 | 3 | | 4 | |
| | | 2 | 3 | 1 |

Hint - These numbers are missing:

1 1 2 4 1 2

Circle the number that is smallest.

6,006 6,600

6,060

What is 27 less than 222?

Write an even number.

Name: _____

Each box needs a number from 1 to 9. You may re-use numbers.

| | | | | | | | |
|----------------|---------------|----------------|---------------|----------------|---------------|----------------|---|
| | | sum of 10 → | | | | sum of 9 ↓ | |
| sum of 7 ↓ | | sum of 8 ↓ | sum of 4 → | | 1 | | |
| 4 | sum of 8 → | 5 | | sum of 8 → | | | |
| 2 | | | sum of 9 ↓ | sum of 10 ↓ | sum of 9 → | | 6 |
| 1 | sum of 6 → | 2 | | | sum of 3 ↓ | sum of 10 ↓ | |
| | sum of 4 ↓ | | | | | | |
| sum of 10 → | 3 | 7 | sum of 4 → | | 1 | | |
| sum of 3 → | | | | | | | |

| | | | | | | | |
|---------------|---------------|---------------|---------------|---------------|---------------|---|---------------|
| | sum of 5 ↓ | sum of 7 → | | 3 | | | |
| sum of 8 → | 3 | | | | sum of 7 ↓ | | |
| sum of 5 → | | | 3 | sum of 5 → | | | 2 |
| sum of 5 ↓ | 1 | sum of 9 → | | | | | sum of 5 ↓ |
| | | sum of 5 ↓ | sum of 9 ↓ | sum of 9 → | | | |
| | sum of 8 → | | | | sum of 8 ↓ | | |
| | | | | sum of 5 → | 1 | 3 | 1 |
| | | | | | | | |

Sudoku Sums of 7

Each row, column, and box must have the numbers 1 through 4.
Hint: Look for sudoku sums. The sum of the two boxes inside of the dashed lines is 7.

Here is an example of a sudoku sum of 7:

| | |
|---|---|
| 2 | 5 |
|---|---|

| | | | |
|---|--|---|---|
| | | 3 | |
| 3 | | | |
| 2 | | 1 | |
| | | | 2 |

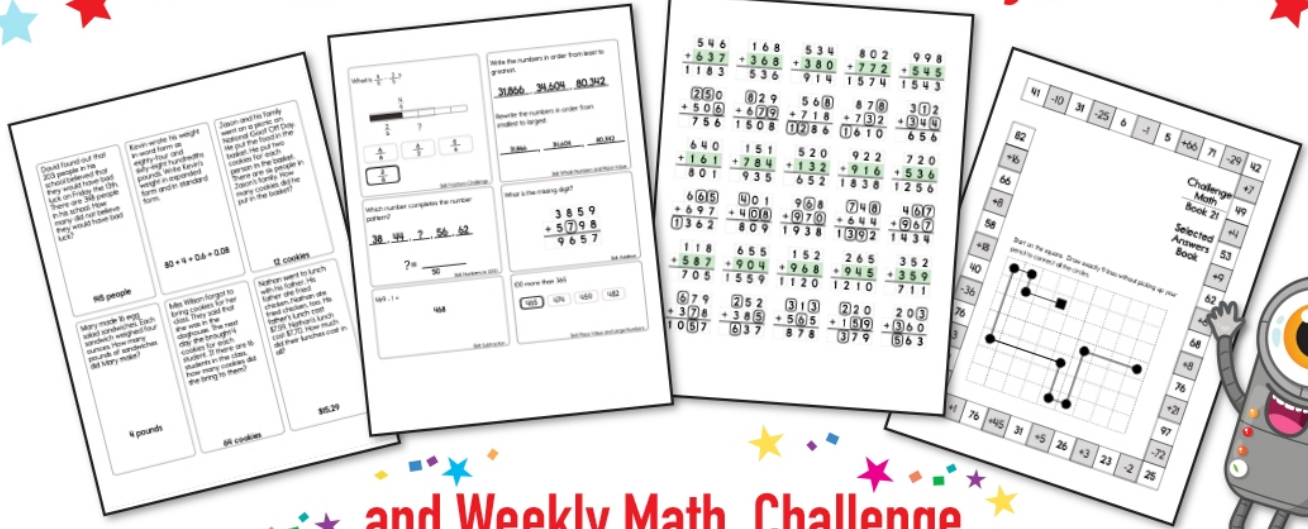
soww

sow


suo

siw


Subscribe to Get Answer Keys





and Weekly Math, Challenge
Workbooks, Posters, Daily Reading,
and so much more!



SUBSCRIBE TO RECEIVE EVEN MORE
Answer Keys • Effective Activities • Access
to as many printables as you need!

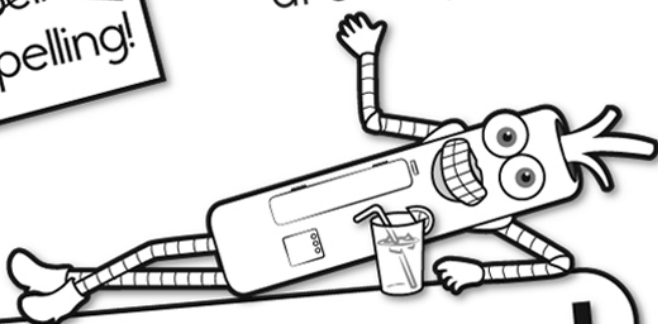


edHelper.com




It's NO PREP at edHelper.

More history!




edHelper.com!



New online math games!



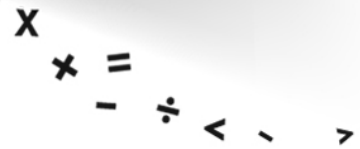
More things for the classroom!




More science!



New ideas!



More puzzles!



Take The Boring Out Of Homework!

Easy to
print!

edHelper

Weekly K-6 "Take It Home" Books

Kids want choices
for homework.
"Take It Home" books
have fun graphics and
challenging puzzles and
problems for older kids.

"Dr. Programmer"
challenges kids..

Homework
will never be
the same!

edHelper.com

