

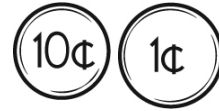
Name: _____

Circle all the ways to make 8.

5 + 3 7 + 1 1 + 6
4 + 4 6 + 2 4 + 5
5 + 5 4 + 2 1 + 5

9, 11, 13, 15, _____, 19

How much is this?



A, _____, K, P, U, Z

Write the number that is 1 more.

14 ____

70 ____

63 ____

In four years Sarah will be in the seventh grade. What grade is she currently in?

Write the number that is 2 more.

12 ____

74 ____

36 ____

Fill in the blank with >, <, or =.

3 < 17

7 __ 3

19 __ 19

10 __ 6

10 __ 14

Write the number that comes after.

1 2

7 ____

4 ____

Circle the fourth letter.

1, 7, 4, B, X, D, 4, 4, 3, Z,
F, R, A, 7, X, 9, B

How many?



How many?



Name: _____

Add 1 or 10.

41	
----	--

21

33	
----	--

17

36	
----	--

18

46	
----	--

23

49	
----	--

39	
----	--

11

26

14	
----	--

43

38

27	
----	--

24	
----	--

47

35	
----	--

Name: _____

Fill in the numbers.

17	18	19
		29
		39
		49

47	48	49
77		

	53

		38		
	47	48		50
		58		
			79	

			29
	37	38	
	47		

63			
	74	75	76

72	73	74	
		94	

37

Name: _____

Connor has a garden. He grows peas, corn, beans, and peppers in the garden. He has eight rows of peas, five rows of corn, two rows of beans, and three rows of peppers. How many rows of vegetables does Connor have in all?

Leilani put 15 slices of pineapple in a bowl. She ate three slices. Her sister ate five slices. How many slices of pineapple were left?

There are 22 books on the shelf. Four books are about horses. How many books are not about horses?

Mark is Kayla's brother. Mark is 16. Kayla is 10 years younger than Mark. How old is Kayla?

$\begin{array}{r} 5 \\ + 4 \\ \hline \end{array}$	$\begin{array}{r} 8 \\ + 7 \\ \hline \end{array}$	$\begin{array}{r} 1 \\ + 6 \\ \hline \end{array}$	$\begin{array}{r} 1 \\ + 3 \\ \hline \end{array}$	$\begin{array}{r} 3 \\ + 9 \\ \hline \end{array}$	$\begin{array}{r} 6 \\ + 6 \\ \hline \end{array}$	$\begin{array}{r} 1 \\ + 5 \\ \hline \end{array}$	$\begin{array}{r} 8 \\ + 1 \\ \hline \end{array}$	$\begin{array}{r} 2 \\ + 1 \\ \hline \end{array}$
---	---	---	---	---	---	---	---	---

Write the missing days of the week.

Monday, _____, Wednesday

Wednesday, _____, Friday

eight

Write the missing sign.

$10 _ 6 = 16$

$2 + 5 = \square$

Name: _____

Megan saw one bee on the brown cake and three bees on the yellow cake. None of the bees tried to sting her. How many bees did she see in all?

Emily has five birds. Ava has two dogs. How many more pets does Emily have?

What is ten less than 53?

Circle the fifth number.

2, Z, 1, 4, B, D, F, A, 8, X,
3, 7, 8, 2, R, F, D

What is ten more than 52?

Holly did 7 math problems. Then she did 3 more problems. How many did she do in all?

Jenna finds 9 seashells. Emma finds 10 more shells. How many shells do they find in all?

There were five pink bears on the shelf. Mrs. Brown put three more bears on the shelf. How many bears are on the shelf now?

Name: _____

Jacob made eight snowballs for his fort. David made seven snowballs. How many snowballs did they make in all?

The girls picked 4 apples, 6 peaches, and 5 pears. How many apples and pears did they pick?

Alex ate 12 jelly beans. Kevin ate 7 jelly beans. How many jelly beans did they eat in all?

Jacob hopes to have a green truck someday. He saw eight trucks today. Four of the trucks Jacob saw were not green. How many of the trucks that Jacob saw were green?

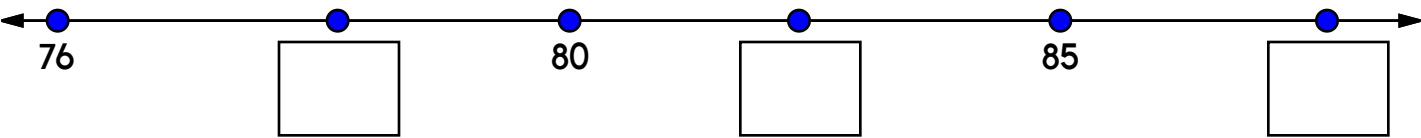
There were 12 green lizards in the tree. Half of the lizards ran away. How many lizards are still in the tree?

Max drew animal cartoons. He drew six rabbits, four deer, three bears, and eight horses. How many rabbits, horses, and deer did he draw?

Name: _____

<p>Jacob cut out 23 paper snowflakes. He put 15 on his window. How many did he have left?</p>	<p>Rosa did 8 math problems. Then she did 3 more problems. How many did she do in all?</p>	<p>Maria had seven beach balls. She gave some away. She had three left. How many balls did she give away?</p>
---	--	---

Write the missing numbers to complete the number line.



Use these numbers: 82, 78, 87


<p>Which shows a way to take apart 6?</p> <p><input type="radio"/> $6 - 1 = 5$</p> <p><input type="radio"/> $8 + 6 = 14$</p> <p><input type="radio"/> $8 - 2 = 6$</p>	<p>6 is more than</p> <p><input type="radio"/> 7 <input type="radio"/> 5 <input type="radio"/> 6</p>	<p>Which shows a way to make 6?</p> <p><input type="radio"/> $9 + 4$ <input type="radio"/> $2 + 4$</p> <p><input type="radio"/> $7 + 5$ <input type="radio"/> $2 + 5$</p>
--	--	---

MORNING N M M O R N I N G N R O R M O R I N G O


SHINE P D V X U B H S H I N E H N S H I N I R

Name: _____


H I J K L M N O P



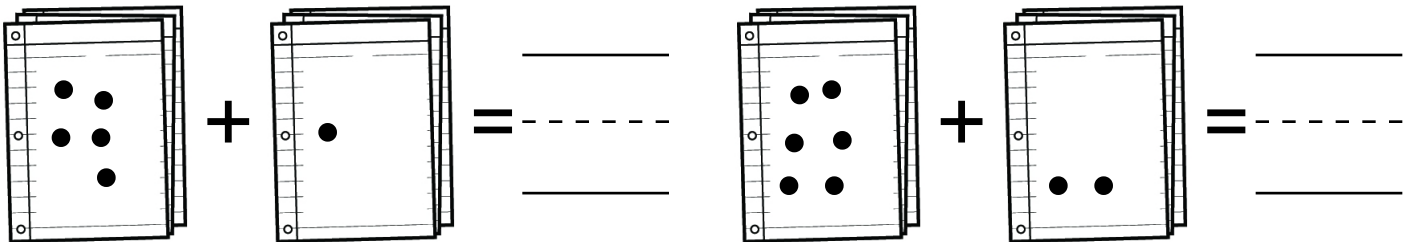
1 2 3 4 5 6 7 8 9 10



1 2 3 4 5 6 7 8 9 10



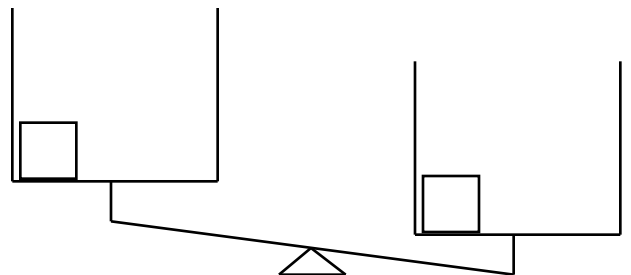
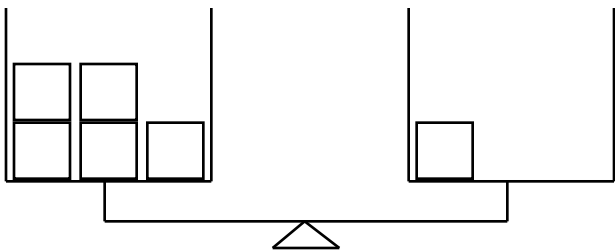
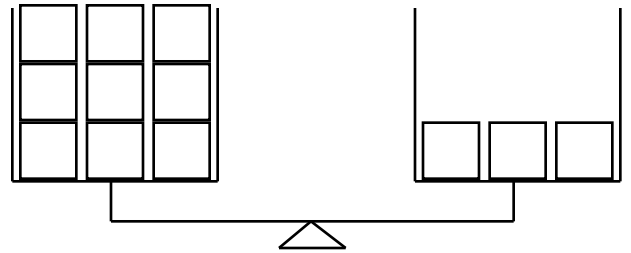
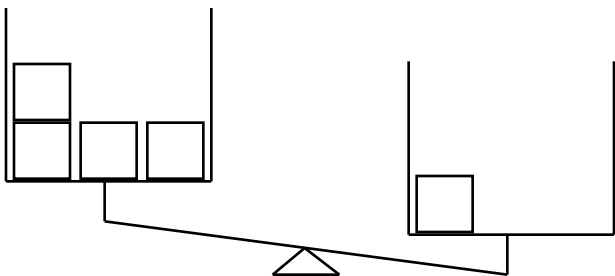
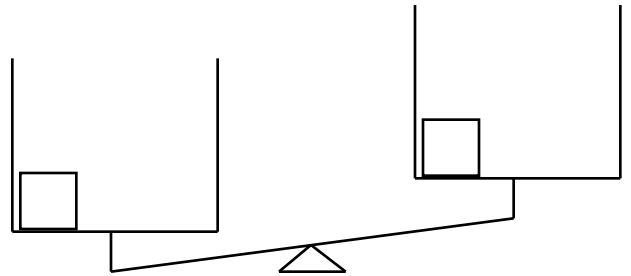
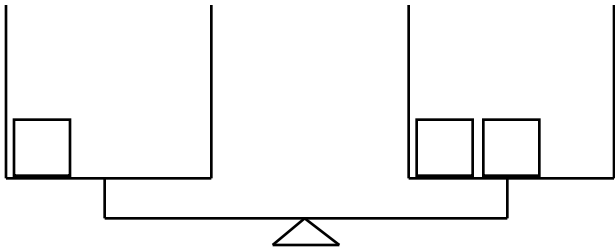
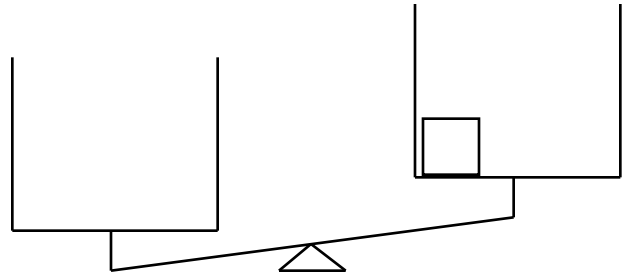
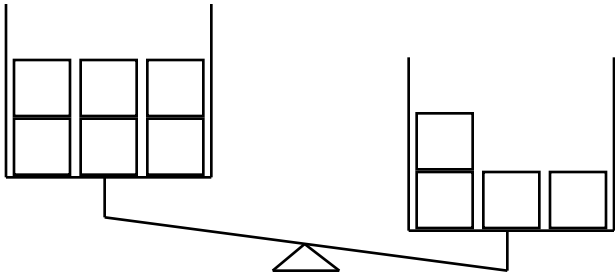
Add the spots.



HE H V E H W R P N C I H H E J E D H E A K F
 CLAM F V G C A K C A H T C L A M L O C L I A M
 ELEVEN E U N E E L E V A N L E O E E L E V E N L

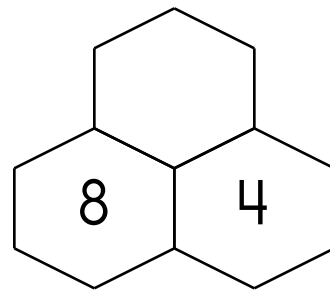
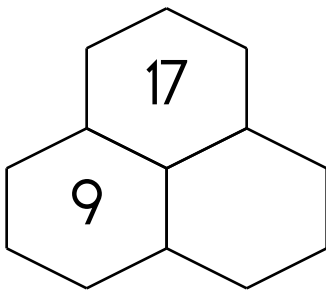
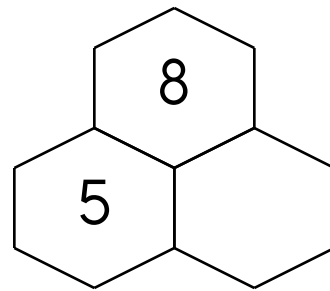
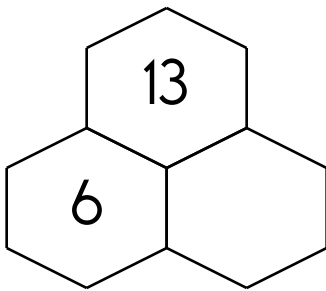
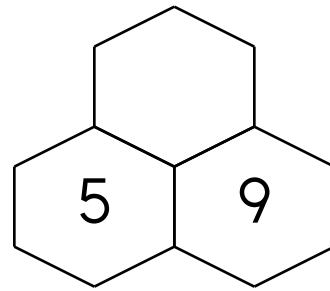
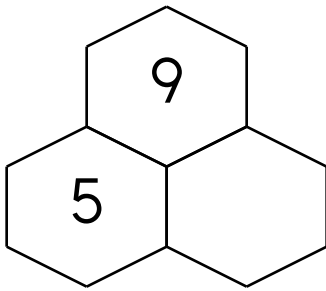
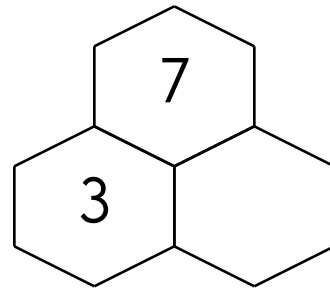
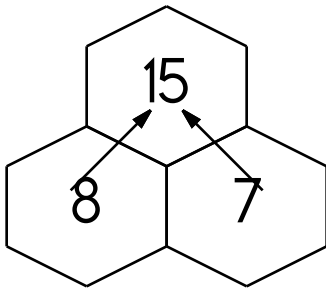
Name: _____

Some blocks are missing. Draw blocks so that the scale picture makes sense.



Name: _____

Fill in the blanks by adding the two numbers below each hexagon.



Double three.

$$44 - \underline{\quad} = 34$$

$$33 + 445 = 478$$

Using the commutative property of addition, what do you think $445 + 33$ is?


Name: _____

Mental Math

— #1 —

Start with the sum of 8 and 12.

20



Double that number.

1 4 2 5 8 4 0 5 3 6 (Circle your answer to double check you are correct.) _____

Divide by 5.

6 8 1 5 8 2 3 1 8 9 _____

Double that number.


6 1 2 1 6 9 1 2 9 2 _____

Mental Math

— #2 —

Start with the number 6.

8 4 4 7 2 7 1 7 6 6 (Circle your answer to double check you are correct.) _____



Triple that number.

1 0 7 5 4 5 1 8 9 2 _____

Add the digits in your number. The sum of that is your new number.

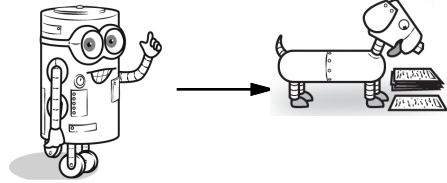
1 1 9 8 4 0 2 9 6 6 _____



Subtract 7.

2 7 4 2 3 3 9 8 1 8 _____

Name: _____

Help Robot find Rover. Color the boxes that have a difference of 5, 7, or 3 to make a path.



	$\begin{array}{r} 13 \\ - 9 \\ \hline \end{array}$	$\begin{array}{r} 9 \\ - 2 \\ \hline \end{array}$	$\begin{array}{r} 11 \\ - 7 \\ \hline \end{array}$	$\begin{array}{r} 15 \\ - 9 \\ \hline \end{array}$	$\begin{array}{r} 9 \\ - 5 \\ \hline \end{array}$
$\begin{array}{r} 8 \\ - 1 \\ \hline \end{array}$	$\begin{array}{r} 11 \\ - 4 \\ \hline \end{array}$	$\begin{array}{r} 9 \\ - 6 \\ \hline \end{array}$	$\begin{array}{r} 7 \\ - 2 \\ \hline \end{array}$	$\begin{array}{r} 8 \\ - 1 \\ \hline \end{array}$	$\begin{array}{r} 8 \\ - 1 \\ \hline \end{array}$
$\begin{array}{r} 13 \\ - 3 \\ \hline \end{array}$	$\begin{array}{r} 15 \\ - 14 \\ \hline \end{array}$	$\begin{array}{r} 7 \\ - 2 \\ \hline \end{array}$	$\begin{array}{r} 15 \\ - 8 \\ \hline \end{array}$	$\begin{array}{r} 9 \\ - 4 \\ \hline \end{array}$	$\begin{array}{r} 15 \\ - 8 \\ \hline \end{array}$
$\begin{array}{r} 7 \\ - 6 \\ \hline \end{array}$	$\begin{array}{r} 14 \\ - 10 \\ \hline \end{array}$	$\begin{array}{r} 8 \\ - 3 \\ \hline \end{array}$	$\begin{array}{r} 10 \\ - 7 \\ \hline \end{array}$	$\begin{array}{r} 8 \\ - 1 \\ \hline \end{array}$	$\begin{array}{r} 10 \\ - 5 \\ \hline \end{array}$
$\begin{array}{r} 11 \\ - 1 \\ \hline \end{array}$	$\begin{array}{r} 8 \\ - 7 \\ \hline \end{array}$	$\begin{array}{r} 7 \\ - 1 \\ \hline \end{array}$	$\begin{array}{r} 12 \\ - 7 \\ \hline \end{array}$	$\begin{array}{r} 15 \\ - 12 \\ \hline \end{array}$	

Name: _____

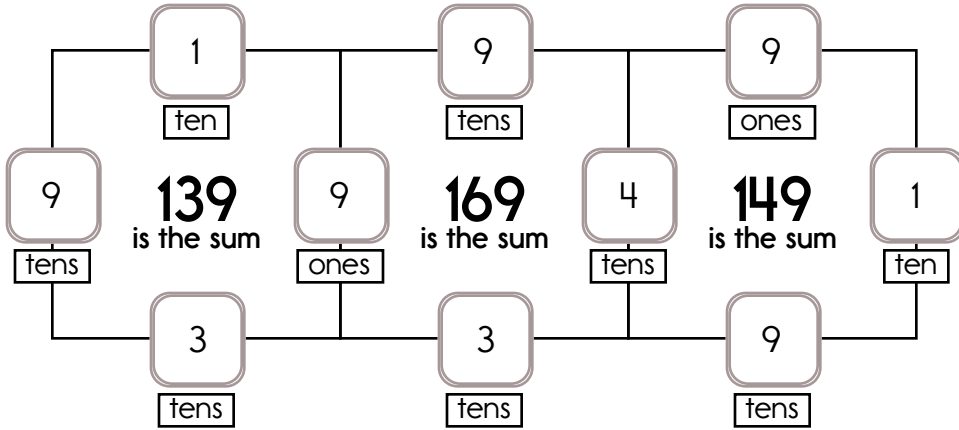
Fill in the missing numbers. How? The sum of the four surrounding numbers is in the center of each square.

Example:

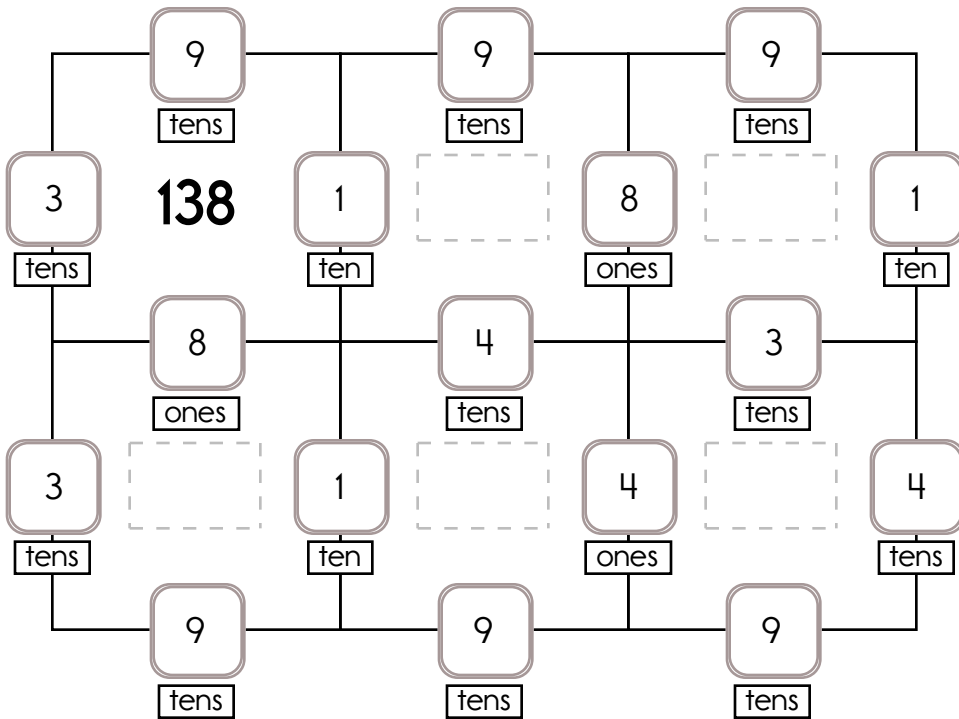
$$90 + 9 + 10 + 30 = 139$$

Example:

$$40 + 10 + 9 + 90 = 149$$



Fill in the missing numbers. How? The sum of the four surrounding numbers is in the center of each square.





4, 8, 12, 16, _____, 24, 28,
32, 36

$7 + 2 = \underline{\quad}$
 $8 + 2 = \underline{\quad}$

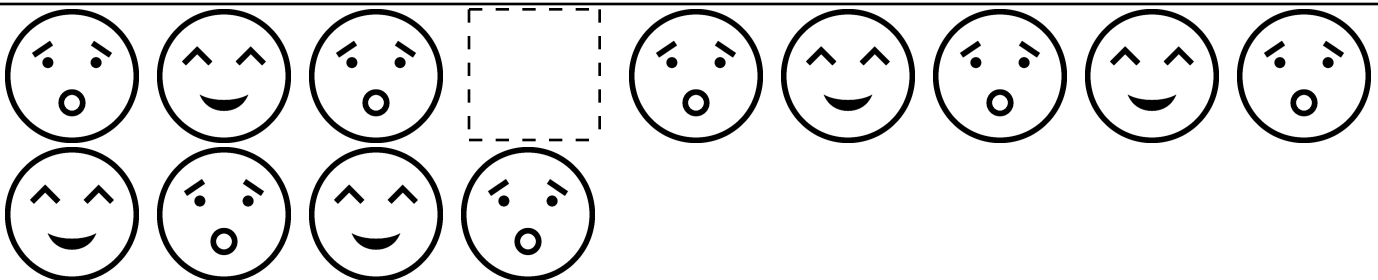

$5 + 5 + 1 = \underline{\quad}$
 $5 + 5 + 2 = \underline{\quad}$

Name: _____

Draw the missing emojis. Explain the rule.



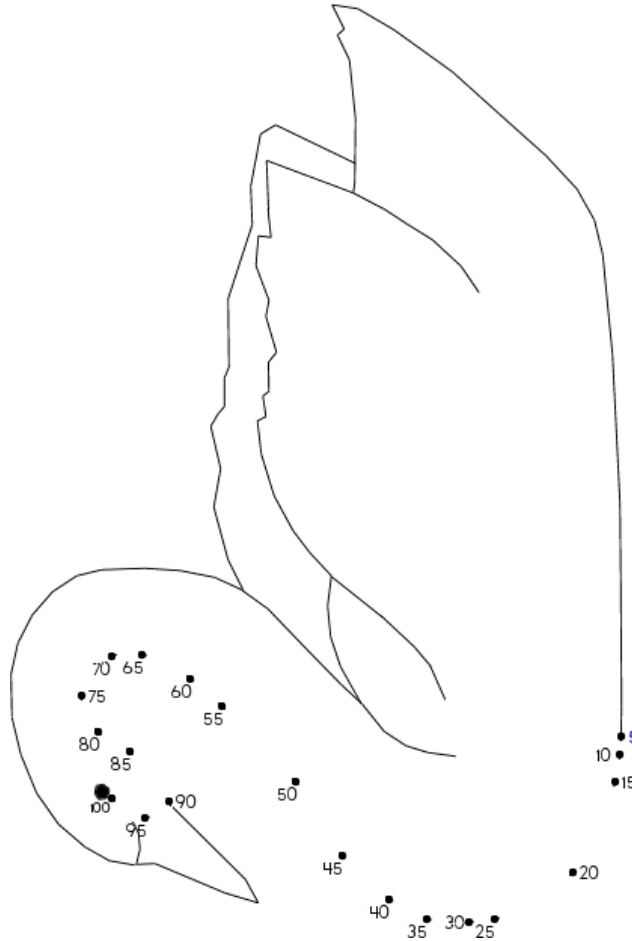
Draw the missing emojis. Explain the rule.



Name: _____

Count by 5s.

5, 10, _____, _____, 25, _____, _____, 40, 45, _____, _____, _____



$7 - 3 = \underline{\hspace{2cm}}$

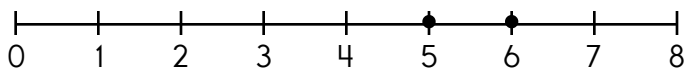
- 8 3 4

four

- 5 4 7

$9 + 4 = \underline{\hspace{2cm}}$

- 13 10 5



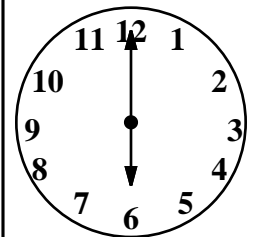
$6 - \underline{\hspace{1cm}} = 5$

$5 + 6$

$9 - 3$

Gavin has five boxes.
Jacob has two boxes.
How many boxes do
the boys have in all?

The boys have _____
boxes.



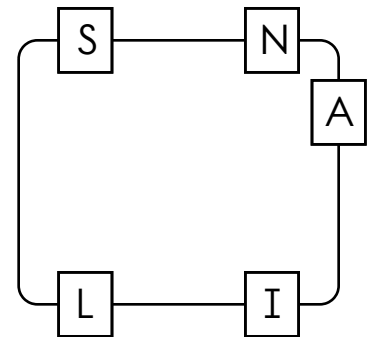
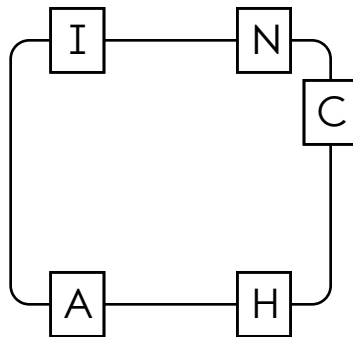
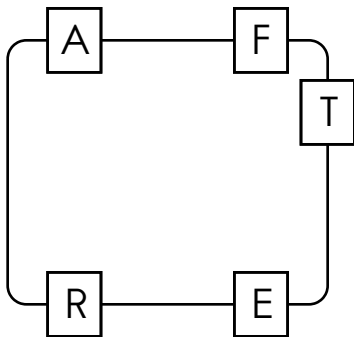
_____ : _____

Name: _____

$2 - 2 = \underline{0}$

$4 - 3 = \underline{\quad}$

Write the hidden word. Start at one letter and then move either left or right. Continue in same direction.



$1 + \underline{\quad} = 6$

Count back 4. What is the difference?

_____ = $10 - 4$

- 14 6 10
 12 5 11

eleven

- 2 11 12

5 is more than

- 5 4 6

TEAM Q T E M J W T A M F S T R E A M L T E A M

TEN X B T U H N T E T E N T N N U G T T E W F

BY O C Y S M A B D B I I K V Z B B Y W Y R B

word root **de** can mean **down**

deposit, demolish

Name: _____

Draw a line to match each problem with the same answer.


3

● three

four

● 4

How many?




3 (three)

5 (five)

2 (two)

What number is the little or hour hand on?



Count and then write the number.



zero, one, two, three, four, five

What number comes after four?

four

zero

five

three

How do you spell 2?

three

five

two

How do you spell 3?

Name: _____

Connor had 6 rubber erasers. He gave Robert 3 erasers. How many erasers does Connor have now?

Ava and Rose want to buy a book. The book is about Earth Day. Ava has saved 8¢. Rose has saved 9¢. How much have they saved in all?

Cindy is four years older than her little brother. He is two years old. How old is Cindy?

Anna had seven apples. Holly had four apples. How many more apples did Anna have?

Jessica and Mary helped clean up the park. Mary picked up 8 more bags of trash than Jessica. Mary picked up 7 bags of trash. How many bags of trash did Jessica pick up?

Justin has four bathtub boats. David has three more boats than Justin has. Hunter has five more boats than David has. How many boats does Hunter have?

WHILE H F U W H I L E E C Q I I K R W L L W I I L

SNAP A N A A B S D N W S N A P F S N A P P S E Z

Name: _____

Complete the pattern.

Circle: 4 Square: 8 Circle: 12 Square: 16 Circle: 20 Square: 24 Circle: 28 _____

Square: 3 Circle: 6 Square: 9 Circle: 12 Square: 15 Circle: 18 Square: 21 _____

Square: 1 Circle: 2 Square: 3 Square: 4 Circle: 5 Square: 6 Square: 7 _____

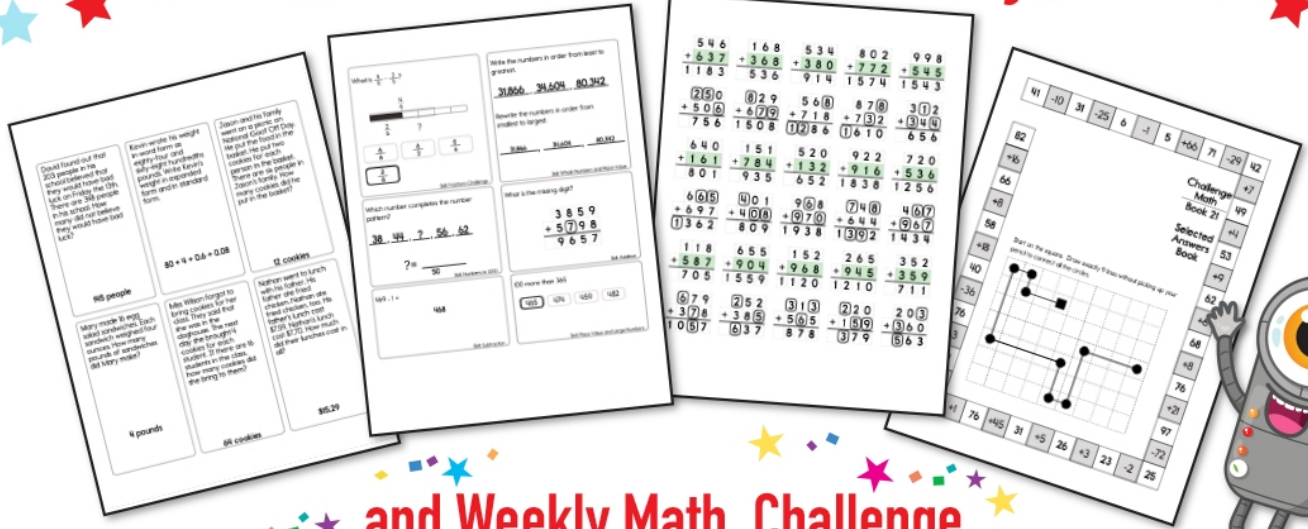
Square: 5 Circle: 10 Square: 15 Square: 20 Circle: 25 Square: 30 Square: 35 _____

Add 1 or 10.


43	36	13	25	22

11	32	41	28	15


Subscribe to Get Answer Keys





and Weekly Math, Challenge
 Workbooks, Posters, Daily Reading,
 and so much more!



SUBSCRIBE TO RECEIVE EVEN MORE
 Answer Keys • Effective Activities • Access
 to as many printables as you need!

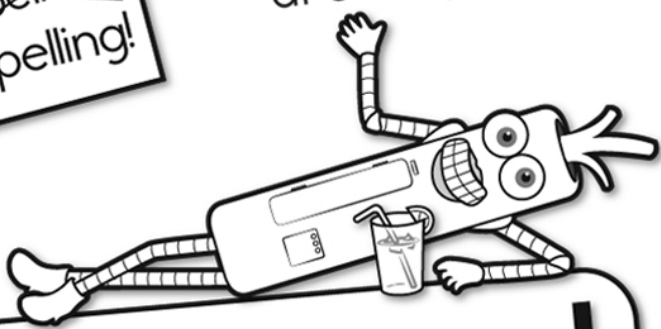


edHelper.com



It's NO PREP at edHelper.

More history!




edHelper.com!



New online math games!



More things for the classroom!



More science!




New ideas!



x = - ÷ < - >

More puzzles!



Take The Boring Out Of Homework!

Easy to
print!

edHelper

Weekly K-6 "Take It Home" Books

Kids want choices
for homework.
"Take It Home" books
have fun graphics and
challenging puzzles and
problems for older kids.

"Dr. Programmer"
challenges kids..

Homework
will never be
the same!

edHelper.com

