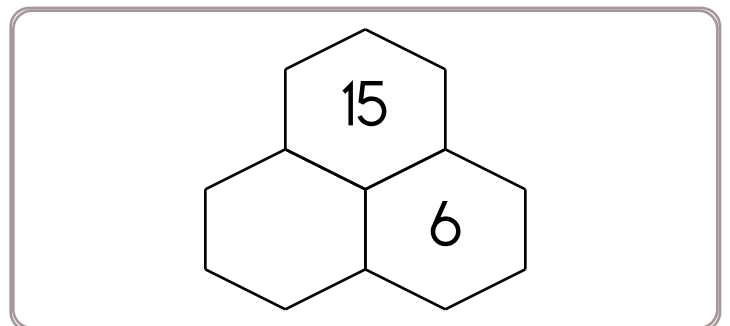
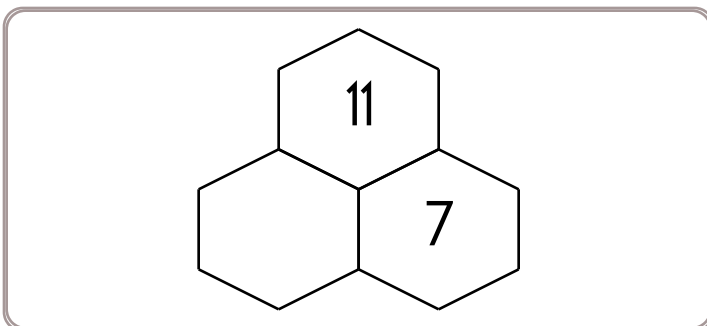
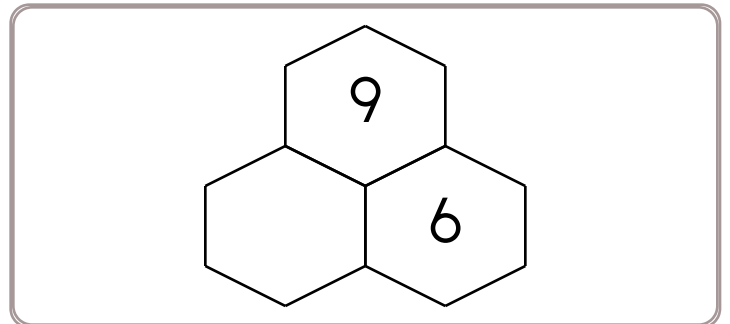
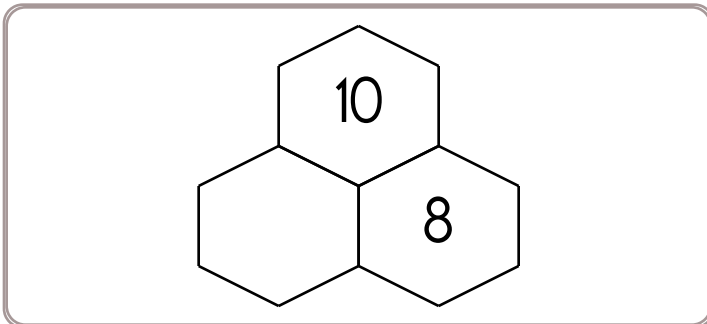
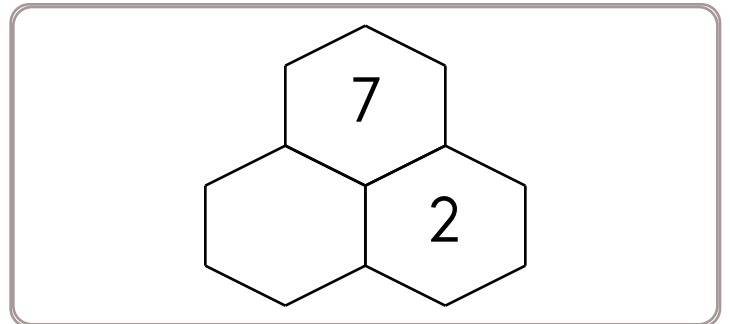
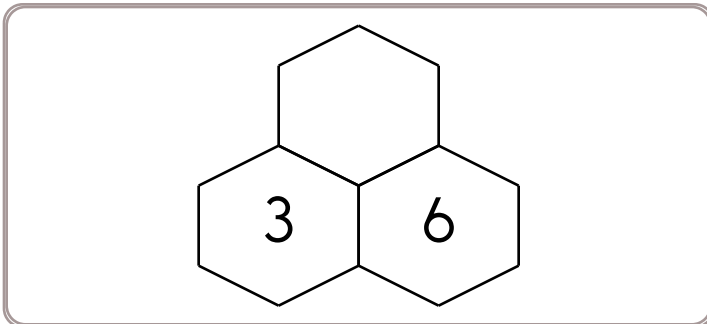
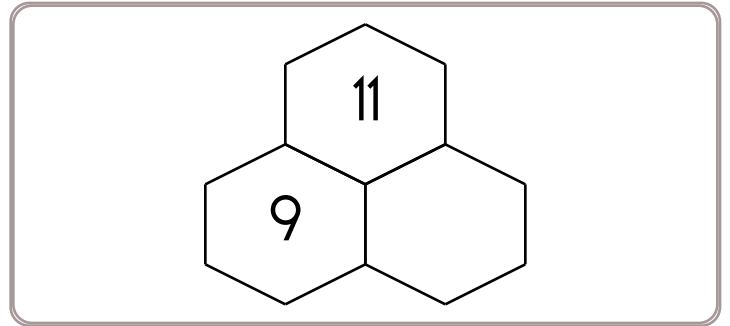
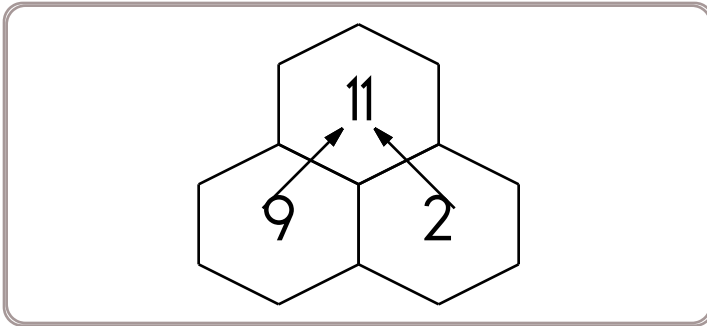


Name: _____

Fill in the blanks by adding the two numbers below each hexagon.



Circle all the ways to make 7.

2 + 5 5 + 1 4 + 3
3 + 6 6 + 1 4 + 1

How much is this?



Circle all the ways to make 11.

1 + 8 9 + 2 8 + 3
3 + 7 6 + 5 4 + 7



Name: _____

Get a fidget spinner! Spin it.

I needed to spin _____ time(s) to finish.

Circle the fourth letter.

B, 6, 5, 3, Z, R, 4, 4, 2, D,
X, F, 5, A, 1, 5, A

Circle the third number.

9, 2, 4, D, F, A, Z, 4, B, 4,
4, R, X, F, A, 2, 5

15, _____, 19, 21, 23, 25

How many?



38, _____, _____, 41, 42,

Which number should
replace the first blank?

$5 + 3 = \underline{\quad}$

$6 + 3 = \underline{\quad}$

1 ten + 0 ones

1 ten + 0 ones

Y, S, Y, S, Y, S, _____, S,

Y, S, Y, S, Y, S

What is ten less than 67?

A, _____, K, P, U, Z


How many?



Name: _____

Only use a pencil to write the numbers on the blank lines. You do not need any scrap paper! Solve it in your head. If you forget a number, then start over. Cool, huh?

Mental Math



= Do it
in your
head!

imagine 2 in your head

add 4

Write the number.

_____ A

imagine 3 in your head

add 4

add 2

Write the number.

_____ B

imagine 5 in your head

add 2

subtract 4

Write the number.

_____ C

imagine 8 in your head

double it

subtract 2

Write the number.

_____ D

_____ E

What is the sum?

$A + B + C + D + E$

Wow! Great job! That's the answer, but do you know how to SPELL the number?

_____ e _____ t _____ - _____ t _____

5 before 14 _____

9 after 15 _____

4 after 16 _____

7 before 16 _____

7 after 12 _____

6 after 18 _____

6 before 15 _____

1 after 11 _____

5 after 14 _____

3 before 17 _____

8 after 19 _____

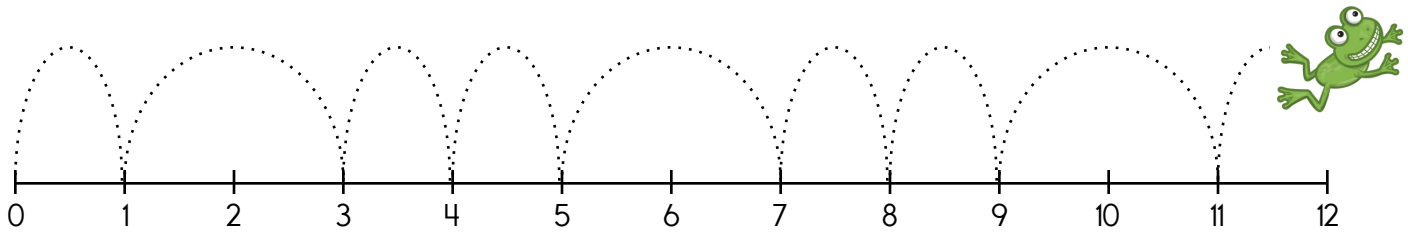
2 after 17 _____

Name: _____

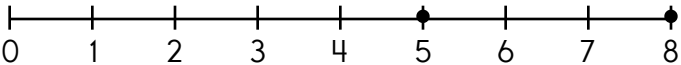
<p>Sally made 15 pumpkin pies. She sold 9 pies. How many pies were left?</p>	<p>Mary picked 11 pink flowers. Then she picked 13 blue flowers. How many flowers did she pick in all?</p>	<p>Ava has 3 coins. They equal 75¢. What coins does Ava have?</p>
--	--	---

<p>Write the missing letter to spell run. r_n ru_ _un</p>	<p>Write the missing sign. 11 ___ 7 = 18</p>
---	--

Look at the pattern. The frog will next go to number _____.



<p>eleven <input type="radio"/> 12 <input type="radio"/> 11 <input type="radio"/> 4</p>	<p>7 is more than <input type="radio"/> 8 <input type="radio"/> 6 <input type="radio"/> 7</p>	<p>8 tens and 2 ones <input type="radio"/> 8 <input type="radio"/> 82 <input type="radio"/> 208</p>
---	---	---

<p>six</p>	 <p>5 + _____ = 8</p>	<p>zero</p>
------------	--	-------------

Name: _____

Look at the monster pattern. Draw the missing monster.



1



2



3



1



2



3



1



2



3



How many?



Cross out the larger number.

~~15~~

11

11

17

17

15

19

12

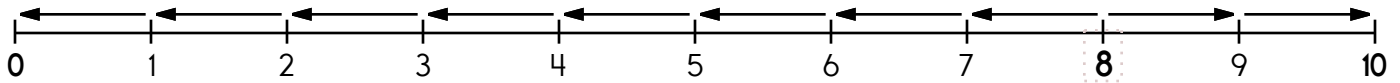
☆ ☆ ☆
that

that

Circle each letter Q you see.

L Q Q F Q Q X D Q Q P W Q Q C

Name: _____



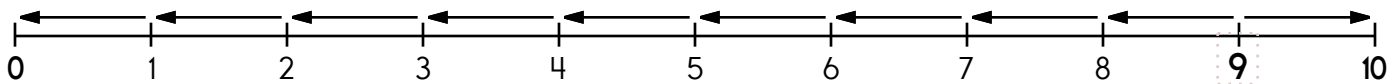
8 is 8 spots away from 0.

$$8 - \underline{\quad} = 0$$

8 is 2 spots away from 10.

$$8 + \underline{\quad} = 10$$

8 is closer to 0 or 10



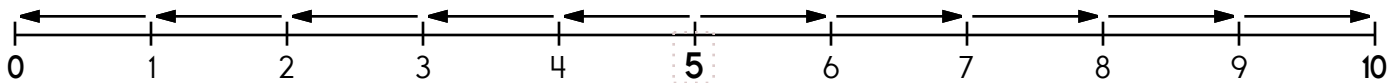
9 is _____ spots away from 0.

$$9 - \underline{\quad} = 0$$

9 is _____ spot away from 10.

$$9 + \underline{\quad} = 10$$

9 is closer to 0 or 10



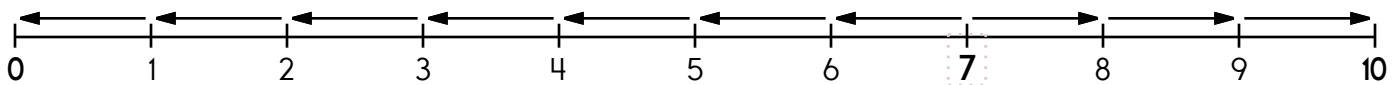
5 is _____ spots away from 0.

$$5 - \underline{\quad} = 0$$

5 is _____ spots away from 10.

$$5 + \underline{\quad} = 10$$

5 is closer to 0 or 10



7 is _____ spots away from 0.

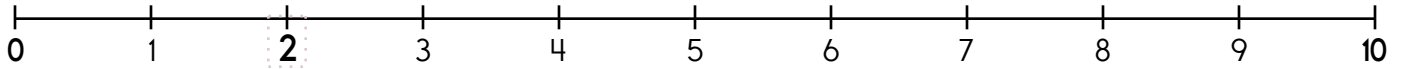
$$7 - \underline{\quad} = 0$$

7 is _____ spots away from 10.

$$7 + \underline{\quad} = 10$$

7 is closer to 0 or 10

Name: _____



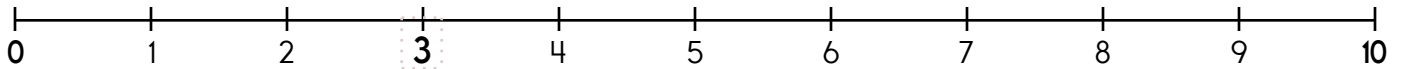
2 is 2 spots away from 0.

$$2 - \underline{\quad} = 0$$

2 is 8 spots away from 10.

$$2 + \underline{\quad} = 10$$

Is 2 closer to 0 or 10? 2 is closer to _____



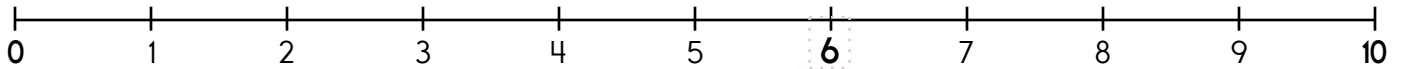
3 is _____ spots away from 0.

$$3 - \underline{\quad} = 0$$

3 is _____ spots away from 10.

$$3 + \underline{\quad} = 10$$

Is 3 closer to 0 or 10? 3 is closer to _____



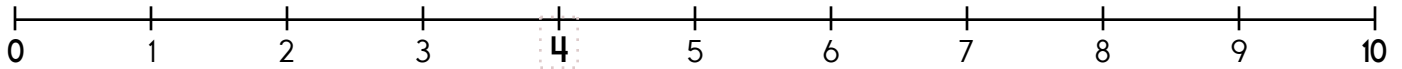
6 is _____ spots away from 0.

$$6 - \underline{\quad} = 0$$

6 is _____ spots away from 10.

$$6 + \underline{\quad} = 10$$

Is 6 closer to 0 or 10? 6 is closer to _____



4 is _____ spots away from 0.

$$4 - \underline{\quad} = 0$$

4 is _____ spots away from 10.

$$4 + \underline{\quad} = 10$$

Is 4 closer to 0 or 10? 4 is closer to _____

Name: _____

Maria counted 40 parents at the picnic. April counted 9 more than Maria. How many parents did April count?

Alex hopes to have a green truck someday. He saw nine trucks today. Four of the trucks Alex saw were not green. How many of the trucks that Alex saw were green?

There were 7 clowns in the circus. There were 6 happy clowns. The rest were sad. How many clowns were sad?

Emma has three red crayons, four blue crayons, and four green crayons. How many crayons does she have in all?

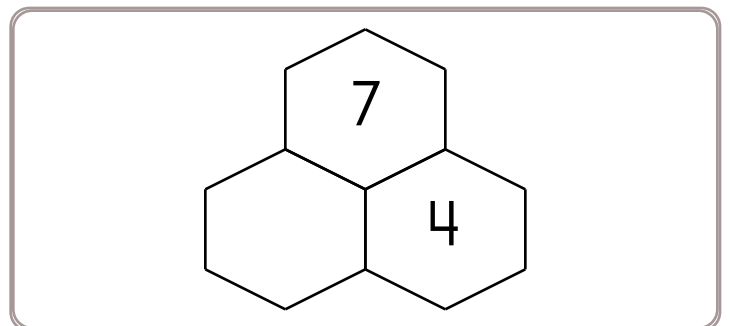
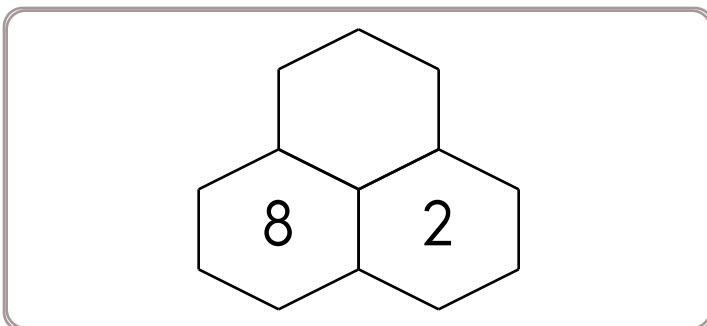
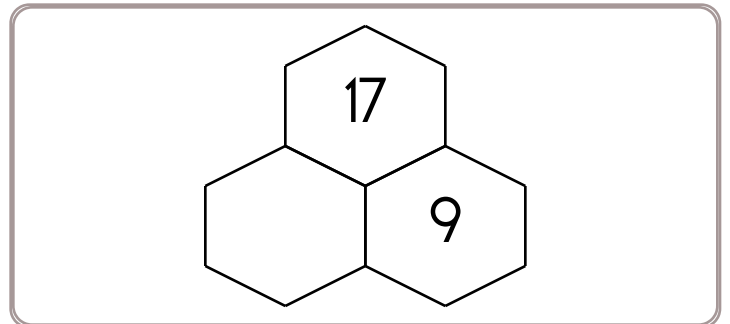
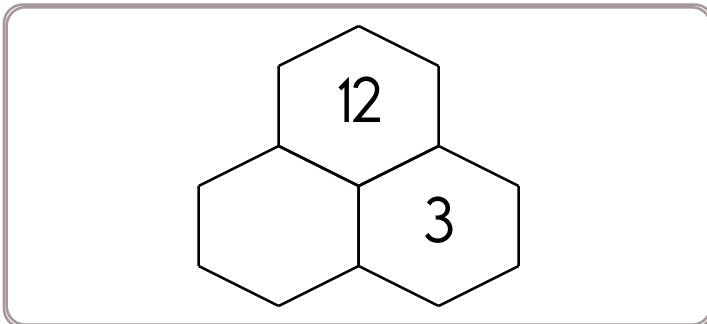
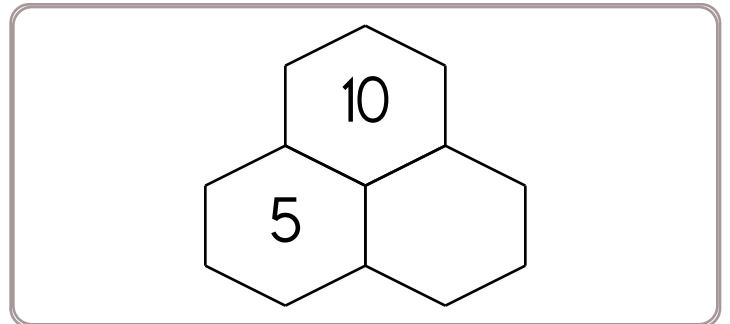
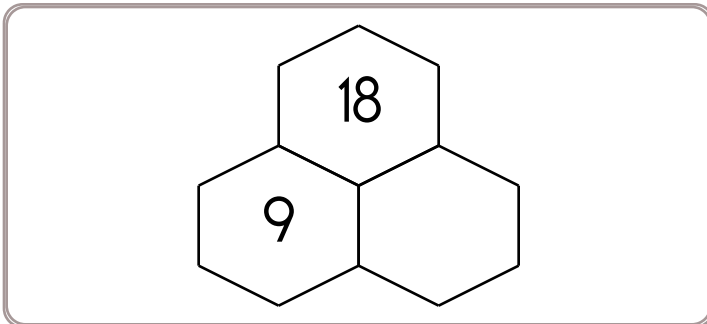
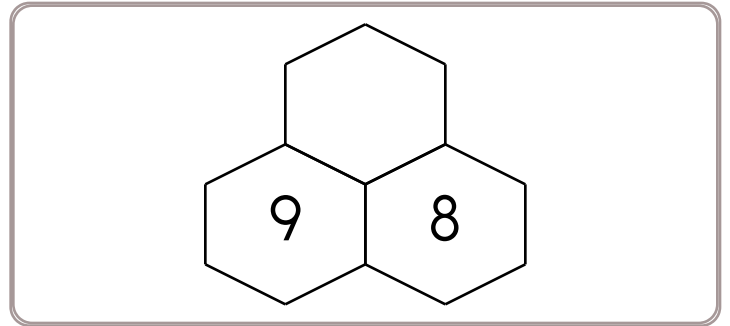
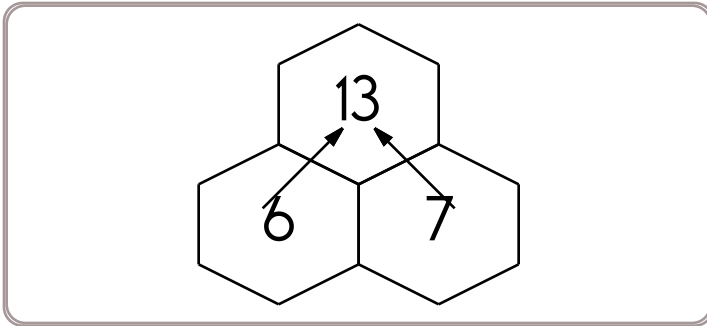
The tray fell onto the floor.

The tray fell onto the floor.

$5 + 8 = \square$	$4 + 5 = \square$	$2 + 9 = \square$	$4 + 2 = \square$	$9 + 4 = \square$	$5 + 8 = \square$
-------------------	-------------------	-------------------	-------------------	-------------------	-------------------

Name: _____

Fill in the blanks by adding the two numbers below each hexagon.



64, 72, 80, _____, 96, 104

How much is this?



$8 + 8 + 2 = \underline{\quad}$
 $8 + 8 + 3 = \underline{\quad}$



Name: _____

Get a fidget spinner! Spin it.

I needed to spin _____ time(s) to finish.

— —
19 ones

— —
77 ones

— —
two tens

— — —
five hundreds and eight
ones

— — — —
91 hundreds

— — —
six hundreds and five ones

— — — —
37 hundreds

— —
nine tens

— — —
59 tens

— — —
eight hundreds and six tens

— — —
68 tens

— — —
seven hundreds and two
ones

— —
four tens

— —
three tens

— — — —
47 hundreds

— — —
seven hundreds and three
ones

— — — —
20 hundreds

— — —
five hundreds and four ones

— — — —
83 hundreds

— —
52 ones

— —
nine tens

— — — —
89 hundreds


— —
78 ones

— —
four tens

Name: _____

Mental Math

— #1 —



▶ Start with the number 4.

4

▶ Increase that number by 5.

6 3 5 5 2 2 3 9 7 9 (Circle your answer to double check you are correct.) _____

▶ Add a dozen.

5 2 1 0 4 5 6 7 3 7 _____

▶ Divide by 3.

8 3 7 9 4 4 2 5 7 6 _____

▶ Triple that number.

9 4 8 2 1 5 2 6 7 4 _____

▶ Add 2 tens.

4 1 2 7 8 1 4 8 9 5 _____

▶ Increase that number by 5.

1 0 5 6 4 6 9 5 7 7 _____

Name: _____

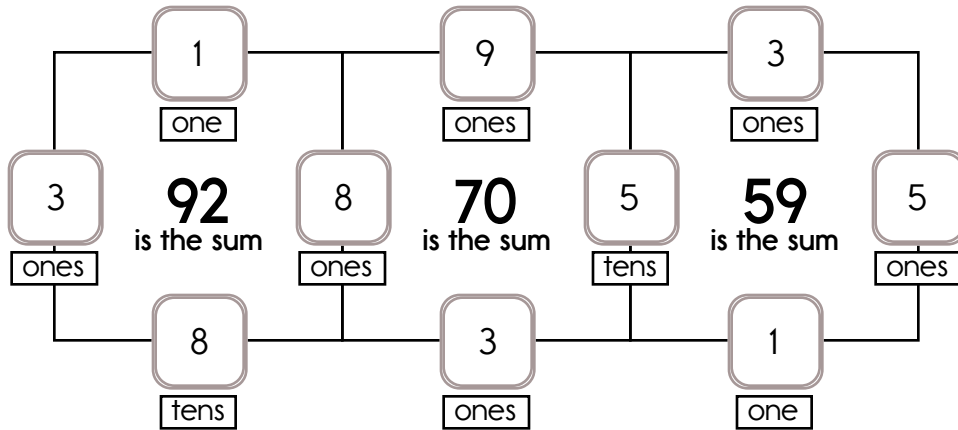
Fill in the missing numbers. How? The sum of the four surrounding numbers is in the center of each square.

Example:

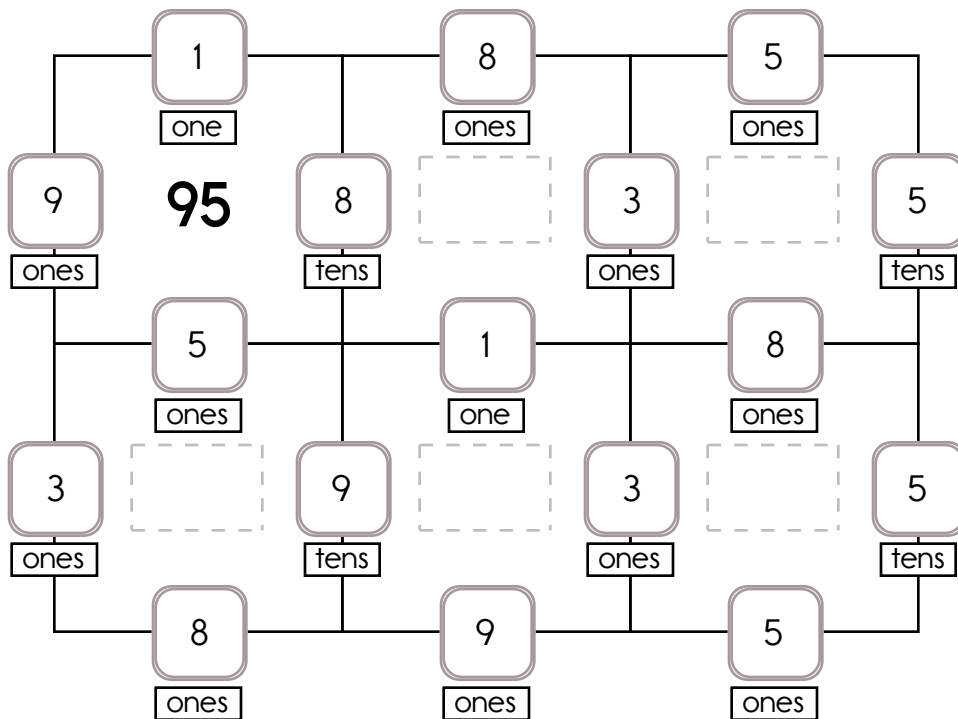
$$3 + 8 + 1 + 80 = 92$$

Example:

$$50 + 5 + 3 + 1 = 59$$



Fill in the missing numbers. How? The sum of the four surrounding numbers is in the center of each square.



7, 9, _____, 13, 15, 17, 19

$36 + 336 = 372$
Using the commutative property of addition, what do you think $336 + 36$ is?

What is ten less than 88?

Name: _____

p e y x j e k p e e b n
e t v e p l t u n l n j
j g k t l t e j y t y f
o t d i t u n e i l t l
p g t j m a h j m t s u
j c s o t t j h t e p e

Read the word.
Clap your hand for each syllable.
How many syllables?



rock

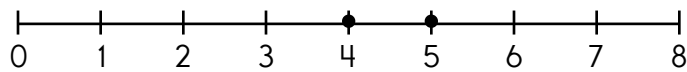
1 2 3

Look for these words **BACKWARDS** in the word search:

pet lie nut
jet

Write the missing letter.

i **t** **w**



$4 + \underline{\quad} = 5$

$13 - 9$



___ **alk**

Write the missing letter to spell **and**.

$11 - 7$

an_ a_d _nd

$6 + 4$



___ **n**

Count by 1.

2 _____ 5

2

___ **wo**

4 is _____ more than 2.

Count back 2. What is the difference?

_____ = $7 - 2$

$14 - 7 = \underline{\quad}$

7 21 12

Which shows a way to take apart 6?

$7 - 1 = 6$ $7 - 6 = 1$

$6 - 5 = 1$

6 2 7 5


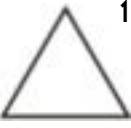
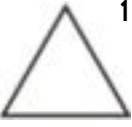

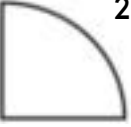

12 8

Name: _____

Each row, column, and box must have the numbers 1 through 4. The first box is done.

3	4		2
2	1		
4	2		

Each row, column, and box must have 4 different pictures.

		 3	 1
 1		 4	
	 2		 3

Name: _____

one 1

fourteen _____

twenty _____

seventeen _____

nine _____

twenty _____

0 _____ **zero**

12 _____

20 _____

0 _____

13 _____

20 _____

$$\underline{\quad} + 9 = 9$$

$$10 + \underline{\quad} = 14$$

_____ and 5 make 15.

$$0 + 7 = \underline{\quad}$$

0 and _____ make 2.

10 and 1 make _____.

1 more than 10 is _____

2 more than 1 is _____

5 more than 6 is _____

7 more than 17 is _____

6 more than 9 is _____

8 more than 14 is _____

2 more than _____ is 15

_____ more than 6 is 11

_____ more than 11 is 14

_____ more than 7 is 13

9 more than _____ is 19

_____ more than 5 is 13

_____ is less than 3.

_____ is greater than 5.

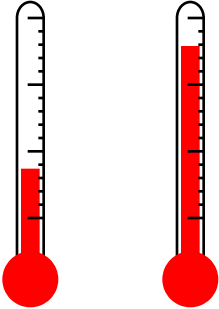
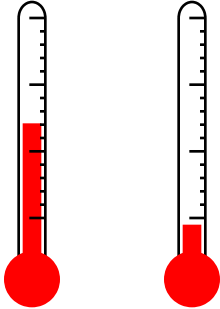
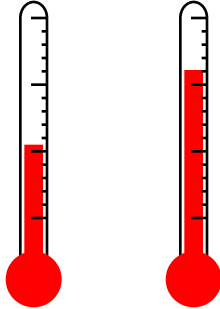
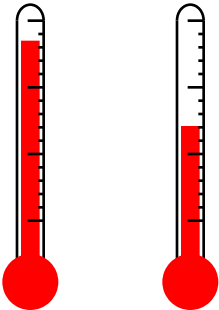
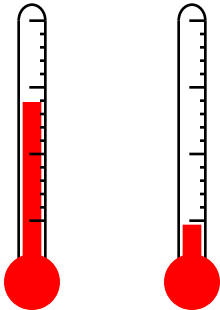
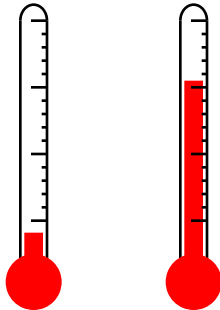

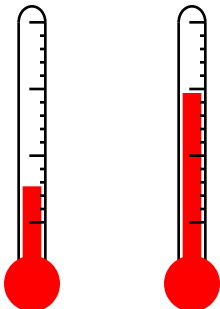
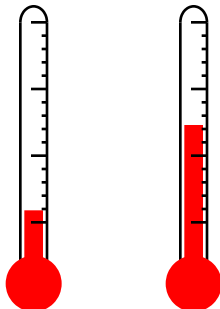

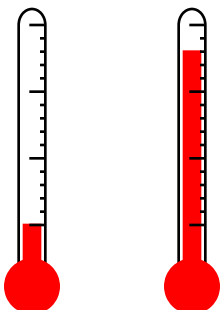
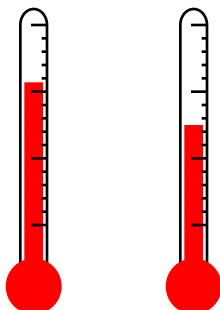
There are _____ tens in 17.

There are _____ ones in 07.


_____ is 0 more than 33

Name: _____


Circle the thermometer that shows a colder temperature.

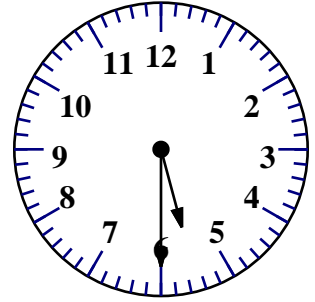
Name: _____



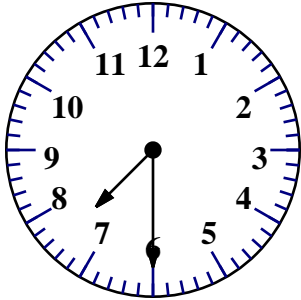
11:30




:



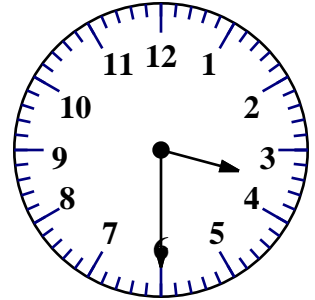
:



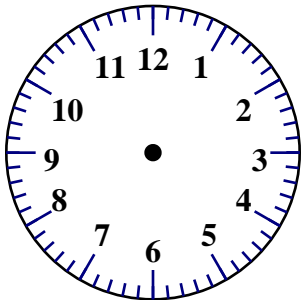
:



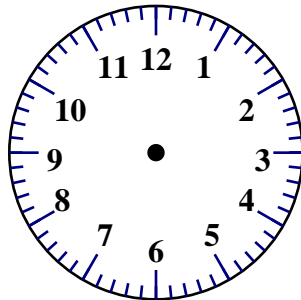
:



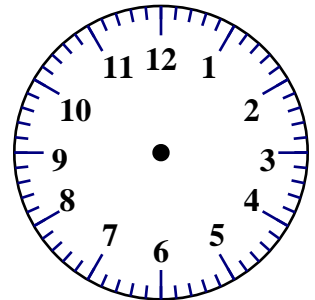
:



Draw 10:30.



Draw 8:30.



Draw 12:30.

Name: _____

Lee has 8 mints. Hal has 11 more than Lee. How many mints does Hal have?

Baba Nina made 25 blini. Her family ate 18 of them. How many blini were left?

Kayla saw 14 birds in the tree. Five flew away. How many birds were left in the tree?

Something bad happened. I _____

_____ •

8 is more than

- 9 8 7

3 tens and 7 ones

- 7 3 37

4 is more than

- 5 3 4

Name: _____

Complete the pattern.

5 10 15 20 25 30 35 _____

2 4 6 8 10 12 14 _____

3 6 9 12 15 18 21 _____

1 2 3 4 5 6 7 _____

4 8 12 16 20 24 28 _____

Add 1 or 10.

39	
----	--

21

41	
----	--

17

19

$9 - 3 = \underline{\quad}$

- 6 14 15

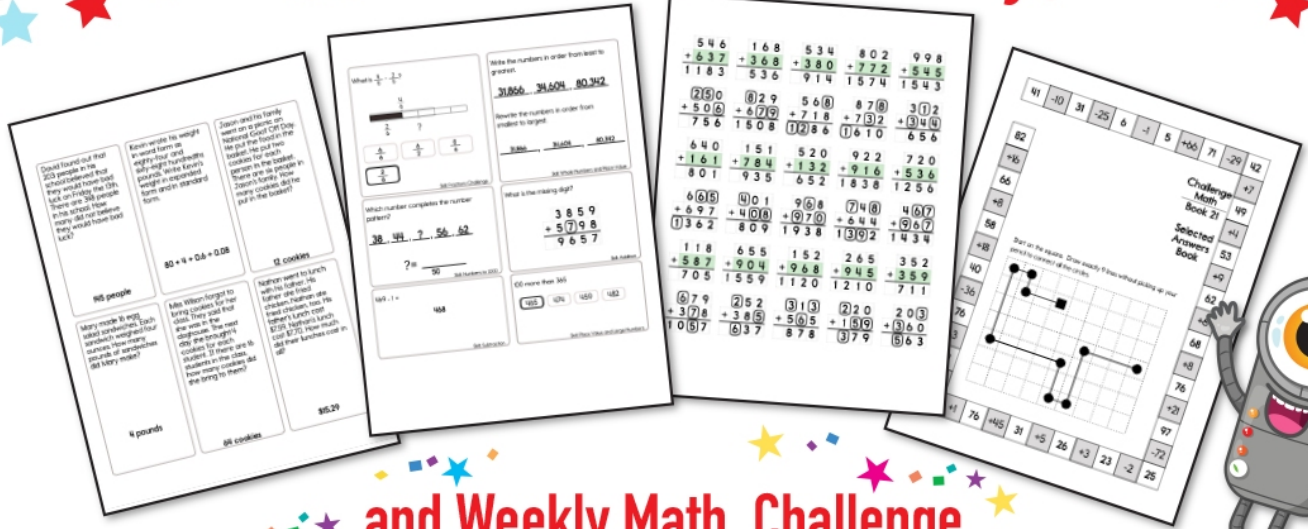
$8 - 5 = \underline{\quad}$

- 5 3 13


nine

- 2 9 1


Subscribe to Get Answer Keys





and Weekly Math, Challenge
 Workbooks, Posters, Daily Reading,
 and so much more!



SUBSCRIBE TO RECEIVE EVEN MORE
 Answer Keys • Effective Activities • Access
 to as many printables as you need!



edHelper.com




It's NO PREP at edHelper.

More history!




edHelper.com!

New online math games!



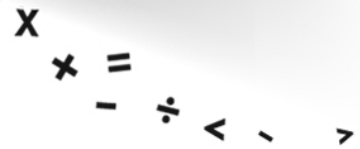
More things for the classroom!




More science!



New ideas!



More puzzles!



Take The Boring Out Of Homework!

Easy to
print!

edHelper

Weekly K-6 "Take It Home" Books

Kids want choices
for homework.
"Take It Home" books
have fun graphics and
challenging puzzles and
problems for older kids.

"Dr. Programmer"
challenges kids..

Homework
will never be
the same!

edHelper.com

